

Name: _____

Week 1 Session 1

2020-21

2s 5s and 10s

3 a week

Times Tables Rock Stars

10 Times Tables

Licensed to Weston Point Primary School, Runcorn

1	$10 \times 11 =$ _____	21	$10 \times 6 =$ _____	41	$10 \times 10 =$ _____
2	$10 \times 4 =$ _____	22	$10 \times 8 =$ _____	42	$3 \times 10 =$ _____
3	$10 \times 7 =$ _____	23	$10 \times 10 =$ _____	43	$10 \times 10 =$ _____
4	$10 \times 2 =$ _____	24	$10 \times 9 =$ _____	44	$1 \times 10 =$ _____
5	$10 \times 6 =$ _____	25	$10 \times 4 =$ _____	45	$10 \times 10 =$ _____
6	$10 \times 8 =$ _____	26	$10 \times 9 =$ _____	46	$11 \times 10 =$ _____
7	$10 \times 9 =$ _____	27	$10 \times 11 =$ _____	47	$6 \times 10 =$ _____
8	$10 \times 7 =$ _____	28	$10 \times 11 =$ _____	48	$11 \times 10 =$ _____
9	$10 \times 7 =$ _____	29	$10 \times 7 =$ _____	49	$7 \times 10 =$ _____
10	$10 \times 7 =$ _____	30	$10 \times 11 =$ _____	50	$12 \times 10 =$ _____
11	$10 \times 9 =$ _____	31	$1 \times 10 =$ _____	51	$9 \times 10 =$ _____
12	$10 \times 4 =$ _____	32	$1 \times 10 =$ _____	52	$6 \times 10 =$ _____
13	$10 \times 1 =$ _____	33	$4 \times 10 =$ _____	53	$10 \times 10 =$ _____
14	$10 \times 11 =$ _____	34	$10 \times 10 =$ _____	54	$11 \times 10 =$ _____
15	$10 \times 9 =$ _____	35	$2 \times 10 =$ _____	55	$9 \times 10 =$ _____
16	$10 \times 2 =$ _____	36	$10 \times 10 =$ _____	56	$6 \times 10 =$ _____
17	$10 \times 11 =$ _____	37	$4 \times 10 =$ _____	57	$1 \times 10 =$ _____
18	$10 \times 5 =$ _____	38	$7 \times 10 =$ _____	58	$9 \times 10 =$ _____
19	$10 \times 1 =$ _____	39	$4 \times 10 =$ _____	59	$12 \times 10 =$ _____
20	$10 \times 6 =$ _____	40	$6 \times 10 =$ _____	60	$12 \times 10 =$ _____

Time taken

:

🕒 3 minute time limit 🕒

Score

60

What's your rock status?

WANNABE

< 18 correct in 3 mins

GARAGE ROCKER

18-19 correct in 3 mins

BUSKER

20-21 correct in 3 mins

GIGGER

22-24 correct in 3 mins

UNSIGNED ACT

25-29 correct in 3 mins

BREAKTHROUGH ARTIST

30-35 correct in 3 mins

SUPPORT ACT

36-44 correct in 3 mins

HEADLINER

45-59 correct in 3 mins

ROCK STAR

All correct in \leq 3mins

ROCK LEGEND

All correct in \leq 2min

ROCK HERO

All correct in \leq 1 min

**TIMES TABLES
ROCK STARS**

Name: _____

Week 1 Session 2

2020-21

2s 5s and 10s

3 a week

Times Tables Rock Stars

10 Times Tables

Licensed to Weston Point Primary School, Runcorn

1	$40 \div 10 =$ _____	21	$100 \div 10 =$ _____	41	$20 \div 10 =$ _____
2	$90 \div 10 =$ _____	22	$30 \div 10 =$ _____	42	$120 \div 10 =$ _____
3	$110 \div 10 =$ _____	23	$30 \div 10 =$ _____	43	$110 \div 10 =$ _____
4	$60 \div 10 =$ _____	24	$110 \div 10 =$ _____	44	$50 \div 10 =$ _____
5	$60 \div 10 =$ _____	25	$30 \div 10 =$ _____	45	$50 \div 10 =$ _____
6	$110 \div 10 =$ _____	26	$90 \div 10 =$ _____	46	$60 \div 10 =$ _____
7	$50 \div 10 =$ _____	27	$30 \div 10 =$ _____	47	$30 \div 10 =$ _____
8	$110 \div 10 =$ _____	28	$20 \div 10 =$ _____	48	$10 \div 10 =$ _____
9	$70 \div 10 =$ _____	29	$100 \div 10 =$ _____	49	$20 \div 10 =$ _____
10	$40 \div 10 =$ _____	30	$60 \div 10 =$ _____	50	$70 \div 10 =$ _____
11	$110 \div 10 =$ _____	31	$30 \div 10 =$ _____	51	$20 \div 10 =$ _____
12	$60 \div 10 =$ _____	32	$20 \div 10 =$ _____	52	$100 \div 10 =$ _____
13	$90 \div 10 =$ _____	33	$30 \div 10 =$ _____	53	$40 \div 10 =$ _____
14	$50 \div 10 =$ _____	34	$10 \div 10 =$ _____	54	$100 \div 10 =$ _____
15	$60 \div 10 =$ _____	35	$70 \div 10 =$ _____	55	$90 \div 10 =$ _____
16	$110 \div 10 =$ _____	36	$100 \div 10 =$ _____	56	$10 \div 10 =$ _____
17	$70 \div 10 =$ _____	37	$40 \div 10 =$ _____	57	$50 \div 10 =$ _____
18	$10 \div 10 =$ _____	38	$90 \div 10 =$ _____	58	$120 \div 10 =$ _____
19	$60 \div 10 =$ _____	39	$30 \div 10 =$ _____	59	$10 \div 10 =$ _____
20	$50 \div 10 =$ _____	40	$60 \div 10 =$ _____	60	$80 \div 10 =$ _____

Time taken

:

🕒 3 minute time limit 🕒

Score

60

What's your rock status?

WANNABE

< 18 correct in 3 mins

GARAGE ROCKER

18-19 correct in 3 mins

BUSKER

20-21 correct in 3 mins

GIGGER

22-24 correct in 3 mins

UNSIGNED ACT

25-29 correct in 3 mins

BREAKTHROUGH ARTIST

30-35 correct in 3 mins

SUPPORT ACT

36-44 correct in 3 mins

HEADLINER

45-59 correct in 3 mins

ROCK STAR

All correct in \leq 3mins

ROCK LEGEND

All correct in \leq 2min

ROCK HERO

All correct in \leq 1 min

**TIMES TABLES
ROCK STARS**

Name: _____

Week 1 Session 3

2020-21

2s 5s and 10s

3 a week

Times Tables Rock Stars

10 Times Tables

Licensed to Weston Point Primary School, Runcorn

1	$10 \times 4 =$ _____	21	$10 \times 7 =$ _____	41	$90 \div 10 =$ _____
2	$10 \times 6 =$ _____	22	$10 \times 10 =$ _____	42	$60 \div 10 =$ _____
3	$10 \times 6 =$ _____	23	$10 \times 3 =$ _____	43	$110 \div 10 =$ _____
4	$10 \times 7 =$ _____	24	$10 \times 4 =$ _____	44	$60 \div 10 =$ _____
5	$10 \times 11 =$ _____	25	$10 \times 2 =$ _____	45	$100 \div 10 =$ _____
6	$10 \times 12 =$ _____	26	$10 \times 12 =$ _____	46	$70 \div 10 =$ _____
7	$10 \times 2 =$ _____	27	$10 \times 2 =$ _____	47	$90 \div 10 =$ _____
8	$10 \times 4 =$ _____	28	$10 \times 11 =$ _____	48	$30 \div 10 =$ _____
9	$10 \times 10 =$ _____	29	$10 \times 8 =$ _____	49	$70 \div 10 =$ _____
10	$10 \times 9 =$ _____	30	$10 \times 9 =$ _____	50	$20 \div 10 =$ _____
11	$10 \times 12 =$ _____	31	$10 \div 10 =$ _____	51	$100 \div 10 =$ _____
12	$10 \times 7 =$ _____	32	$40 \div 10 =$ _____	52	$110 \div 10 =$ _____
13	$10 \times 3 =$ _____	33	$10 \div 10 =$ _____	53	$20 \div 10 =$ _____
14	$10 \times 1 =$ _____	34	$10 \div 10 =$ _____	54	$50 \div 10 =$ _____
15	$10 \times 12 =$ _____	35	$10 \div 10 =$ _____	55	$70 \div 10 =$ _____
16	$10 \times 5 =$ _____	36	$70 \div 10 =$ _____	56	$20 \div 10 =$ _____
17	$10 \times 7 =$ _____	37	$10 \div 10 =$ _____	57	$70 \div 10 =$ _____
18	$10 \times 5 =$ _____	38	$30 \div 10 =$ _____	58	$70 \div 10 =$ _____
19	$10 \times 8 =$ _____	39	$40 \div 10 =$ _____	59	$50 \div 10 =$ _____
20	$10 \times 10 =$ _____	40	$10 \div 10 =$ _____	60	$40 \div 10 =$ _____

Time taken

:

🕒 3 minute time limit 🕒

Score

60

Add up your time

Mins

S1 _____

S2 _____

S3 _____

Total _____

Secs

S1 _____

S2 _____

S3 _____

Total _____

Add up your score

S1 _____

S2 _____

S3 _____

Total _____

Name: _____

Week 2 Session 1

2020-21

2s 5s and 10s

3 a week

Times Tables Rock Stars

10 Times Tables

Licensed to Weston Point Primary School, Runcorn

1	$10 \times 4 =$ _____	21	$10 \times 9 =$ _____	41	$4 \times 10 =$ _____
2	$10 \times 5 =$ _____	22	$10 \times 12 =$ _____	42	$3 \times 10 =$ _____
3	$10 \times 12 =$ _____	23	$10 \times 7 =$ _____	43	$7 \times 10 =$ _____
4	$10 \times 4 =$ _____	24	$10 \times 2 =$ _____	44	$9 \times 10 =$ _____
5	$10 \times 5 =$ _____	25	$10 \times 3 =$ _____	45	$4 \times 10 =$ _____
6	$10 \times 12 =$ _____	26	$10 \times 4 =$ _____	46	$3 \times 10 =$ _____
7	$10 \times 6 =$ _____	27	$10 \times 10 =$ _____	47	$5 \times 10 =$ _____
8	$10 \times 1 =$ _____	28	$10 \times 3 =$ _____	48	$6 \times 10 =$ _____
9	$10 \times 7 =$ _____	29	$10 \times 1 =$ _____	49	$12 \times 10 =$ _____
10	$10 \times 1 =$ _____	30	$10 \times 7 =$ _____	50	$4 \times 10 =$ _____
11	$10 \times 8 =$ _____	31	$4 \times 10 =$ _____	51	$2 \times 10 =$ _____
12	$10 \times 3 =$ _____	32	$4 \times 10 =$ _____	52	$11 \times 10 =$ _____
13	$10 \times 11 =$ _____	33	$12 \times 10 =$ _____	53	$10 \times 10 =$ _____
14	$10 \times 10 =$ _____	34	$3 \times 10 =$ _____	54	$8 \times 10 =$ _____
15	$10 \times 2 =$ _____	35	$4 \times 10 =$ _____	55	$11 \times 10 =$ _____
16	$10 \times 10 =$ _____	36	$11 \times 10 =$ _____	56	$11 \times 10 =$ _____
17	$10 \times 9 =$ _____	37	$2 \times 10 =$ _____	57	$7 \times 10 =$ _____
18	$10 \times 1 =$ _____	38	$11 \times 10 =$ _____	58	$11 \times 10 =$ _____
19	$10 \times 12 =$ _____	39	$12 \times 10 =$ _____	59	$11 \times 10 =$ _____
20	$10 \times 9 =$ _____	40	$3 \times 10 =$ _____	60	$4 \times 10 =$ _____

Time taken

:

🕒 3 minute time limit 🕒

Score

60

What's your rock status?

WANNABE

< 18 correct in 3 mins

GARAGE ROCKER

18-19 correct in 3 mins

BUSKER

20-21 correct in 3 mins

GIGGER

22-24 correct in 3 mins

UNSIGNED ACT

25-29 correct in 3 mins

BREAKTHROUGH ARTIST

30-35 correct in 3 mins

SUPPORT ACT

36-44 correct in 3 mins

HEADLINER

45-59 correct in 3 mins

ROCK STAR

All correct in \leq 3mins

ROCK LEGEND

All correct in \leq 2min

ROCK HERO

All correct in \leq 1 min

**TIMES TABLES
ROCK STARS**

Name: _____

Week 2 Session 2

2020-21

2s 5s and 10s

3 a week

Times Tables Rock Stars

10 Times Tables

Licensed to Weston Point Primary School, Runcorn

1	$110 \div 10 =$ _____	21	$80 \div 10 =$ _____	41	$10 \div 10 =$ _____
2	$90 \div 10 =$ _____	22	$40 \div 10 =$ _____	42	$20 \div 10 =$ _____
3	$30 \div 10 =$ _____	23	$100 \div 10 =$ _____	43	$10 \div 10 =$ _____
4	$70 \div 10 =$ _____	24	$110 \div 10 =$ _____	44	$100 \div 10 =$ _____
5	$120 \div 10 =$ _____	25	$20 \div 10 =$ _____	45	$50 \div 10 =$ _____
6	$110 \div 10 =$ _____	26	$60 \div 10 =$ _____	46	$20 \div 10 =$ _____
7	$100 \div 10 =$ _____	27	$110 \div 10 =$ _____	47	$90 \div 10 =$ _____
8	$120 \div 10 =$ _____	28	$100 \div 10 =$ _____	48	$100 \div 10 =$ _____
9	$90 \div 10 =$ _____	29	$100 \div 10 =$ _____	49	$100 \div 10 =$ _____
10	$50 \div 10 =$ _____	30	$40 \div 10 =$ _____	50	$50 \div 10 =$ _____
11	$50 \div 10 =$ _____	31	$50 \div 10 =$ _____	51	$50 \div 10 =$ _____
12	$30 \div 10 =$ _____	32	$40 \div 10 =$ _____	52	$120 \div 10 =$ _____
13	$90 \div 10 =$ _____	33	$50 \div 10 =$ _____	53	$40 \div 10 =$ _____
14	$90 \div 10 =$ _____	34	$50 \div 10 =$ _____	54	$50 \div 10 =$ _____
15	$50 \div 10 =$ _____	35	$50 \div 10 =$ _____	55	$50 \div 10 =$ _____
16	$50 \div 10 =$ _____	36	$70 \div 10 =$ _____	56	$70 \div 10 =$ _____
17	$90 \div 10 =$ _____	37	$110 \div 10 =$ _____	57	$50 \div 10 =$ _____
18	$50 \div 10 =$ _____	38	$20 \div 10 =$ _____	58	$60 \div 10 =$ _____
19	$90 \div 10 =$ _____	39	$120 \div 10 =$ _____	59	$10 \div 10 =$ _____
20	$20 \div 10 =$ _____	40	$30 \div 10 =$ _____	60	$10 \div 10 =$ _____

Time taken

:

🕒 3 minute time limit 🕒

Score

60

What's your rock status?

WANNABE

< 18 correct in 3 mins

GARAGE ROCKER

18-19 correct in 3 mins

BUSKER

20-21 correct in 3 mins

GIGGER

22-24 correct in 3 mins

UNSIGNED ACT

25-29 correct in 3 mins

BREAKTHROUGH ARTIST

30-35 correct in 3 mins

SUPPORT ACT

36-44 correct in 3 mins

HEADLINER

45-59 correct in 3 mins

ROCK STAR

All correct in \leq 3mins

ROCK LEGEND

All correct in \leq 2min

ROCK HERO

All correct in \leq 1 min

**TIMES TABLES
ROCK STARS**

Name: _____

Week 2 Session 3

2020-21

2s 5s and 10s

3 a week

Times Tables Rock Stars

10 Times Tables

Licensed to Weston Point Primary School, Runcorn

1	$10 \times 4 =$ _____	21	$10 \times 11 =$ _____	41	$90 \div 10 =$ _____
2	$10 \times 4 =$ _____	22	$10 \times 3 =$ _____	42	$80 \div 10 =$ _____
3	$10 \times 8 =$ _____	23	$10 \times 7 =$ _____	43	$30 \div 10 =$ _____
4	$10 \times 12 =$ _____	24	$10 \times 10 =$ _____	44	$10 \div 10 =$ _____
5	$10 \times 7 =$ _____	25	$10 \times 8 =$ _____	45	$60 \div 10 =$ _____
6	$10 \times 11 =$ _____	26	$10 \times 7 =$ _____	46	$80 \div 10 =$ _____
7	$10 \times 7 =$ _____	27	$10 \times 12 =$ _____	47	$110 \div 10 =$ _____
8	$10 \times 11 =$ _____	28	$10 \times 9 =$ _____	48	$70 \div 10 =$ _____
9	$10 \times 11 =$ _____	29	$10 \times 4 =$ _____	49	$40 \div 10 =$ _____
10	$10 \times 5 =$ _____	30	$10 \times 4 =$ _____	50	$10 \div 10 =$ _____
11	$10 \times 3 =$ _____	31	$120 \div 10 =$ _____	51	$120 \div 10 =$ _____
12	$10 \times 6 =$ _____	32	$30 \div 10 =$ _____	52	$20 \div 10 =$ _____
13	$10 \times 1 =$ _____	33	$70 \div 10 =$ _____	53	$110 \div 10 =$ _____
14	$10 \times 1 =$ _____	34	$90 \div 10 =$ _____	54	$40 \div 10 =$ _____
15	$10 \times 9 =$ _____	35	$80 \div 10 =$ _____	55	$50 \div 10 =$ _____
16	$10 \times 5 =$ _____	36	$70 \div 10 =$ _____	56	$60 \div 10 =$ _____
17	$10 \times 7 =$ _____	37	$70 \div 10 =$ _____	57	$100 \div 10 =$ _____
18	$10 \times 12 =$ _____	38	$50 \div 10 =$ _____	58	$70 \div 10 =$ _____
19	$10 \times 7 =$ _____	39	$80 \div 10 =$ _____	59	$80 \div 10 =$ _____
20	$10 \times 1 =$ _____	40	$100 \div 10 =$ _____	60	$10 \div 10 =$ _____

Time taken

:

🕒 3 minute time limit 🕒

Score

60

Add up your time

Mins

S1 _____

S2 _____

S3 _____

Total _____

Secs

S1 _____

S2 _____

S3 _____

Total _____

Add up your score

S1 _____

S2 _____

S3 _____

Total _____

Name: _____

Week 3 Session 1

2020-21

2s 5s and 10s

3 a week

Times Tables Rock Stars

2 Times Tables

Licensed to Weston Point Primary School, Runcorn

1	$2 \times 5 =$ _____	21	$2 \times 3 =$ _____	41	$5 \times 2 =$ _____
2	$2 \times 9 =$ _____	22	$2 \times 8 =$ _____	42	$3 \times 2 =$ _____
3	$2 \times 3 =$ _____	23	$2 \times 1 =$ _____	43	$2 \times 2 =$ _____
4	$2 \times 11 =$ _____	24	$2 \times 6 =$ _____	44	$10 \times 2 =$ _____
5	$2 \times 1 =$ _____	25	$2 \times 6 =$ _____	45	$11 \times 2 =$ _____
6	$2 \times 9 =$ _____	26	$2 \times 11 =$ _____	46	$12 \times 2 =$ _____
7	$2 \times 5 =$ _____	27	$2 \times 6 =$ _____	47	$4 \times 2 =$ _____
8	$2 \times 1 =$ _____	28	$2 \times 7 =$ _____	48	$7 \times 2 =$ _____
9	$2 \times 4 =$ _____	29	$2 \times 4 =$ _____	49	$10 \times 2 =$ _____
10	$2 \times 10 =$ _____	30	$2 \times 5 =$ _____	50	$5 \times 2 =$ _____
11	$2 \times 7 =$ _____	31	$5 \times 2 =$ _____	51	$8 \times 2 =$ _____
12	$2 \times 10 =$ _____	32	$9 \times 2 =$ _____	52	$11 \times 2 =$ _____
13	$2 \times 6 =$ _____	33	$1 \times 2 =$ _____	53	$7 \times 2 =$ _____
14	$2 \times 6 =$ _____	34	$3 \times 2 =$ _____	54	$12 \times 2 =$ _____
15	$2 \times 11 =$ _____	35	$7 \times 2 =$ _____	55	$5 \times 2 =$ _____
16	$2 \times 10 =$ _____	36	$1 \times 2 =$ _____	56	$9 \times 2 =$ _____
17	$2 \times 9 =$ _____	37	$7 \times 2 =$ _____	57	$10 \times 2 =$ _____
18	$2 \times 9 =$ _____	38	$10 \times 2 =$ _____	58	$8 \times 2 =$ _____
19	$2 \times 2 =$ _____	39	$6 \times 2 =$ _____	59	$4 \times 2 =$ _____
20	$2 \times 12 =$ _____	40	$3 \times 2 =$ _____	60	$7 \times 2 =$ _____

Time taken

:

🕒 3 minute time limit 🕒

Score

60

What's your rock status?

WANNABE

< 18 correct in 3 mins

GARAGE ROCKER

18-19 correct in 3 mins

BUSKER

20-21 correct in 3 mins

GIGGER

22-24 correct in 3 mins

UNSIGNED ACT

25-29 correct in 3 mins

BREAKTHROUGH ARTIST

30-35 correct in 3 mins

SUPPORT ACT

36-44 correct in 3 mins

HEADLINER

45-59 correct in 3 mins

ROCK STAR

All correct in \leq 3mins

ROCK LEGEND

All correct in \leq 2min

ROCK HERO

All correct in \leq 1 min

**TIMES TABLES
ROCK STARS**

Name: _____

Week 3 Session 2

2020-21

2s 5s and 10s

3 a week

Times Tables Rock Stars

2 Times Tables

Licensed to Weston Point Primary School, Runcorn

1	$22 \div 2 =$ _____	21	$16 \div 2 =$ _____	41	$6 \div 2 =$ _____
2	$20 \div 2 =$ _____	22	$20 \div 2 =$ _____	42	$10 \div 2 =$ _____
3	$22 \div 2 =$ _____	23	$10 \div 2 =$ _____	43	$20 \div 2 =$ _____
4	$14 \div 2 =$ _____	24	$6 \div 2 =$ _____	44	$24 \div 2 =$ _____
5	$6 \div 2 =$ _____	25	$14 \div 2 =$ _____	45	$6 \div 2 =$ _____
6	$8 \div 2 =$ _____	26	$10 \div 2 =$ _____	46	$22 \div 2 =$ _____
7	$20 \div 2 =$ _____	27	$2 \div 2 =$ _____	47	$10 \div 2 =$ _____
8	$18 \div 2 =$ _____	28	$20 \div 2 =$ _____	48	$12 \div 2 =$ _____
9	$16 \div 2 =$ _____	29	$18 \div 2 =$ _____	49	$4 \div 2 =$ _____
10	$22 \div 2 =$ _____	30	$8 \div 2 =$ _____	50	$14 \div 2 =$ _____
11	$10 \div 2 =$ _____	31	$4 \div 2 =$ _____	51	$24 \div 2 =$ _____
12	$2 \div 2 =$ _____	32	$24 \div 2 =$ _____	52	$12 \div 2 =$ _____
13	$4 \div 2 =$ _____	33	$20 \div 2 =$ _____	53	$18 \div 2 =$ _____
14	$10 \div 2 =$ _____	34	$8 \div 2 =$ _____	54	$18 \div 2 =$ _____
15	$22 \div 2 =$ _____	35	$2 \div 2 =$ _____	55	$10 \div 2 =$ _____
16	$18 \div 2 =$ _____	36	$22 \div 2 =$ _____	56	$24 \div 2 =$ _____
17	$12 \div 2 =$ _____	37	$18 \div 2 =$ _____	57	$20 \div 2 =$ _____
18	$22 \div 2 =$ _____	38	$22 \div 2 =$ _____	58	$16 \div 2 =$ _____
19	$4 \div 2 =$ _____	39	$6 \div 2 =$ _____	59	$6 \div 2 =$ _____
20	$6 \div 2 =$ _____	40	$12 \div 2 =$ _____	60	$10 \div 2 =$ _____

Time taken

:

🕒 3 minute time limit 🕒

Score

60

What's your rock status?

WANNABE

< 18 correct in 3 mins

GARAGE ROCKER

18-19 correct in 3 mins

BUSKER

20-21 correct in 3 mins

GIGGER

22-24 correct in 3 mins

UNSIGNED ACT

25-29 correct in 3 mins

BREAKTHROUGH ARTIST

30-35 correct in 3 mins

SUPPORT ACT

36-44 correct in 3 mins

HEADLINER

45-59 correct in 3 mins

ROCK STAR

All correct in ≤ 3 mins

ROCK LEGEND

All correct in ≤ 2 min

ROCK HERO

All correct in ≤ 1 min

**TIMES TABLES
ROCK STARS**

Name: _____

Week 3 Session 3

2020-21

2s 5s and 10s

3 a week

Times Tables Rock Stars

2 Times Tables

Licensed to Weston Point Primary School, Runcorn

1	$2 \times 10 =$ _____	21	$2 \times 4 =$ _____	41	$16 \div 2 =$ _____
2	$2 \times 9 =$ _____	22	$2 \times 10 =$ _____	42	$20 \div 2 =$ _____
3	$2 \times 6 =$ _____	23	$2 \times 9 =$ _____	43	$24 \div 2 =$ _____
4	$2 \times 2 =$ _____	24	$2 \times 12 =$ _____	44	$2 \div 2 =$ _____
5	$2 \times 5 =$ _____	25	$2 \times 8 =$ _____	45	$18 \div 2 =$ _____
6	$2 \times 6 =$ _____	26	$2 \times 4 =$ _____	46	$14 \div 2 =$ _____
7	$2 \times 12 =$ _____	27	$2 \times 1 =$ _____	47	$2 \div 2 =$ _____
8	$2 \times 8 =$ _____	28	$2 \times 11 =$ _____	48	$18 \div 2 =$ _____
9	$2 \times 8 =$ _____	29	$2 \times 1 =$ _____	49	$22 \div 2 =$ _____
10	$2 \times 4 =$ _____	30	$2 \times 4 =$ _____	50	$24 \div 2 =$ _____
11	$2 \times 7 =$ _____	31	$18 \div 2 =$ _____	51	$2 \div 2 =$ _____
12	$2 \times 8 =$ _____	32	$18 \div 2 =$ _____	52	$12 \div 2 =$ _____
13	$2 \times 5 =$ _____	33	$24 \div 2 =$ _____	53	$10 \div 2 =$ _____
14	$2 \times 12 =$ _____	34	$16 \div 2 =$ _____	54	$24 \div 2 =$ _____
15	$2 \times 12 =$ _____	35	$20 \div 2 =$ _____	55	$14 \div 2 =$ _____
16	$2 \times 7 =$ _____	36	$16 \div 2 =$ _____	56	$6 \div 2 =$ _____
17	$2 \times 1 =$ _____	37	$2 \div 2 =$ _____	57	$20 \div 2 =$ _____
18	$2 \times 7 =$ _____	38	$10 \div 2 =$ _____	58	$10 \div 2 =$ _____
19	$2 \times 2 =$ _____	39	$2 \div 2 =$ _____	59	$14 \div 2 =$ _____
20	$2 \times 7 =$ _____	40	$8 \div 2 =$ _____	60	$20 \div 2 =$ _____

Time taken

:

🕒 3 minute time limit 🕒

Score

60

Add up your time

Mins
S1 _____
S2 _____
S3 _____
Total _____

Secs
S1 _____
S2 _____
S3 _____
Total _____

Add up your score
S1 _____
S2 _____
S3 _____
Total _____

Name: _____

Week 4 Session 1

2020-21

2s 5s and 10s

3 a week

Times Tables Rock Stars

2 Times Tables

Licensed to Weston Point Primary School, Runcorn

1	$2 \times 9 =$ _____	21	$2 \times 6 =$ _____	41	$5 \times 2 =$ _____
2	$2 \times 4 =$ _____	22	$2 \times 9 =$ _____	42	$1 \times 2 =$ _____
3	$2 \times 1 =$ _____	23	$2 \times 9 =$ _____	43	$3 \times 2 =$ _____
4	$2 \times 8 =$ _____	24	$2 \times 6 =$ _____	44	$7 \times 2 =$ _____
5	$2 \times 7 =$ _____	25	$2 \times 4 =$ _____	45	$11 \times 2 =$ _____
6	$2 \times 11 =$ _____	26	$2 \times 2 =$ _____	46	$2 \times 2 =$ _____
7	$2 \times 12 =$ _____	27	$2 \times 10 =$ _____	47	$2 \times 2 =$ _____
8	$2 \times 6 =$ _____	28	$2 \times 10 =$ _____	48	$7 \times 2 =$ _____
9	$2 \times 7 =$ _____	29	$2 \times 5 =$ _____	49	$10 \times 2 =$ _____
10	$2 \times 12 =$ _____	30	$2 \times 11 =$ _____	50	$4 \times 2 =$ _____
11	$2 \times 8 =$ _____	31	$11 \times 2 =$ _____	51	$6 \times 2 =$ _____
12	$2 \times 7 =$ _____	32	$5 \times 2 =$ _____	52	$1 \times 2 =$ _____
13	$2 \times 6 =$ _____	33	$12 \times 2 =$ _____	53	$8 \times 2 =$ _____
14	$2 \times 10 =$ _____	34	$6 \times 2 =$ _____	54	$12 \times 2 =$ _____
15	$2 \times 10 =$ _____	35	$2 \times 2 =$ _____	55	$6 \times 2 =$ _____
16	$2 \times 8 =$ _____	36	$8 \times 2 =$ _____	56	$7 \times 2 =$ _____
17	$2 \times 4 =$ _____	37	$8 \times 2 =$ _____	57	$4 \times 2 =$ _____
18	$2 \times 8 =$ _____	38	$5 \times 2 =$ _____	58	$4 \times 2 =$ _____
19	$2 \times 5 =$ _____	39	$11 \times 2 =$ _____	59	$11 \times 2 =$ _____
20	$2 \times 3 =$ _____	40	$3 \times 2 =$ _____	60	$2 \times 2 =$ _____

Time taken

:

🕒 3 minute time limit 🕒

Score

60

What's your rock status?

WANNABE

< 18 correct in 3 mins

GARAGE ROCKER

18-19 correct in 3 mins

BUSKER

20-21 correct in 3 mins

GIGGER

22-24 correct in 3 mins

UNSIGNED ACT

25-29 correct in 3 mins

BREAKTHROUGH ARTIST

30-35 correct in 3 mins

SUPPORT ACT

36-44 correct in 3 mins

HEADLINER

45-59 correct in 3 mins

ROCK STAR

All correct in \leq 3mins

ROCK LEGEND

All correct in \leq 2min

ROCK HERO

All correct in \leq 1 min

**TIMES TABLES
ROCK STARS**

Name: _____

Week 4 Session 2

2020-21

2s 5s and 10s

3 a week

Times Tables Rock Stars

2

Times Tables

Licensed to Weston Point Primary School, Runcorn

1	$2 \div 2 =$ _____	21	$22 \div 2 =$ _____	41	$18 \div 2 =$ _____
2	$14 \div 2 =$ _____	22	$12 \div 2 =$ _____	42	$20 \div 2 =$ _____
3	$4 \div 2 =$ _____	23	$10 \div 2 =$ _____	43	$6 \div 2 =$ _____
4	$20 \div 2 =$ _____	24	$22 \div 2 =$ _____	44	$16 \div 2 =$ _____
5	$2 \div 2 =$ _____	25	$20 \div 2 =$ _____	45	$2 \div 2 =$ _____
6	$2 \div 2 =$ _____	26	$8 \div 2 =$ _____	46	$12 \div 2 =$ _____
7	$2 \div 2 =$ _____	27	$6 \div 2 =$ _____	47	$18 \div 2 =$ _____
8	$12 \div 2 =$ _____	28	$2 \div 2 =$ _____	48	$20 \div 2 =$ _____
9	$16 \div 2 =$ _____	29	$2 \div 2 =$ _____	49	$8 \div 2 =$ _____
10	$16 \div 2 =$ _____	30	$24 \div 2 =$ _____	50	$8 \div 2 =$ _____
11	$12 \div 2 =$ _____	31	$16 \div 2 =$ _____	51	$2 \div 2 =$ _____
12	$4 \div 2 =$ _____	32	$6 \div 2 =$ _____	52	$4 \div 2 =$ _____
13	$10 \div 2 =$ _____	33	$20 \div 2 =$ _____	53	$6 \div 2 =$ _____
14	$2 \div 2 =$ _____	34	$24 \div 2 =$ _____	54	$14 \div 2 =$ _____
15	$2 \div 2 =$ _____	35	$16 \div 2 =$ _____	55	$24 \div 2 =$ _____
16	$22 \div 2 =$ _____	36	$20 \div 2 =$ _____	56	$8 \div 2 =$ _____
17	$6 \div 2 =$ _____	37	$12 \div 2 =$ _____	57	$12 \div 2 =$ _____
18	$20 \div 2 =$ _____	38	$20 \div 2 =$ _____	58	$20 \div 2 =$ _____
19	$4 \div 2 =$ _____	39	$4 \div 2 =$ _____	59	$14 \div 2 =$ _____
20	$16 \div 2 =$ _____	40	$10 \div 2 =$ _____	60	$24 \div 2 =$ _____

Time taken

:

🕒 3 minute time limit 🕒

Score

60

What's your rock status?

WANNABE

< 18 correct in 3 mins

GARAGE ROCKER

18-19 correct in 3 mins

BUSKER

20-21 correct in 3 mins

GIGGER

22-24 correct in 3 mins

UNSIGNED ACT

25-29 correct in 3 mins

BREAKTHROUGH ARTIST

30-35 correct in 3 mins

SUPPORT ACT

36-44 correct in 3 mins

HEADLINER

45-59 correct in 3 mins

ROCK STAR

All correct in \leq 3mins

ROCK LEGEND

All correct in \leq 2min

ROCK HERO

All correct in \leq 1 min

**TIMES TABLES
ROCK STARS**

Name: _____

Week 4 Session 3

2020-21

2s 5s and 10s

3 a week

Times Tables Rock Stars

2 Times Tables

Licensed to Weston Point Primary School, Runcorn

1	$2 \times 12 =$ _____	21	$2 \times 7 =$ _____	41	$10 \div 2 =$ _____
2	$2 \times 5 =$ _____	22	$2 \times 2 =$ _____	42	$6 \div 2 =$ _____
3	$2 \times 8 =$ _____	23	$2 \times 12 =$ _____	43	$20 \div 2 =$ _____
4	$2 \times 6 =$ _____	24	$2 \times 12 =$ _____	44	$16 \div 2 =$ _____
5	$2 \times 6 =$ _____	25	$2 \times 1 =$ _____	45	$10 \div 2 =$ _____
6	$2 \times 10 =$ _____	26	$2 \times 1 =$ _____	46	$6 \div 2 =$ _____
7	$2 \times 7 =$ _____	27	$2 \times 12 =$ _____	47	$6 \div 2 =$ _____
8	$2 \times 2 =$ _____	28	$2 \times 8 =$ _____	48	$16 \div 2 =$ _____
9	$2 \times 3 =$ _____	29	$2 \times 1 =$ _____	49	$14 \div 2 =$ _____
10	$2 \times 6 =$ _____	30	$2 \times 7 =$ _____	50	$2 \div 2 =$ _____
11	$2 \times 1 =$ _____	31	$24 \div 2 =$ _____	51	$2 \div 2 =$ _____
12	$2 \times 10 =$ _____	32	$18 \div 2 =$ _____	52	$6 \div 2 =$ _____
13	$2 \times 9 =$ _____	33	$6 \div 2 =$ _____	53	$4 \div 2 =$ _____
14	$2 \times 7 =$ _____	34	$2 \div 2 =$ _____	54	$16 \div 2 =$ _____
15	$2 \times 5 =$ _____	35	$2 \div 2 =$ _____	55	$20 \div 2 =$ _____
16	$2 \times 8 =$ _____	36	$24 \div 2 =$ _____	56	$14 \div 2 =$ _____
17	$2 \times 7 =$ _____	37	$22 \div 2 =$ _____	57	$6 \div 2 =$ _____
18	$2 \times 9 =$ _____	38	$2 \div 2 =$ _____	58	$8 \div 2 =$ _____
19	$2 \times 7 =$ _____	39	$16 \div 2 =$ _____	59	$10 \div 2 =$ _____
20	$2 \times 1 =$ _____	40	$16 \div 2 =$ _____	60	$18 \div 2 =$ _____

Time taken

:

🕒 3 minute time limit 🕒

Score

60

Add up your time

Mins

S1 _____

S2 _____

S3 _____

Total _____

Secs

S1 _____

S2 _____

S3 _____

Total _____

Add up your score

S1 _____

S2 _____

S3 _____

Total _____

Name: _____

Week 5 Session 1

2020-21

2s 5s and 10s

3 a week

Times Tables Rock Stars

2,10 Times Tables

Licensed to Weston Point Primary School, Runcorn

1	$10 \times 9 =$ _____	21	$10 \times 9 =$ _____	41	$4 \times 10 =$ _____
2	$2 \times 12 =$ _____	22	$2 \times 9 =$ _____	42	$8 \times 10 =$ _____
3	$10 \times 12 =$ _____	23	$10 \times 7 =$ _____	43	$12 \times 2 =$ _____
4	$10 \times 5 =$ _____	24	$2 \times 12 =$ _____	44	$2 \times 10 =$ _____
5	$2 \times 6 =$ _____	25	$10 \times 11 =$ _____	45	$7 \times 10 =$ _____
6	$10 \times 12 =$ _____	26	$2 \times 9 =$ _____	46	$8 \times 2 =$ _____
7	$2 \times 6 =$ _____	27	$2 \times 12 =$ _____	47	$9 \times 2 =$ _____
8	$2 \times 1 =$ _____	28	$10 \times 2 =$ _____	48	$7 \times 2 =$ _____
9	$10 \times 4 =$ _____	29	$2 \times 4 =$ _____	49	$3 \times 10 =$ _____
10	$10 \times 5 =$ _____	30	$10 \times 12 =$ _____	50	$8 \times 10 =$ _____
11	$2 \times 1 =$ _____	31	$1 \times 10 =$ _____	51	$2 \times 10 =$ _____
12	$10 \times 4 =$ _____	32	$1 \times 2 =$ _____	52	$11 \times 10 =$ _____
13	$2 \times 3 =$ _____	33	$1 \times 10 =$ _____	53	$1 \times 2 =$ _____
14	$2 \times 2 =$ _____	34	$9 \times 2 =$ _____	54	$8 \times 10 =$ _____
15	$2 \times 8 =$ _____	35	$9 \times 2 =$ _____	55	$5 \times 10 =$ _____
16	$2 \times 6 =$ _____	36	$3 \times 10 =$ _____	56	$9 \times 10 =$ _____
17	$10 \times 7 =$ _____	37	$7 \times 10 =$ _____	57	$4 \times 2 =$ _____
18	$10 \times 8 =$ _____	38	$9 \times 10 =$ _____	58	$2 \times 2 =$ _____
19	$10 \times 7 =$ _____	39	$4 \times 10 =$ _____	59	$12 \times 2 =$ _____
20	$10 \times 7 =$ _____	40	$8 \times 10 =$ _____	60	$3 \times 10 =$ _____

Time taken

:

🕒 3 minute time limit 🕒

Score

60

What's your rock status?

WANNABE

< 18 correct in 3 mins

GARAGE ROCKER

18-19 correct in 3 mins

BUSKER

20-21 correct in 3 mins

GIGGER

22-24 correct in 3 mins

UNSIGNED ACT

25-29 correct in 3 mins

BREAKTHROUGH ARTIST

30-35 correct in 3 mins

SUPPORT ACT

36-44 correct in 3 mins

HEADLINER

45-59 correct in 3 mins

ROCK STAR

All correct in \leq 3mins

ROCK LEGEND

All correct in \leq 2min

ROCK HERO

All correct in \leq 1 min

**TIMES TABLES
ROCK STARS**

Name: _____

Week 5 Session 2

2020-21

2s 5s and 10s

3 a week

Times Tables Rock Stars

2,10 Times Tables

Licensed to Weston Point Primary School, Runcorn

1	$6 \div 2 =$ _____	21	$80 \div 10 =$ _____	41	$50 \div 10 =$ _____
2	$22 \div 2 =$ _____	22	$50 \div 10 =$ _____	42	$60 \div 10 =$ _____
3	$50 \div 10 =$ _____	23	$120 \div 10 =$ _____	43	$24 \div 2 =$ _____
4	$100 \div 10 =$ _____	24	$40 \div 10 =$ _____	44	$30 \div 10 =$ _____
5	$12 \div 2 =$ _____	25	$120 \div 10 =$ _____	45	$6 \div 2 =$ _____
6	$22 \div 2 =$ _____	26	$70 \div 10 =$ _____	46	$22 \div 2 =$ _____
7	$14 \div 2 =$ _____	27	$40 \div 10 =$ _____	47	$4 \div 2 =$ _____
8	$8 \div 2 =$ _____	28	$14 \div 2 =$ _____	48	$50 \div 10 =$ _____
9	$4 \div 2 =$ _____	29	$50 \div 10 =$ _____	49	$16 \div 2 =$ _____
10	$4 \div 2 =$ _____	30	$50 \div 10 =$ _____	50	$20 \div 2 =$ _____
11	$50 \div 10 =$ _____	31	$40 \div 10 =$ _____	51	$70 \div 10 =$ _____
12	$8 \div 2 =$ _____	32	$22 \div 2 =$ _____	52	$40 \div 10 =$ _____
13	$70 \div 10 =$ _____	33	$100 \div 10 =$ _____	53	$10 \div 2 =$ _____
14	$50 \div 10 =$ _____	34	$20 \div 10 =$ _____	54	$24 \div 2 =$ _____
15	$90 \div 10 =$ _____	35	$120 \div 10 =$ _____	55	$40 \div 10 =$ _____
16	$50 \div 10 =$ _____	36	$10 \div 10 =$ _____	56	$70 \div 10 =$ _____
17	$60 \div 10 =$ _____	37	$110 \div 10 =$ _____	57	$20 \div 2 =$ _____
18	$10 \div 10 =$ _____	38	$70 \div 10 =$ _____	58	$24 \div 2 =$ _____
19	$100 \div 10 =$ _____	39	$120 \div 10 =$ _____	59	$16 \div 2 =$ _____
20	$120 \div 10 =$ _____	40	$110 \div 10 =$ _____	60	$120 \div 10 =$ _____

Time taken

:

🕒 3 minute time limit 🕒

Score

60

What's your rock status?

WANNABE

< 18 correct in 3 mins

GARAGE ROCKER

18-19 correct in 3 mins

BUSKER

20-21 correct in 3 mins

GIGGER

22-24 correct in 3 mins

UNSIGNED ACT

25-29 correct in 3 mins

BREAKTHROUGH ARTIST

30-35 correct in 3 mins

SUPPORT ACT

36-44 correct in 3 mins

HEADLINER

45-59 correct in 3 mins

ROCK STAR

All correct in \leq 3mins

ROCK LEGEND

All correct in \leq 2min

ROCK HERO

All correct in \leq 1 min

**TIMES TABLES
ROCK STARS**

Name: _____

Week 5 Session 3

2020-21

2s 5s and 10s

3 a week

Times Tables Rock Stars

2,10 Times Tables

Licensed to Weston Point Primary School, Runcorn

1	$10 \times 10 =$ _____	21	$10 \times 9 =$ _____	41	$4 \div 2 =$ _____
2	$10 \times 5 =$ _____	22	$10 \times 8 =$ _____	42	$120 \div 10 =$ _____
3	$10 \times 2 =$ _____	23	$10 \times 5 =$ _____	43	$70 \div 10 =$ _____
4	$10 \times 2 =$ _____	24	$10 \times 12 =$ _____	44	$10 \div 2 =$ _____
5	$10 \times 4 =$ _____	25	$10 \times 7 =$ _____	45	$100 \div 10 =$ _____
6	$10 \times 5 =$ _____	26	$2 \times 2 =$ _____	46	$70 \div 10 =$ _____
7	$2 \times 5 =$ _____	27	$10 \times 4 =$ _____	47	$110 \div 10 =$ _____
8	$10 \times 2 =$ _____	28	$2 \times 8 =$ _____	48	$80 \div 10 =$ _____
9	$10 \times 3 =$ _____	29	$10 \times 1 =$ _____	49	$50 \div 10 =$ _____
10	$2 \times 10 =$ _____	30	$2 \times 4 =$ _____	50	$120 \div 10 =$ _____
11	$10 \times 5 =$ _____	31	$20 \div 2 =$ _____	51	$120 \div 10 =$ _____
12	$10 \times 7 =$ _____	32	$110 \div 10 =$ _____	52	$22 \div 2 =$ _____
13	$2 \times 2 =$ _____	33	$110 \div 10 =$ _____	53	$40 \div 10 =$ _____
14	$10 \times 6 =$ _____	34	$24 \div 2 =$ _____	54	$8 \div 2 =$ _____
15	$2 \times 4 =$ _____	35	$2 \div 2 =$ _____	55	$14 \div 2 =$ _____
16	$2 \times 3 =$ _____	36	$18 \div 2 =$ _____	56	$16 \div 2 =$ _____
17	$10 \times 9 =$ _____	37	$6 \div 2 =$ _____	57	$4 \div 2 =$ _____
18	$2 \times 2 =$ _____	38	$50 \div 10 =$ _____	58	$60 \div 10 =$ _____
19	$10 \times 8 =$ _____	39	$8 \div 2 =$ _____	59	$6 \div 2 =$ _____
20	$10 \times 12 =$ _____	40	$24 \div 2 =$ _____	60	$16 \div 2 =$ _____

Time taken

:

🕒 3 minute time limit 🕒

Score

60

Add up your time

Mins

S1 _____

S2 _____

S3 _____

Total _____

Secs

S1 _____

S2 _____

S3 _____

Total _____

Add up your score

S1 _____

S2 _____

S3 _____

Total _____

Name: _____

Week 6 Session 1

2020-21

2s 5s and 10s

3 a week

Times Tables Rock Stars

5 Times Tables

Licensed to Weston Point Primary School, Runcorn

1	$5 \times 8 =$ _____	21	$5 \times 10 =$ _____	41	$12 \times 5 =$ _____
2	$5 \times 12 =$ _____	22	$5 \times 6 =$ _____	42	$12 \times 5 =$ _____
3	$5 \times 12 =$ _____	23	$5 \times 2 =$ _____	43	$4 \times 5 =$ _____
4	$5 \times 3 =$ _____	24	$5 \times 7 =$ _____	44	$8 \times 5 =$ _____
5	$5 \times 7 =$ _____	25	$5 \times 5 =$ _____	45	$4 \times 5 =$ _____
6	$5 \times 5 =$ _____	26	$5 \times 9 =$ _____	46	$3 \times 5 =$ _____
7	$5 \times 8 =$ _____	27	$5 \times 10 =$ _____	47	$9 \times 5 =$ _____
8	$5 \times 5 =$ _____	28	$5 \times 2 =$ _____	48	$5 \times 5 =$ _____
9	$5 \times 4 =$ _____	29	$5 \times 6 =$ _____	49	$11 \times 5 =$ _____
10	$5 \times 9 =$ _____	30	$5 \times 6 =$ _____	50	$9 \times 5 =$ _____
11	$5 \times 12 =$ _____	31	$1 \times 5 =$ _____	51	$5 \times 5 =$ _____
12	$5 \times 2 =$ _____	32	$1 \times 5 =$ _____	52	$2 \times 5 =$ _____
13	$5 \times 1 =$ _____	33	$10 \times 5 =$ _____	53	$4 \times 5 =$ _____
14	$5 \times 3 =$ _____	34	$8 \times 5 =$ _____	54	$9 \times 5 =$ _____
15	$5 \times 1 =$ _____	35	$9 \times 5 =$ _____	55	$3 \times 5 =$ _____
16	$5 \times 12 =$ _____	36	$12 \times 5 =$ _____	56	$10 \times 5 =$ _____
17	$5 \times 2 =$ _____	37	$2 \times 5 =$ _____	57	$11 \times 5 =$ _____
18	$5 \times 11 =$ _____	38	$6 \times 5 =$ _____	58	$1 \times 5 =$ _____
19	$5 \times 8 =$ _____	39	$7 \times 5 =$ _____	59	$5 \times 5 =$ _____
20	$5 \times 12 =$ _____	40	$11 \times 5 =$ _____	60	$3 \times 5 =$ _____

Time taken

:

🕒 3 minute time limit 🕒

Score

60

What's your rock status?

WANNABE

< 18 correct in 3 mins

GARAGE ROCKER

18-19 correct in 3 mins

BUSKER

20-21 correct in 3 mins

GIGGER

22-24 correct in 3 mins

UNSIGNED ACT

25-29 correct in 3 mins

BREAKTHROUGH ARTIST

30-35 correct in 3 mins

SUPPORT ACT

36-44 correct in 3 mins

HEADLINER

45-59 correct in 3 mins

ROCK STAR

All correct in \leq 3mins

ROCK LEGEND

All correct in \leq 2min

ROCK HERO

All correct in \leq 1 min

**TIMES TABLES
ROCK STARS**

Name: _____

Week 6 Session 2

2020-21

2s 5s and 10s

3 a week

Times Tables Rock Stars

5 Times Tables

Licensed to Weston Point Primary School, Runcorn

1	$60 \div 5 =$ _____	21	$60 \div 5 =$ _____	41	$5 \div 5 =$ _____
2	$25 \div 5 =$ _____	22	$20 \div 5 =$ _____	42	$20 \div 5 =$ _____
3	$10 \div 5 =$ _____	23	$5 \div 5 =$ _____	43	$35 \div 5 =$ _____
4	$40 \div 5 =$ _____	24	$40 \div 5 =$ _____	44	$25 \div 5 =$ _____
5	$45 \div 5 =$ _____	25	$40 \div 5 =$ _____	45	$55 \div 5 =$ _____
6	$50 \div 5 =$ _____	26	$10 \div 5 =$ _____	46	$15 \div 5 =$ _____
7	$55 \div 5 =$ _____	27	$60 \div 5 =$ _____	47	$5 \div 5 =$ _____
8	$55 \div 5 =$ _____	28	$45 \div 5 =$ _____	48	$60 \div 5 =$ _____
9	$30 \div 5 =$ _____	29	$25 \div 5 =$ _____	49	$40 \div 5 =$ _____
10	$40 \div 5 =$ _____	30	$40 \div 5 =$ _____	50	$50 \div 5 =$ _____
11	$20 \div 5 =$ _____	31	$20 \div 5 =$ _____	51	$5 \div 5 =$ _____
12	$10 \div 5 =$ _____	32	$25 \div 5 =$ _____	52	$35 \div 5 =$ _____
13	$55 \div 5 =$ _____	33	$20 \div 5 =$ _____	53	$50 \div 5 =$ _____
14	$20 \div 5 =$ _____	34	$5 \div 5 =$ _____	54	$25 \div 5 =$ _____
15	$10 \div 5 =$ _____	35	$35 \div 5 =$ _____	55	$55 \div 5 =$ _____
16	$60 \div 5 =$ _____	36	$45 \div 5 =$ _____	56	$10 \div 5 =$ _____
17	$10 \div 5 =$ _____	37	$35 \div 5 =$ _____	57	$25 \div 5 =$ _____
18	$25 \div 5 =$ _____	38	$10 \div 5 =$ _____	58	$15 \div 5 =$ _____
19	$50 \div 5 =$ _____	39	$5 \div 5 =$ _____	59	$30 \div 5 =$ _____
20	$60 \div 5 =$ _____	40	$60 \div 5 =$ _____	60	$50 \div 5 =$ _____

Time taken

:

🕒 3 minute time limit 🕒

Score

60

What's your rock status?

WANNABE

< 18 correct in 3 mins

GARAGE ROCKER

18-19 correct in 3 mins

BUSKER

20-21 correct in 3 mins

GIGGER

22-24 correct in 3 mins

UNSIGNED ACT

25-29 correct in 3 mins

BREAKTHROUGH ARTIST

30-35 correct in 3 mins

SUPPORT ACT

36-44 correct in 3 mins

HEADLINER

45-59 correct in 3 mins

ROCK STAR

All correct in \leq 3mins

ROCK LEGEND

All correct in \leq 2min

ROCK HERO

All correct in \leq 1 min

**TIMES TABLES
ROCK STARS**

Name: _____

Week 6 Session 3

2020-21

2s 5s and 10s

3 a week

Times Tables Rock Stars

5 Times Tables

Licensed to Weston Point Primary School, Runcorn

1	$5 \times 6 =$ _____	21	$5 \times 8 =$ _____	41	$30 \div 5 =$ _____
2	$5 \times 2 =$ _____	22	$5 \times 7 =$ _____	42	$25 \div 5 =$ _____
3	$5 \times 12 =$ _____	23	$5 \times 2 =$ _____	43	$55 \div 5 =$ _____
4	$5 \times 2 =$ _____	24	$5 \times 1 =$ _____	44	$45 \div 5 =$ _____
5	$5 \times 3 =$ _____	25	$5 \times 9 =$ _____	45	$45 \div 5 =$ _____
6	$5 \times 8 =$ _____	26	$5 \times 12 =$ _____	46	$10 \div 5 =$ _____
7	$5 \times 12 =$ _____	27	$5 \times 2 =$ _____	47	$50 \div 5 =$ _____
8	$5 \times 2 =$ _____	28	$5 \times 11 =$ _____	48	$50 \div 5 =$ _____
9	$5 \times 5 =$ _____	29	$5 \times 10 =$ _____	49	$55 \div 5 =$ _____
10	$5 \times 12 =$ _____	30	$5 \times 11 =$ _____	50	$45 \div 5 =$ _____
11	$5 \times 1 =$ _____	31	$10 \div 5 =$ _____	51	$15 \div 5 =$ _____
12	$5 \times 7 =$ _____	32	$30 \div 5 =$ _____	52	$35 \div 5 =$ _____
13	$5 \times 9 =$ _____	33	$5 \div 5 =$ _____	53	$20 \div 5 =$ _____
14	$5 \times 1 =$ _____	34	$15 \div 5 =$ _____	54	$40 \div 5 =$ _____
15	$5 \times 6 =$ _____	35	$60 \div 5 =$ _____	55	$30 \div 5 =$ _____
16	$5 \times 12 =$ _____	36	$55 \div 5 =$ _____	56	$40 \div 5 =$ _____
17	$5 \times 1 =$ _____	37	$55 \div 5 =$ _____	57	$50 \div 5 =$ _____
18	$5 \times 11 =$ _____	38	$60 \div 5 =$ _____	58	$30 \div 5 =$ _____
19	$5 \times 10 =$ _____	39	$5 \div 5 =$ _____	59	$10 \div 5 =$ _____
20	$5 \times 12 =$ _____	40	$60 \div 5 =$ _____	60	$25 \div 5 =$ _____

Time taken

:

🕒 3 minute time limit 🕒

Score

60

Add up your time

Mins
S1 _____
S2 _____
S3 _____
Total _____

Secs

S1 _____
S2 _____
S3 _____
Total _____

Add up your score

S1 _____
S2 _____
S3 _____
Total _____

Name: _____

Week 7 Session 1

2020-21

2s 5s and 10s

3 a week

Times Tables Rock Stars

5 Times Tables

Licensed to Weston Point Primary School, Runcorn

1	$5 \times 7 =$ _____	21	$5 \times 9 =$ _____	41	$1 \times 5 =$ _____
2	$5 \times 10 =$ _____	22	$5 \times 6 =$ _____	42	$8 \times 5 =$ _____
3	$5 \times 3 =$ _____	23	$5 \times 12 =$ _____	43	$11 \times 5 =$ _____
4	$5 \times 2 =$ _____	24	$5 \times 1 =$ _____	44	$6 \times 5 =$ _____
5	$5 \times 5 =$ _____	25	$5 \times 10 =$ _____	45	$4 \times 5 =$ _____
6	$5 \times 7 =$ _____	26	$5 \times 10 =$ _____	46	$2 \times 5 =$ _____
7	$5 \times 7 =$ _____	27	$5 \times 11 =$ _____	47	$9 \times 5 =$ _____
8	$5 \times 12 =$ _____	28	$5 \times 4 =$ _____	48	$1 \times 5 =$ _____
9	$5 \times 11 =$ _____	29	$5 \times 7 =$ _____	49	$6 \times 5 =$ _____
10	$5 \times 8 =$ _____	30	$5 \times 12 =$ _____	50	$7 \times 5 =$ _____
11	$5 \times 7 =$ _____	31	$12 \times 5 =$ _____	51	$11 \times 5 =$ _____
12	$5 \times 6 =$ _____	32	$4 \times 5 =$ _____	52	$4 \times 5 =$ _____
13	$5 \times 5 =$ _____	33	$4 \times 5 =$ _____	53	$11 \times 5 =$ _____
14	$5 \times 7 =$ _____	34	$2 \times 5 =$ _____	54	$4 \times 5 =$ _____
15	$5 \times 5 =$ _____	35	$3 \times 5 =$ _____	55	$6 \times 5 =$ _____
16	$5 \times 8 =$ _____	36	$8 \times 5 =$ _____	56	$9 \times 5 =$ _____
17	$5 \times 7 =$ _____	37	$2 \times 5 =$ _____	57	$9 \times 5 =$ _____
18	$5 \times 12 =$ _____	38	$9 \times 5 =$ _____	58	$5 \times 5 =$ _____
19	$5 \times 2 =$ _____	39	$2 \times 5 =$ _____	59	$10 \times 5 =$ _____
20	$5 \times 5 =$ _____	40	$12 \times 5 =$ _____	60	$11 \times 5 =$ _____

Time taken

:

🕒 3 minute time limit 🕒

Score

60

What's your rock status?

WANNABE

< 18 correct in 3 mins

GARAGE ROCKER

18-19 correct in 3 mins

BUSKER

20-21 correct in 3 mins

GIGGER

22-24 correct in 3 mins

UNSIGNED ACT

25-29 correct in 3 mins

BREAKTHROUGH ARTIST

30-35 correct in 3 mins

SUPPORT ACT

36-44 correct in 3 mins

HEADLINER

45-59 correct in 3 mins

ROCK STAR

All correct in \leq 3mins

ROCK LEGEND

All correct in \leq 2min

ROCK HERO

All correct in \leq 1 min

**TIMES TABLES
ROCK STARS**

Name: _____

Week 7 Session 2

2020-21

2s 5s and 10s

3 a week

Times Tables Rock Stars

5 Times Tables

Licensed to Weston Point Primary School, Runcorn

1	$45 \div 5 =$ _____	21	$50 \div 5 =$ _____	41	$30 \div 5 =$ _____
2	$50 \div 5 =$ _____	22	$25 \div 5 =$ _____	42	$30 \div 5 =$ _____
3	$35 \div 5 =$ _____	23	$60 \div 5 =$ _____	43	$5 \div 5 =$ _____
4	$25 \div 5 =$ _____	24	$55 \div 5 =$ _____	44	$50 \div 5 =$ _____
5	$15 \div 5 =$ _____	25	$30 \div 5 =$ _____	45	$15 \div 5 =$ _____
6	$15 \div 5 =$ _____	26	$20 \div 5 =$ _____	46	$50 \div 5 =$ _____
7	$45 \div 5 =$ _____	27	$30 \div 5 =$ _____	47	$45 \div 5 =$ _____
8	$25 \div 5 =$ _____	28	$5 \div 5 =$ _____	48	$35 \div 5 =$ _____
9	$55 \div 5 =$ _____	29	$60 \div 5 =$ _____	49	$25 \div 5 =$ _____
10	$45 \div 5 =$ _____	30	$10 \div 5 =$ _____	50	$20 \div 5 =$ _____
11	$5 \div 5 =$ _____	31	$45 \div 5 =$ _____	51	$60 \div 5 =$ _____
12	$50 \div 5 =$ _____	32	$45 \div 5 =$ _____	52	$60 \div 5 =$ _____
13	$50 \div 5 =$ _____	33	$15 \div 5 =$ _____	53	$20 \div 5 =$ _____
14	$30 \div 5 =$ _____	34	$55 \div 5 =$ _____	54	$50 \div 5 =$ _____
15	$5 \div 5 =$ _____	35	$30 \div 5 =$ _____	55	$10 \div 5 =$ _____
16	$15 \div 5 =$ _____	36	$55 \div 5 =$ _____	56	$35 \div 5 =$ _____
17	$40 \div 5 =$ _____	37	$25 \div 5 =$ _____	57	$40 \div 5 =$ _____
18	$60 \div 5 =$ _____	38	$60 \div 5 =$ _____	58	$20 \div 5 =$ _____
19	$45 \div 5 =$ _____	39	$20 \div 5 =$ _____	59	$60 \div 5 =$ _____
20	$35 \div 5 =$ _____	40	$25 \div 5 =$ _____	60	$45 \div 5 =$ _____

Time taken

:

🕒 3 minute time limit 🕒

Score

60

What's your rock status?

WANNABE

< 18 correct in 3 mins

GARAGE ROCKER

18-19 correct in 3 mins

BUSKER

20-21 correct in 3 mins

GIGGER

22-24 correct in 3 mins

UNSIGNED ACT

25-29 correct in 3 mins

BREAKTHROUGH ARTIST

30-35 correct in 3 mins

SUPPORT ACT

36-44 correct in 3 mins

HEADLINER

45-59 correct in 3 mins

ROCK STAR

All correct in \leq 3mins

ROCK LEGEND

All correct in \leq 2min

ROCK HERO

All correct in \leq 1 min

**TIMES TABLES
ROCK STARS**

Name: _____

Week 7 Session 3

2020-21

2s 5s and 10s

3 a week

Times Tables Rock Stars

5 Times Tables

Licensed to Weston Point Primary School, Runcorn

1	$5 \times 11 =$ _____	21	$5 \times 4 =$ _____	41	$35 \div 5 =$ _____
2	$5 \times 2 =$ _____	22	$5 \times 12 =$ _____	42	$45 \div 5 =$ _____
3	$5 \times 7 =$ _____	23	$5 \times 5 =$ _____	43	$10 \div 5 =$ _____
4	$5 \times 8 =$ _____	24	$5 \times 3 =$ _____	44	$10 \div 5 =$ _____
5	$5 \times 2 =$ _____	25	$5 \times 9 =$ _____	45	$5 \div 5 =$ _____
6	$5 \times 3 =$ _____	26	$5 \times 3 =$ _____	46	$30 \div 5 =$ _____
7	$5 \times 4 =$ _____	27	$5 \times 6 =$ _____	47	$40 \div 5 =$ _____
8	$5 \times 7 =$ _____	28	$5 \times 10 =$ _____	48	$40 \div 5 =$ _____
9	$5 \times 8 =$ _____	29	$5 \times 12 =$ _____	49	$10 \div 5 =$ _____
10	$5 \times 7 =$ _____	30	$5 \times 2 =$ _____	50	$60 \div 5 =$ _____
11	$5 \times 2 =$ _____	31	$15 \div 5 =$ _____	51	$30 \div 5 =$ _____
12	$5 \times 8 =$ _____	32	$60 \div 5 =$ _____	52	$10 \div 5 =$ _____
13	$5 \times 5 =$ _____	33	$50 \div 5 =$ _____	53	$5 \div 5 =$ _____
14	$5 \times 11 =$ _____	34	$40 \div 5 =$ _____	54	$25 \div 5 =$ _____
15	$5 \times 2 =$ _____	35	$25 \div 5 =$ _____	55	$15 \div 5 =$ _____
16	$5 \times 10 =$ _____	36	$55 \div 5 =$ _____	56	$20 \div 5 =$ _____
17	$5 \times 12 =$ _____	37	$5 \div 5 =$ _____	57	$25 \div 5 =$ _____
18	$5 \times 11 =$ _____	38	$15 \div 5 =$ _____	58	$45 \div 5 =$ _____
19	$5 \times 5 =$ _____	39	$55 \div 5 =$ _____	59	$50 \div 5 =$ _____
20	$5 \times 3 =$ _____	40	$40 \div 5 =$ _____	60	$15 \div 5 =$ _____

Time taken

:

🕒 3 minute time limit 🕒

Score

60

Add up your time

Mins

S1 _____

S2 _____

S3 _____

Total _____

Secs

S1 _____

S2 _____

S3 _____

Total _____

Add up your score

S1 _____

S2 _____

S3 _____

Total _____

Name: _____

Week 8 Session 1

2020-21

2s 5s and 10s

3 a week

Times Tables Rock Stars

10 Times Tables

Licensed to Weston Point Primary School, Runcorn

1	$10 \times 10 =$ _____	21	$10 \times 10 =$ _____	41	$6 \times 10 =$ _____
2	$10 \times 12 =$ _____	22	$10 \times 4 =$ _____	42	$2 \times 10 =$ _____
3	$10 \times 6 =$ _____	23	$10 \times 3 =$ _____	43	$9 \times 10 =$ _____
4	$10 \times 7 =$ _____	24	$10 \times 3 =$ _____	44	$9 \times 10 =$ _____
5	$10 \times 2 =$ _____	25	$10 \times 10 =$ _____	45	$10 \times 10 =$ _____
6	$10 \times 9 =$ _____	26	$10 \times 4 =$ _____	46	$1 \times 10 =$ _____
7	$10 \times 9 =$ _____	27	$10 \times 1 =$ _____	47	$12 \times 10 =$ _____
8	$10 \times 7 =$ _____	28	$10 \times 3 =$ _____	48	$11 \times 10 =$ _____
9	$10 \times 7 =$ _____	29	$10 \times 2 =$ _____	49	$3 \times 10 =$ _____
10	$10 \times 7 =$ _____	30	$10 \times 2 =$ _____	50	$10 \times 10 =$ _____
11	$10 \times 6 =$ _____	31	$11 \times 10 =$ _____	51	$11 \times 10 =$ _____
12	$10 \times 9 =$ _____	32	$7 \times 10 =$ _____	52	$8 \times 10 =$ _____
13	$10 \times 6 =$ _____	33	$3 \times 10 =$ _____	53	$11 \times 10 =$ _____
14	$10 \times 5 =$ _____	34	$11 \times 10 =$ _____	54	$2 \times 10 =$ _____
15	$10 \times 6 =$ _____	35	$1 \times 10 =$ _____	55	$4 \times 10 =$ _____
16	$10 \times 11 =$ _____	36	$8 \times 10 =$ _____	56	$9 \times 10 =$ _____
17	$10 \times 1 =$ _____	37	$4 \times 10 =$ _____	57	$4 \times 10 =$ _____
18	$10 \times 9 =$ _____	38	$1 \times 10 =$ _____	58	$1 \times 10 =$ _____
19	$10 \times 5 =$ _____	39	$11 \times 10 =$ _____	59	$1 \times 10 =$ _____
20	$10 \times 1 =$ _____	40	$10 \times 10 =$ _____	60	$10 \times 10 =$ _____

Time taken

:

🕒 3 minute time limit 🕒

Score

60

What's your rock status?

WANNABE

< 18 correct in 3 mins

GARAGE ROCKER

18-19 correct in 3 mins

BUSKER

20-21 correct in 3 mins

GIGGER

22-24 correct in 3 mins

UNSIGNED ACT

25-29 correct in 3 mins

BREAKTHROUGH ARTIST

30-35 correct in 3 mins

SUPPORT ACT

36-44 correct in 3 mins

HEADLINER

45-59 correct in 3 mins

ROCK STAR

All correct in \leq 3mins

ROCK LEGEND

All correct in \leq 2min

ROCK HERO

All correct in \leq 1 min

**TIMES TABLES
ROCK STARS**

Name: _____

Week 8 Session 2

2020-21

2s 5s and 10s

3 a week

Times Tables Rock Stars

10 Times Tables

Licensed to Weston Point Primary School, Runcorn

1	$90 \div 10 =$ _____	21	$100 \div 10 =$ _____	41	$110 \div 10 =$ _____
2	$20 \div 10 =$ _____	22	$40 \div 10 =$ _____	42	$80 \div 10 =$ _____
3	$110 \div 10 =$ _____	23	$70 \div 10 =$ _____	43	$120 \div 10 =$ _____
4	$90 \div 10 =$ _____	24	$10 \div 10 =$ _____	44	$40 \div 10 =$ _____
5	$90 \div 10 =$ _____	25	$100 \div 10 =$ _____	45	$50 \div 10 =$ _____
6	$80 \div 10 =$ _____	26	$40 \div 10 =$ _____	46	$50 \div 10 =$ _____
7	$20 \div 10 =$ _____	27	$50 \div 10 =$ _____	47	$10 \div 10 =$ _____
8	$100 \div 10 =$ _____	28	$70 \div 10 =$ _____	48	$40 \div 10 =$ _____
9	$10 \div 10 =$ _____	29	$30 \div 10 =$ _____	49	$30 \div 10 =$ _____
10	$70 \div 10 =$ _____	30	$80 \div 10 =$ _____	50	$60 \div 10 =$ _____
11	$60 \div 10 =$ _____	31	$60 \div 10 =$ _____	51	$110 \div 10 =$ _____
12	$10 \div 10 =$ _____	32	$40 \div 10 =$ _____	52	$70 \div 10 =$ _____
13	$80 \div 10 =$ _____	33	$60 \div 10 =$ _____	53	$60 \div 10 =$ _____
14	$80 \div 10 =$ _____	34	$10 \div 10 =$ _____	54	$50 \div 10 =$ _____
15	$90 \div 10 =$ _____	35	$20 \div 10 =$ _____	55	$70 \div 10 =$ _____
16	$50 \div 10 =$ _____	36	$30 \div 10 =$ _____	56	$80 \div 10 =$ _____
17	$10 \div 10 =$ _____	37	$100 \div 10 =$ _____	57	$90 \div 10 =$ _____
18	$40 \div 10 =$ _____	38	$100 \div 10 =$ _____	58	$20 \div 10 =$ _____
19	$60 \div 10 =$ _____	39	$20 \div 10 =$ _____	59	$90 \div 10 =$ _____
20	$70 \div 10 =$ _____	40	$10 \div 10 =$ _____	60	$40 \div 10 =$ _____

Time taken

:

🕒 3 minute time limit 🕒

Score

60

What's your rock status?

WANNABE

< 18 correct in 3 mins

GARAGE ROCKER

18-19 correct in 3 mins

BUSKER

20-21 correct in 3 mins

GIGGER

22-24 correct in 3 mins

UNSIGNED ACT

25-29 correct in 3 mins

BREAKTHROUGH ARTIST

30-35 correct in 3 mins

SUPPORT ACT

36-44 correct in 3 mins

HEADLINER

45-59 correct in 3 mins

ROCK STAR

All correct in \leq 3mins

ROCK LEGEND

All correct in \leq 2min

ROCK HERO

All correct in \leq 1 min

**TIMES TABLES
ROCK STARS**

Name: _____

Week 8 Session 3

2020-21

2s 5s and 10s

3 a week

Times Tables Rock Stars

10 Times Tables

Licensed to Weston Point Primary School, Runcorn

1	$10 \times 5 =$ _____	21	$10 \times 1 =$ _____	41	$120 \div 10 =$ _____
2	$10 \times 10 =$ _____	22	$10 \times 5 =$ _____	42	$60 \div 10 =$ _____
3	$10 \times 5 =$ _____	23	$10 \times 2 =$ _____	43	$70 \div 10 =$ _____
4	$10 \times 2 =$ _____	24	$10 \times 4 =$ _____	44	$90 \div 10 =$ _____
5	$10 \times 11 =$ _____	25	$10 \times 8 =$ _____	45	$40 \div 10 =$ _____
6	$10 \times 10 =$ _____	26	$10 \times 10 =$ _____	46	$70 \div 10 =$ _____
7	$10 \times 7 =$ _____	27	$10 \times 8 =$ _____	47	$30 \div 10 =$ _____
8	$10 \times 9 =$ _____	28	$10 \times 10 =$ _____	48	$70 \div 10 =$ _____
9	$10 \times 1 =$ _____	29	$10 \times 12 =$ _____	49	$50 \div 10 =$ _____
10	$10 \times 8 =$ _____	30	$10 \times 3 =$ _____	50	$30 \div 10 =$ _____
11	$10 \times 9 =$ _____	31	$10 \div 10 =$ _____	51	$100 \div 10 =$ _____
12	$10 \times 6 =$ _____	32	$100 \div 10 =$ _____	52	$50 \div 10 =$ _____
13	$10 \times 10 =$ _____	33	$10 \div 10 =$ _____	53	$20 \div 10 =$ _____
14	$10 \times 4 =$ _____	34	$40 \div 10 =$ _____	54	$70 \div 10 =$ _____
15	$10 \times 11 =$ _____	35	$50 \div 10 =$ _____	55	$110 \div 10 =$ _____
16	$10 \times 9 =$ _____	36	$80 \div 10 =$ _____	56	$80 \div 10 =$ _____
17	$10 \times 8 =$ _____	37	$80 \div 10 =$ _____	57	$30 \div 10 =$ _____
18	$10 \times 2 =$ _____	38	$100 \div 10 =$ _____	58	$10 \div 10 =$ _____
19	$10 \times 2 =$ _____	39	$100 \div 10 =$ _____	59	$50 \div 10 =$ _____
20	$10 \times 9 =$ _____	40	$70 \div 10 =$ _____	60	$10 \div 10 =$ _____

Time taken

:

🕒 3 minute time limit 🕒

Score

60

Add up your time

Mins

S1 _____

S2 _____

S3 _____

Total _____

Secs

S1 _____

S2 _____

S3 _____

Total _____

Add up your score

S1 _____

S2 _____

S3 _____

Total _____

Name: _____

Week 9 Session 1

2020-21

2s 5s and 10s

3 a week

Times Tables Rock Stars

2,5,10 Times Tables

Licensed to Weston Point Primary School, Runcorn

1	$2 \times 5 =$ _____	21	$2 \times 5 =$ _____	41	$4 \times 2 =$ _____
2	$2 \times 1 =$ _____	22	$2 \times 3 =$ _____	42	$3 \times 5 =$ _____
3	$10 \times 7 =$ _____	23	$10 \times 4 =$ _____	43	$3 \times 10 =$ _____
4	$2 \times 1 =$ _____	24	$2 \times 10 =$ _____	44	$7 \times 5 =$ _____
5	$2 \times 2 =$ _____	25	$10 \times 8 =$ _____	45	$8 \times 5 =$ _____
6	$2 \times 3 =$ _____	26	$5 \times 3 =$ _____	46	$8 \times 5 =$ _____
7	$10 \times 2 =$ _____	27	$10 \times 11 =$ _____	47	$1 \times 10 =$ _____
8	$10 \times 11 =$ _____	28	$2 \times 1 =$ _____	48	$7 \times 10 =$ _____
9	$2 \times 8 =$ _____	29	$5 \times 7 =$ _____	49	$12 \times 10 =$ _____
10	$2 \times 7 =$ _____	30	$10 \times 8 =$ _____	50	$3 \times 5 =$ _____
11	$10 \times 9 =$ _____	31	$8 \times 2 =$ _____	51	$1 \times 10 =$ _____
12	$2 \times 7 =$ _____	32	$6 \times 2 =$ _____	52	$6 \times 2 =$ _____
13	$5 \times 2 =$ _____	33	$3 \times 2 =$ _____	53	$8 \times 10 =$ _____
14	$5 \times 1 =$ _____	34	$5 \times 10 =$ _____	54	$12 \times 2 =$ _____
15	$2 \times 1 =$ _____	35	$9 \times 2 =$ _____	55	$7 \times 2 =$ _____
16	$10 \times 6 =$ _____	36	$1 \times 2 =$ _____	56	$9 \times 2 =$ _____
17	$2 \times 7 =$ _____	37	$2 \times 2 =$ _____	57	$3 \times 5 =$ _____
18	$10 \times 2 =$ _____	38	$1 \times 10 =$ _____	58	$6 \times 10 =$ _____
19	$2 \times 1 =$ _____	39	$5 \times 10 =$ _____	59	$7 \times 5 =$ _____
20	$10 \times 12 =$ _____	40	$6 \times 2 =$ _____	60	$5 \times 10 =$ _____

Time taken

:

🕒 3 minute time limit 🕒

Score

60

What's your rock status?

WANNABE

< 18 correct in 3 mins

GARAGE ROCKER

18-19 correct in 3 mins

BUSKER

20-21 correct in 3 mins

GIGGER

22-24 correct in 3 mins

UNSIGNED ACT

25-29 correct in 3 mins

BREAKTHROUGH ARTIST

30-35 correct in 3 mins

SUPPORT ACT

36-44 correct in 3 mins

HEADLINER

45-59 correct in 3 mins

ROCK STAR

All correct in \leq 3mins

ROCK LEGEND

All correct in \leq 2min

ROCK HERO

All correct in \leq 1 min

**TIMES TABLES
ROCK STARS**

Name: _____

Week 9 Session 2

2020-21

2s 5s and 10s

3 a week

Times Tables Rock Stars

2,5,10 Times Tables

Licensed to Weston Point Primary School, Runcorn

1	$70 \div 10 =$ _____	21	$2 \div 2 =$ _____	41	$110 \div 10 =$ _____
2	$8 \div 2 =$ _____	22	$50 \div 5 =$ _____	42	$50 \div 5 =$ _____
3	$30 \div 5 =$ _____	23	$22 \div 2 =$ _____	43	$90 \div 10 =$ _____
4	$15 \div 5 =$ _____	24	$25 \div 5 =$ _____	44	$10 \div 5 =$ _____
5	$20 \div 2 =$ _____	25	$50 \div 10 =$ _____	45	$4 \div 2 =$ _____
6	$40 \div 10 =$ _____	26	$35 \div 5 =$ _____	46	$110 \div 10 =$ _____
7	$55 \div 5 =$ _____	27	$40 \div 5 =$ _____	47	$110 \div 10 =$ _____
8	$50 \div 10 =$ _____	28	$8 \div 2 =$ _____	48	$90 \div 10 =$ _____
9	$10 \div 5 =$ _____	29	$50 \div 5 =$ _____	49	$24 \div 2 =$ _____
10	$20 \div 10 =$ _____	30	$12 \div 2 =$ _____	50	$80 \div 10 =$ _____
11	$55 \div 5 =$ _____	31	$90 \div 10 =$ _____	51	$30 \div 10 =$ _____
12	$2 \div 2 =$ _____	32	$50 \div 5 =$ _____	52	$35 \div 5 =$ _____
13	$40 \div 5 =$ _____	33	$20 \div 2 =$ _____	53	$30 \div 5 =$ _____
14	$2 \div 2 =$ _____	34	$60 \div 10 =$ _____	54	$20 \div 5 =$ _____
15	$80 \div 10 =$ _____	35	$8 \div 2 =$ _____	55	$4 \div 2 =$ _____
16	$40 \div 10 =$ _____	36	$14 \div 2 =$ _____	56	$8 \div 2 =$ _____
17	$10 \div 10 =$ _____	37	$20 \div 5 =$ _____	57	$20 \div 5 =$ _____
18	$90 \div 10 =$ _____	38	$2 \div 2 =$ _____	58	$2 \div 2 =$ _____
19	$100 \div 10 =$ _____	39	$16 \div 2 =$ _____	59	$10 \div 2 =$ _____
20	$50 \div 5 =$ _____	40	$45 \div 5 =$ _____	60	$30 \div 5 =$ _____

Time taken

:

🕒 3 minute time limit 🕒

Score

60

What's your rock status?

WANNABE

< 18 correct in 3 mins

GARAGE ROCKER

18-19 correct in 3 mins

BUSKER

20-21 correct in 3 mins

GIGGER

22-24 correct in 3 mins

UNSIGNED ACT

25-29 correct in 3 mins

BREAKTHROUGH ARTIST

30-35 correct in 3 mins

SUPPORT ACT

36-44 correct in 3 mins

HEADLINER

45-59 correct in 3 mins

ROCK STAR

All correct in \leq 3mins

ROCK LEGEND

All correct in \leq 2min

ROCK HERO

All correct in \leq 1 min

**TIMES TABLES
ROCK STARS**

Name: _____

Week 9 Session 3

2020-21

2s 5s and 10s

3 a week

Times Tables Rock Stars

2,5,10 Times Tables

Licensed to Weston Point Primary School, Runcorn

1	$10 \times 12 =$ _____	21	$2 \times 8 =$ _____	41	$70 \div 10 =$ _____
2	$5 \times 12 =$ _____	22	$5 \times 9 =$ _____	42	$18 \div 2 =$ _____
3	$5 \times 4 =$ _____	23	$10 \times 1 =$ _____	43	$45 \div 5 =$ _____
4	$5 \times 3 =$ _____	24	$5 \times 7 =$ _____	44	$70 \div 10 =$ _____
5	$10 \times 6 =$ _____	25	$10 \times 5 =$ _____	45	$50 \div 5 =$ _____
6	$10 \times 11 =$ _____	26	$5 \times 1 =$ _____	46	$25 \div 5 =$ _____
7	$10 \times 9 =$ _____	27	$10 \times 6 =$ _____	47	$70 \div 10 =$ _____
8	$2 \times 5 =$ _____	28	$2 \times 10 =$ _____	48	$70 \div 10 =$ _____
9	$10 \times 5 =$ _____	29	$10 \times 11 =$ _____	49	$30 \div 10 =$ _____
10	$2 \times 11 =$ _____	30	$5 \times 8 =$ _____	50	$50 \div 10 =$ _____
11	$2 \times 8 =$ _____	31	$14 \div 2 =$ _____	51	$10 \div 10 =$ _____
12	$10 \times 12 =$ _____	32	$90 \div 10 =$ _____	52	$8 \div 2 =$ _____
13	$2 \times 1 =$ _____	33	$120 \div 10 =$ _____	53	$20 \div 5 =$ _____
14	$10 \times 5 =$ _____	34	$40 \div 10 =$ _____	54	$4 \div 2 =$ _____
15	$10 \times 11 =$ _____	35	$55 \div 5 =$ _____	55	$30 \div 5 =$ _____
16	$10 \times 4 =$ _____	36	$10 \div 2 =$ _____	56	$50 \div 5 =$ _____
17	$2 \times 9 =$ _____	37	$70 \div 10 =$ _____	57	$16 \div 2 =$ _____
18	$2 \times 8 =$ _____	38	$20 \div 10 =$ _____	58	$60 \div 5 =$ _____
19	$5 \times 2 =$ _____	39	$20 \div 10 =$ _____	59	$35 \div 5 =$ _____
20	$10 \times 4 =$ _____	40	$15 \div 5 =$ _____	60	$100 \div 10 =$ _____

Time taken

:

🕒 3 minute time limit 🕒

Score

60

Add up your time

Mins

S1 _____

S2 _____

S3 _____

Total _____

Secs

S1 _____

S2 _____

S3 _____

Total _____

Add up your score

S1 _____

S2 _____

S3 _____

Total _____

Name: _____

Week 10 Session 1

2020-21

2s 5s and 10s

3 a week

Times Tables Rock Stars

2,5,10 Times Tables

Licensed to Weston Point Primary School, Runcorn

1	$10 \times 11 =$ _____	21	$5 \times 8 =$ _____	41	$3 \times 5 =$ _____
2	$10 \times 6 =$ _____	22	$10 \times 8 =$ _____	42	$3 \times 5 =$ _____
3	$2 \times 4 =$ _____	23	$5 \times 1 =$ _____	43	$3 \times 2 =$ _____
4	$10 \times 11 =$ _____	24	$5 \times 1 =$ _____	44	$10 \times 5 =$ _____
5	$5 \times 4 =$ _____	25	$5 \times 3 =$ _____	45	$2 \times 10 =$ _____
6	$5 \times 3 =$ _____	26	$5 \times 5 =$ _____	46	$1 \times 10 =$ _____
7	$10 \times 11 =$ _____	27	$10 \times 5 =$ _____	47	$5 \times 10 =$ _____
8	$2 \times 6 =$ _____	28	$2 \times 4 =$ _____	48	$7 \times 10 =$ _____
9	$10 \times 9 =$ _____	29	$5 \times 3 =$ _____	49	$6 \times 5 =$ _____
10	$5 \times 3 =$ _____	30	$5 \times 3 =$ _____	50	$5 \times 5 =$ _____
11	$2 \times 10 =$ _____	31	$9 \times 10 =$ _____	51	$10 \times 10 =$ _____
12	$2 \times 3 =$ _____	32	$9 \times 10 =$ _____	52	$6 \times 10 =$ _____
13	$2 \times 6 =$ _____	33	$1 \times 5 =$ _____	53	$3 \times 5 =$ _____
14	$10 \times 6 =$ _____	34	$2 \times 5 =$ _____	54	$12 \times 2 =$ _____
15	$2 \times 10 =$ _____	35	$2 \times 2 =$ _____	55	$3 \times 5 =$ _____
16	$5 \times 7 =$ _____	36	$4 \times 2 =$ _____	56	$12 \times 5 =$ _____
17	$5 \times 10 =$ _____	37	$5 \times 5 =$ _____	57	$8 \times 5 =$ _____
18	$2 \times 6 =$ _____	38	$3 \times 5 =$ _____	58	$11 \times 5 =$ _____
19	$10 \times 7 =$ _____	39	$1 \times 2 =$ _____	59	$6 \times 2 =$ _____
20	$10 \times 4 =$ _____	40	$2 \times 10 =$ _____	60	$6 \times 5 =$ _____

Time taken

:

🕒 3 minute time limit 🕒

Score

60

What's your rock status?

WANNABE

< 18 correct in 3 mins

GARAGE ROCKER

18-19 correct in 3 mins

BUSKER

20-21 correct in 3 mins

GIGGER

22-24 correct in 3 mins

UNSIGNED ACT

25-29 correct in 3 mins

BREAKTHROUGH ARTIST

30-35 correct in 3 mins

SUPPORT ACT

36-44 correct in 3 mins

HEADLINER

45-59 correct in 3 mins

ROCK STAR

All correct in \leq 3mins

ROCK LEGEND

All correct in \leq 2min

ROCK HERO

All correct in \leq 1 min

**TIMES TABLES
ROCK STARS**

Name: _____

Week 10 Session 2

2020-21

2s 5s and 10s

3 a week

Times Tables Rock Stars

2,5,10 Times Tables

Licensed to Weston Point Primary School, Runcorn

1	$80 \div 10 =$ _____	21	$10 \div 10 =$ _____	41	$30 \div 5 =$ _____
2	$10 \div 2 =$ _____	22	$8 \div 2 =$ _____	42	$10 \div 2 =$ _____
3	$90 \div 10 =$ _____	23	$30 \div 5 =$ _____	43	$25 \div 5 =$ _____
4	$50 \div 5 =$ _____	24	$16 \div 2 =$ _____	44	$14 \div 2 =$ _____
5	$10 \div 10 =$ _____	25	$60 \div 10 =$ _____	45	$15 \div 5 =$ _____
6	$12 \div 2 =$ _____	26	$2 \div 2 =$ _____	46	$50 \div 10 =$ _____
7	$10 \div 2 =$ _____	27	$20 \div 5 =$ _____	47	$4 \div 2 =$ _____
8	$70 \div 10 =$ _____	28	$50 \div 5 =$ _____	48	$50 \div 5 =$ _____
9	$40 \div 10 =$ _____	29	$14 \div 2 =$ _____	49	$35 \div 5 =$ _____
10	$8 \div 2 =$ _____	30	$25 \div 5 =$ _____	50	$22 \div 2 =$ _____
11	$55 \div 5 =$ _____	31	$14 \div 2 =$ _____	51	$24 \div 2 =$ _____
12	$20 \div 2 =$ _____	32	$10 \div 5 =$ _____	52	$120 \div 10 =$ _____
13	$120 \div 10 =$ _____	33	$60 \div 10 =$ _____	53	$40 \div 10 =$ _____
14	$30 \div 5 =$ _____	34	$30 \div 10 =$ _____	54	$110 \div 10 =$ _____
15	$100 \div 10 =$ _____	35	$40 \div 5 =$ _____	55	$12 \div 2 =$ _____
16	$120 \div 10 =$ _____	36	$120 \div 10 =$ _____	56	$90 \div 10 =$ _____
17	$55 \div 5 =$ _____	37	$25 \div 5 =$ _____	57	$45 \div 5 =$ _____
18	$40 \div 5 =$ _____	38	$20 \div 2 =$ _____	58	$55 \div 5 =$ _____
19	$22 \div 2 =$ _____	39	$6 \div 2 =$ _____	59	$60 \div 10 =$ _____
20	$55 \div 5 =$ _____	40	$10 \div 10 =$ _____	60	$20 \div 10 =$ _____

Time taken

:

🕒 3 minute time limit 🕒

Score

60

What's your rock status?

WANNABE

< 18 correct in 3 mins

GARAGE ROCKER

18-19 correct in 3 mins

BUSKER

20-21 correct in 3 mins

GIGGER

22-24 correct in 3 mins

UNSIGNED ACT

25-29 correct in 3 mins

BREAKTHROUGH ARTIST

30-35 correct in 3 mins

SUPPORT ACT

36-44 correct in 3 mins

HEADLINER

45-59 correct in 3 mins

ROCK STAR

All correct in \leq 3mins

ROCK LEGEND

All correct in \leq 2min

ROCK HERO

All correct in \leq 1 min

**TIMES TABLES
ROCK STARS**

Name: _____

Week 10 Session 3

2020-21

2s 5s and 10s

3 a week

Times Tables Rock Stars

2,5,10 Times Tables

Licensed to Weston Point Primary School, Runcorn

1	$5 \times 11 =$ _____	21	$5 \times 9 =$ _____	41	$12 \div 2 =$ _____
2	$5 \times 9 =$ _____	22	$10 \times 3 =$ _____	42	$14 \div 2 =$ _____
3	$10 \times 12 =$ _____	23	$10 \times 5 =$ _____	43	$4 \div 2 =$ _____
4	$2 \times 12 =$ _____	24	$5 \times 1 =$ _____	44	$60 \div 10 =$ _____
5	$2 \times 3 =$ _____	25	$10 \times 6 =$ _____	45	$60 \div 10 =$ _____
6	$10 \times 9 =$ _____	26	$5 \times 4 =$ _____	46	$22 \div 2 =$ _____
7	$10 \times 10 =$ _____	27	$2 \times 9 =$ _____	47	$25 \div 5 =$ _____
8	$2 \times 12 =$ _____	28	$2 \times 12 =$ _____	48	$6 \div 2 =$ _____
9	$5 \times 6 =$ _____	29	$2 \times 11 =$ _____	49	$4 \div 2 =$ _____
10	$2 \times 9 =$ _____	30	$2 \times 12 =$ _____	50	$20 \div 10 =$ _____
11	$2 \times 2 =$ _____	31	$120 \div 10 =$ _____	51	$4 \div 2 =$ _____
12	$5 \times 4 =$ _____	32	$4 \div 2 =$ _____	52	$120 \div 10 =$ _____
13	$10 \times 10 =$ _____	33	$14 \div 2 =$ _____	53	$20 \div 10 =$ _____
14	$2 \times 9 =$ _____	34	$30 \div 10 =$ _____	54	$6 \div 2 =$ _____
15	$10 \times 9 =$ _____	35	$45 \div 5 =$ _____	55	$30 \div 5 =$ _____
16	$5 \times 4 =$ _____	36	$10 \div 2 =$ _____	56	$90 \div 10 =$ _____
17	$2 \times 10 =$ _____	37	$5 \div 5 =$ _____	57	$22 \div 2 =$ _____
18	$2 \times 2 =$ _____	38	$10 \div 5 =$ _____	58	$120 \div 10 =$ _____
19	$2 \times 3 =$ _____	39	$50 \div 5 =$ _____	59	$12 \div 2 =$ _____
20	$5 \times 10 =$ _____	40	$110 \div 10 =$ _____	60	$25 \div 5 =$ _____

Time taken

:

 3 minute time limit 

Score

60

Add up your time

Mins

S1 _____

S2 _____

S3 _____

Total _____

Secs

S1 _____

S2 _____

S3 _____

Total _____

Add up your score

S1 _____

S2 _____

S3 _____

Total _____

Name: _____

Week 11 Session 1

2020-21

2s 5s and 10s

3 a week

Times Tables Rock Stars

2,5,10 Times Tables

Licensed to Weston Point Primary School, Runcorn

1	$5 \times 5 =$ _____	21	$10 \times 9 =$ _____	41	$9 \times 2 =$ _____
2	$2 \times 4 =$ _____	22	$5 \times 9 =$ _____	42	$9 \times 5 =$ _____
3	$10 \times 10 =$ _____	23	$2 \times 12 =$ _____	43	$11 \times 2 =$ _____
4	$2 \times 1 =$ _____	24	$5 \times 3 =$ _____	44	$7 \times 10 =$ _____
5	$2 \times 6 =$ _____	25	$5 \times 12 =$ _____	45	$7 \times 2 =$ _____
6	$10 \times 5 =$ _____	26	$5 \times 7 =$ _____	46	$5 \times 2 =$ _____
7	$2 \times 9 =$ _____	27	$2 \times 4 =$ _____	47	$3 \times 2 =$ _____
8	$2 \times 6 =$ _____	28	$5 \times 8 =$ _____	48	$1 \times 5 =$ _____
9	$5 \times 2 =$ _____	29	$10 \times 12 =$ _____	49	$10 \times 10 =$ _____
10	$10 \times 1 =$ _____	30	$5 \times 12 =$ _____	50	$2 \times 2 =$ _____
11	$10 \times 4 =$ _____	31	$6 \times 2 =$ _____	51	$8 \times 2 =$ _____
12	$5 \times 7 =$ _____	32	$8 \times 5 =$ _____	52	$7 \times 5 =$ _____
13	$5 \times 8 =$ _____	33	$1 \times 2 =$ _____	53	$12 \times 10 =$ _____
14	$5 \times 2 =$ _____	34	$4 \times 5 =$ _____	54	$12 \times 5 =$ _____
15	$5 \times 9 =$ _____	35	$10 \times 5 =$ _____	55	$11 \times 2 =$ _____
16	$5 \times 12 =$ _____	36	$6 \times 5 =$ _____	56	$8 \times 5 =$ _____
17	$5 \times 10 =$ _____	37	$8 \times 10 =$ _____	57	$1 \times 2 =$ _____
18	$10 \times 5 =$ _____	38	$2 \times 2 =$ _____	58	$7 \times 5 =$ _____
19	$2 \times 3 =$ _____	39	$3 \times 10 =$ _____	59	$12 \times 2 =$ _____
20	$2 \times 10 =$ _____	40	$8 \times 5 =$ _____	60	$10 \times 10 =$ _____

Time taken

:

🕒 3 minute time limit 🕒

Score

60

What's your rock status?

WANNABE

< 18 correct in 3 mins

GARAGE ROCKER

18-19 correct in 3 mins

BUSKER

20-21 correct in 3 mins

GIGGER

22-24 correct in 3 mins

UNSIGNED ACT

25-29 correct in 3 mins

BREAKTHROUGH ARTIST

30-35 correct in 3 mins

SUPPORT ACT

36-44 correct in 3 mins

HEADLINER

45-59 correct in 3 mins

ROCK STAR

All correct in \leq 3mins

ROCK LEGEND

All correct in \leq 2min

ROCK HERO

All correct in \leq 1 min

**TIMES TABLES
ROCK STARS**

Name: _____

Week 11 Session 2

2020-21

2s 5s and 10s

3 a week

Times Tables Rock Stars

2,5,10 Times Tables

Licensed to Weston Point Primary School, Runcorn

1	$22 \div 2 =$ _____	21	$30 \div 5 =$ _____	41	$4 \div 2 =$ _____
2	$14 \div 2 =$ _____	22	$20 \div 10 =$ _____	42	$10 \div 5 =$ _____
3	$30 \div 10 =$ _____	23	$30 \div 10 =$ _____	43	$40 \div 5 =$ _____
4	$22 \div 2 =$ _____	24	$60 \div 5 =$ _____	44	$45 \div 5 =$ _____
5	$30 \div 5 =$ _____	25	$14 \div 2 =$ _____	45	$15 \div 5 =$ _____
6	$45 \div 5 =$ _____	26	$10 \div 2 =$ _____	46	$45 \div 5 =$ _____
7	$20 \div 10 =$ _____	27	$2 \div 2 =$ _____	47	$80 \div 10 =$ _____
8	$16 \div 2 =$ _____	28	$55 \div 5 =$ _____	48	$6 \div 2 =$ _____
9	$60 \div 10 =$ _____	29	$5 \div 5 =$ _____	49	$6 \div 2 =$ _____
10	$10 \div 10 =$ _____	30	$55 \div 5 =$ _____	50	$10 \div 2 =$ _____
11	$60 \div 10 =$ _____	31	$8 \div 2 =$ _____	51	$90 \div 10 =$ _____
12	$14 \div 2 =$ _____	32	$110 \div 10 =$ _____	52	$10 \div 10 =$ _____
13	$10 \div 10 =$ _____	33	$10 \div 10 =$ _____	53	$100 \div 10 =$ _____
14	$70 \div 10 =$ _____	34	$40 \div 5 =$ _____	54	$55 \div 5 =$ _____
15	$100 \div 10 =$ _____	35	$4 \div 2 =$ _____	55	$20 \div 5 =$ _____
16	$100 \div 10 =$ _____	36	$20 \div 10 =$ _____	56	$10 \div 10 =$ _____
17	$50 \div 10 =$ _____	37	$35 \div 5 =$ _____	57	$20 \div 10 =$ _____
18	$20 \div 10 =$ _____	38	$90 \div 10 =$ _____	58	$24 \div 2 =$ _____
19	$110 \div 10 =$ _____	39	$60 \div 10 =$ _____	59	$50 \div 5 =$ _____
20	$5 \div 5 =$ _____	40	$12 \div 2 =$ _____	60	$35 \div 5 =$ _____

Time taken

:

 3 minute time limit 

Score

60

What's your rock status?

WANNABE

< 18 correct in 3 mins

GARAGE ROCKER

18-19 correct in 3 mins

BUSKER

20-21 correct in 3 mins

GIGGER

22-24 correct in 3 mins

UNSIGNED ACT

25-29 correct in 3 mins

BREAKTHROUGH ARTIST

30-35 correct in 3 mins

SUPPORT ACT

36-44 correct in 3 mins

HEADLINER

45-59 correct in 3 mins

ROCK STAR

All correct in \leq 3mins

ROCK LEGEND

All correct in \leq 2min

ROCK HERO

All correct in \leq 1 min

**TIMES TABLES
ROCK STARS**

Name: _____

Week 11 Session 3

2020-21

2s 5s and 10s

3 a week

Times Tables Rock Stars

2,5,10 Times Tables

Licensed to Weston Point Primary School, Runcorn

1	$2 \times 6 =$ _____	21	$5 \times 4 =$ _____	41	$5 \div 5 =$ _____
2	$10 \times 7 =$ _____	22	$10 \times 10 =$ _____	42	$110 \div 10 =$ _____
3	$2 \times 2 =$ _____	23	$5 \times 2 =$ _____	43	$40 \div 5 =$ _____
4	$5 \times 5 =$ _____	24	$5 \times 2 =$ _____	44	$22 \div 2 =$ _____
5	$2 \times 4 =$ _____	25	$10 \times 7 =$ _____	45	$120 \div 10 =$ _____
6	$5 \times 6 =$ _____	26	$2 \times 9 =$ _____	46	$16 \div 2 =$ _____
7	$2 \times 5 =$ _____	27	$5 \times 11 =$ _____	47	$60 \div 5 =$ _____
8	$2 \times 8 =$ _____	28	$2 \times 4 =$ _____	48	$6 \div 2 =$ _____
9	$5 \times 4 =$ _____	29	$2 \times 7 =$ _____	49	$50 \div 5 =$ _____
10	$10 \times 5 =$ _____	30	$2 \times 4 =$ _____	50	$30 \div 5 =$ _____
11	$5 \times 2 =$ _____	31	$20 \div 2 =$ _____	51	$12 \div 2 =$ _____
12	$5 \times 7 =$ _____	32	$40 \div 5 =$ _____	52	$4 \div 2 =$ _____
13	$2 \times 7 =$ _____	33	$40 \div 5 =$ _____	53	$70 \div 10 =$ _____
14	$2 \times 5 =$ _____	34	$5 \div 5 =$ _____	54	$30 \div 5 =$ _____
15	$10 \times 12 =$ _____	35	$60 \div 10 =$ _____	55	$16 \div 2 =$ _____
16	$2 \times 7 =$ _____	36	$18 \div 2 =$ _____	56	$90 \div 10 =$ _____
17	$5 \times 2 =$ _____	37	$22 \div 2 =$ _____	57	$45 \div 5 =$ _____
18	$5 \times 11 =$ _____	38	$50 \div 10 =$ _____	58	$35 \div 5 =$ _____
19	$2 \times 5 =$ _____	39	$40 \div 10 =$ _____	59	$10 \div 10 =$ _____
20	$2 \times 6 =$ _____	40	$25 \div 5 =$ _____	60	$8 \div 2 =$ _____

Time taken

:

🕒 3 minute time limit 🕒

Score

60

Add up your time

Mins
S1 _____
S2 _____
S3 _____
Total _____

Secs
S1 _____
S2 _____
S3 _____
Total _____

Add up your score
S1 _____
S2 _____
S3 _____
Total _____

Name: _____

Week 12 Session 1

2020-21

2s 5s and 10s

3 a week

Times Tables Rock Stars

2 Times Tables

Licensed to Weston Point Primary School, Runcorn

1	$2 \times 9 =$ _____	21	$2 \times 7 =$ _____	41	$2 \times 2 =$ _____
2	$2 \times 4 =$ _____	22	$2 \times 5 =$ _____	42	$10 \times 2 =$ _____
3	$2 \times 1 =$ _____	23	$2 \times 5 =$ _____	43	$8 \times 2 =$ _____
4	$2 \times 4 =$ _____	24	$2 \times 12 =$ _____	44	$12 \times 2 =$ _____
5	$2 \times 8 =$ _____	25	$2 \times 2 =$ _____	45	$5 \times 2 =$ _____
6	$2 \times 12 =$ _____	26	$2 \times 7 =$ _____	46	$3 \times 2 =$ _____
7	$2 \times 3 =$ _____	27	$2 \times 2 =$ _____	47	$6 \times 2 =$ _____
8	$2 \times 2 =$ _____	28	$2 \times 12 =$ _____	48	$2 \times 2 =$ _____
9	$2 \times 10 =$ _____	29	$2 \times 1 =$ _____	49	$7 \times 2 =$ _____
10	$2 \times 2 =$ _____	30	$2 \times 6 =$ _____	50	$8 \times 2 =$ _____
11	$2 \times 5 =$ _____	31	$10 \times 2 =$ _____	51	$11 \times 2 =$ _____
12	$2 \times 6 =$ _____	32	$8 \times 2 =$ _____	52	$10 \times 2 =$ _____
13	$2 \times 1 =$ _____	33	$8 \times 2 =$ _____	53	$12 \times 2 =$ _____
14	$2 \times 12 =$ _____	34	$9 \times 2 =$ _____	54	$1 \times 2 =$ _____
15	$2 \times 9 =$ _____	35	$5 \times 2 =$ _____	55	$10 \times 2 =$ _____
16	$2 \times 12 =$ _____	36	$2 \times 2 =$ _____	56	$7 \times 2 =$ _____
17	$2 \times 11 =$ _____	37	$1 \times 2 =$ _____	57	$4 \times 2 =$ _____
18	$2 \times 5 =$ _____	38	$10 \times 2 =$ _____	58	$8 \times 2 =$ _____
19	$2 \times 1 =$ _____	39	$12 \times 2 =$ _____	59	$5 \times 2 =$ _____
20	$2 \times 5 =$ _____	40	$8 \times 2 =$ _____	60	$10 \times 2 =$ _____

Time taken

:

🕒 3 minute time limit 🕒

Score

60

What's your rock status?

WANNABE

< 18 correct in 3 mins

GARAGE ROCKER

18-19 correct in 3 mins

BUSKER

20-21 correct in 3 mins

GIGGER

22-24 correct in 3 mins

UNSIGNED ACT

25-29 correct in 3 mins

BREAKTHROUGH ARTIST

30-35 correct in 3 mins

SUPPORT ACT

36-44 correct in 3 mins

HEADLINER

45-59 correct in 3 mins

ROCK STAR

All correct in \leq 3mins

ROCK LEGEND

All correct in \leq 2min

ROCK HERO

All correct in \leq 1 min

**TIMES TABLES
ROCK STARS**

Name: _____

Week 12 Session 2

2020-21

2s 5s and 10s

3 a week

Times Tables Rock Stars

2 Times Tables

Licensed to Weston Point Primary School, Runcorn

1	$22 \div 2 =$ _____	21	$18 \div 2 =$ _____	41	$2 \div 2 =$ _____
2	$8 \div 2 =$ _____	22	$24 \div 2 =$ _____	42	$18 \div 2 =$ _____
3	$20 \div 2 =$ _____	23	$20 \div 2 =$ _____	43	$8 \div 2 =$ _____
4	$4 \div 2 =$ _____	24	$16 \div 2 =$ _____	44	$8 \div 2 =$ _____
5	$4 \div 2 =$ _____	25	$10 \div 2 =$ _____	45	$8 \div 2 =$ _____
6	$14 \div 2 =$ _____	26	$18 \div 2 =$ _____	46	$12 \div 2 =$ _____
7	$24 \div 2 =$ _____	27	$16 \div 2 =$ _____	47	$22 \div 2 =$ _____
8	$4 \div 2 =$ _____	28	$8 \div 2 =$ _____	48	$12 \div 2 =$ _____
9	$20 \div 2 =$ _____	29	$10 \div 2 =$ _____	49	$22 \div 2 =$ _____
10	$10 \div 2 =$ _____	30	$22 \div 2 =$ _____	50	$14 \div 2 =$ _____
11	$6 \div 2 =$ _____	31	$14 \div 2 =$ _____	51	$20 \div 2 =$ _____
12	$24 \div 2 =$ _____	32	$4 \div 2 =$ _____	52	$8 \div 2 =$ _____
13	$22 \div 2 =$ _____	33	$14 \div 2 =$ _____	53	$24 \div 2 =$ _____
14	$14 \div 2 =$ _____	34	$12 \div 2 =$ _____	54	$16 \div 2 =$ _____
15	$16 \div 2 =$ _____	35	$14 \div 2 =$ _____	55	$18 \div 2 =$ _____
16	$12 \div 2 =$ _____	36	$20 \div 2 =$ _____	56	$8 \div 2 =$ _____
17	$4 \div 2 =$ _____	37	$12 \div 2 =$ _____	57	$16 \div 2 =$ _____
18	$14 \div 2 =$ _____	38	$4 \div 2 =$ _____	58	$10 \div 2 =$ _____
19	$14 \div 2 =$ _____	39	$18 \div 2 =$ _____	59	$24 \div 2 =$ _____
20	$2 \div 2 =$ _____	40	$14 \div 2 =$ _____	60	$10 \div 2 =$ _____

Time taken

:

🕒 3 minute time limit 🕒

Score

60

What's your rock status?

WANNABE

< 18 correct in 3 mins

GARAGE ROCKER

18-19 correct in 3 mins

BUSKER

20-21 correct in 3 mins

GIGGER

22-24 correct in 3 mins

UNSIGNED ACT

25-29 correct in 3 mins

BREAKTHROUGH ARTIST

30-35 correct in 3 mins

SUPPORT ACT

36-44 correct in 3 mins

HEADLINER

45-59 correct in 3 mins

ROCK STAR

All correct in \leq 3mins

ROCK LEGEND

All correct in \leq 2min

ROCK HERO

All correct in \leq 1 min

**TIMES TABLES
ROCK STARS**

Name: _____

Week 12 Session 3

2020-21

2s 5s and 10s

3 a week

Times Tables Rock Stars

2 Times Tables

Licensed to Weston Point Primary School, Runcorn

1	$2 \times 5 =$ _____	21	$2 \times 7 =$ _____	41	$14 \div 2 =$ _____
2	$2 \times 7 =$ _____	22	$2 \times 3 =$ _____	42	$16 \div 2 =$ _____
3	$2 \times 8 =$ _____	23	$2 \times 12 =$ _____	43	$8 \div 2 =$ _____
4	$2 \times 1 =$ _____	24	$2 \times 9 =$ _____	44	$4 \div 2 =$ _____
5	$2 \times 9 =$ _____	25	$2 \times 11 =$ _____	45	$18 \div 2 =$ _____
6	$2 \times 3 =$ _____	26	$2 \times 11 =$ _____	46	$18 \div 2 =$ _____
7	$2 \times 11 =$ _____	27	$2 \times 1 =$ _____	47	$22 \div 2 =$ _____
8	$2 \times 10 =$ _____	28	$2 \times 8 =$ _____	48	$8 \div 2 =$ _____
9	$2 \times 11 =$ _____	29	$2 \times 9 =$ _____	49	$18 \div 2 =$ _____
10	$2 \times 8 =$ _____	30	$2 \times 2 =$ _____	50	$18 \div 2 =$ _____
11	$2 \times 11 =$ _____	31	$18 \div 2 =$ _____	51	$10 \div 2 =$ _____
12	$2 \times 10 =$ _____	32	$20 \div 2 =$ _____	52	$4 \div 2 =$ _____
13	$2 \times 12 =$ _____	33	$12 \div 2 =$ _____	53	$8 \div 2 =$ _____
14	$2 \times 5 =$ _____	34	$2 \div 2 =$ _____	54	$24 \div 2 =$ _____
15	$2 \times 9 =$ _____	35	$24 \div 2 =$ _____	55	$6 \div 2 =$ _____
16	$2 \times 6 =$ _____	36	$22 \div 2 =$ _____	56	$14 \div 2 =$ _____
17	$2 \times 10 =$ _____	37	$2 \div 2 =$ _____	57	$10 \div 2 =$ _____
18	$2 \times 10 =$ _____	38	$12 \div 2 =$ _____	58	$4 \div 2 =$ _____
19	$2 \times 7 =$ _____	39	$10 \div 2 =$ _____	59	$20 \div 2 =$ _____
20	$2 \times 2 =$ _____	40	$14 \div 2 =$ _____	60	$24 \div 2 =$ _____

Time taken

:

🕒 3 minute time limit 🕒

Score

60

Add up your time

Mins

S1 _____

S2 _____

S3 _____

Total _____

Secs

S1 _____

S2 _____

S3 _____

Total _____

Add up your score

S1 _____

S2 _____

S3 _____

Total _____

Name: _____

Week 13 Session 1

2020-21

2s 5s and 10s

3 a week

Times Tables Rock Stars

2 Times Tables

Licensed to Weston Point Primary School, Runcorn

1	$2 \times 5 =$ _____	21	$2 \times 7 =$ _____	41	$8 \times 2 =$ _____
2	$2 \times 3 =$ _____	22	$2 \times 1 =$ _____	42	$9 \times 2 =$ _____
3	$2 \times 8 =$ _____	23	$2 \times 8 =$ _____	43	$3 \times 2 =$ _____
4	$2 \times 12 =$ _____	24	$2 \times 1 =$ _____	44	$4 \times 2 =$ _____
5	$2 \times 11 =$ _____	25	$2 \times 12 =$ _____	45	$10 \times 2 =$ _____
6	$2 \times 1 =$ _____	26	$2 \times 8 =$ _____	46	$8 \times 2 =$ _____
7	$2 \times 2 =$ _____	27	$2 \times 6 =$ _____	47	$10 \times 2 =$ _____
8	$2 \times 3 =$ _____	28	$2 \times 12 =$ _____	48	$4 \times 2 =$ _____
9	$2 \times 7 =$ _____	29	$2 \times 2 =$ _____	49	$2 \times 2 =$ _____
10	$2 \times 4 =$ _____	30	$2 \times 10 =$ _____	50	$2 \times 2 =$ _____
11	$2 \times 5 =$ _____	31	$2 \times 2 =$ _____	51	$11 \times 2 =$ _____
12	$2 \times 7 =$ _____	32	$3 \times 2 =$ _____	52	$1 \times 2 =$ _____
13	$2 \times 10 =$ _____	33	$8 \times 2 =$ _____	53	$10 \times 2 =$ _____
14	$2 \times 10 =$ _____	34	$11 \times 2 =$ _____	54	$6 \times 2 =$ _____
15	$2 \times 1 =$ _____	35	$12 \times 2 =$ _____	55	$10 \times 2 =$ _____
16	$2 \times 10 =$ _____	36	$11 \times 2 =$ _____	56	$8 \times 2 =$ _____
17	$2 \times 6 =$ _____	37	$5 \times 2 =$ _____	57	$4 \times 2 =$ _____
18	$2 \times 11 =$ _____	38	$11 \times 2 =$ _____	58	$6 \times 2 =$ _____
19	$2 \times 10 =$ _____	39	$6 \times 2 =$ _____	59	$1 \times 2 =$ _____
20	$2 \times 8 =$ _____	40	$3 \times 2 =$ _____	60	$8 \times 2 =$ _____

Time taken

:

🕒 3 minute time limit 🕒

Score

60

What's your rock status?

WANNABE

< 18 correct in 3 mins

GARAGE ROCKER

18-19 correct in 3 mins

BUSKER

20-21 correct in 3 mins

GIGGER

22-24 correct in 3 mins

UNSIGNED ACT

25-29 correct in 3 mins

BREAKTHROUGH ARTIST

30-35 correct in 3 mins

SUPPORT ACT

36-44 correct in 3 mins

HEADLINER

45-59 correct in 3 mins

ROCK STAR

All correct in \leq 3mins

ROCK LEGEND

All correct in \leq 2min

ROCK HERO

All correct in \leq 1 min

**TIMES TABLES
ROCK STARS**

Name: _____

Week 13 Session 2

2020-21

2s 5s and 10s

3 a week

Times Tables Rock Stars

2 Times Tables

Licensed to Weston Point Primary School, Runcorn

1	$22 \div 2 =$ _____	21	$12 \div 2 =$ _____	41	$14 \div 2 =$ _____
2	$8 \div 2 =$ _____	22	$4 \div 2 =$ _____	42	$14 \div 2 =$ _____
3	$20 \div 2 =$ _____	23	$24 \div 2 =$ _____	43	$4 \div 2 =$ _____
4	$12 \div 2 =$ _____	24	$18 \div 2 =$ _____	44	$16 \div 2 =$ _____
5	$24 \div 2 =$ _____	25	$14 \div 2 =$ _____	45	$6 \div 2 =$ _____
6	$22 \div 2 =$ _____	26	$8 \div 2 =$ _____	46	$12 \div 2 =$ _____
7	$20 \div 2 =$ _____	27	$20 \div 2 =$ _____	47	$22 \div 2 =$ _____
8	$8 \div 2 =$ _____	28	$24 \div 2 =$ _____	48	$10 \div 2 =$ _____
9	$8 \div 2 =$ _____	29	$14 \div 2 =$ _____	49	$18 \div 2 =$ _____
10	$4 \div 2 =$ _____	30	$10 \div 2 =$ _____	50	$12 \div 2 =$ _____
11	$14 \div 2 =$ _____	31	$10 \div 2 =$ _____	51	$12 \div 2 =$ _____
12	$18 \div 2 =$ _____	32	$8 \div 2 =$ _____	52	$18 \div 2 =$ _____
13	$18 \div 2 =$ _____	33	$24 \div 2 =$ _____	53	$6 \div 2 =$ _____
14	$10 \div 2 =$ _____	34	$8 \div 2 =$ _____	54	$20 \div 2 =$ _____
15	$16 \div 2 =$ _____	35	$8 \div 2 =$ _____	55	$6 \div 2 =$ _____
16	$18 \div 2 =$ _____	36	$20 \div 2 =$ _____	56	$8 \div 2 =$ _____
17	$4 \div 2 =$ _____	37	$10 \div 2 =$ _____	57	$2 \div 2 =$ _____
18	$16 \div 2 =$ _____	38	$8 \div 2 =$ _____	58	$6 \div 2 =$ _____
19	$2 \div 2 =$ _____	39	$4 \div 2 =$ _____	59	$4 \div 2 =$ _____
20	$18 \div 2 =$ _____	40	$14 \div 2 =$ _____	60	$24 \div 2 =$ _____

Time taken

:

🕒 3 minute time limit 🕒

Score

60

What's your rock status?

WANNABE

< 18 correct in 3 mins

GARAGE ROCKER

18-19 correct in 3 mins

BUSKER

20-21 correct in 3 mins

GIGGER

22-24 correct in 3 mins

UNSIGNED ACT

25-29 correct in 3 mins

BREAKTHROUGH ARTIST

30-35 correct in 3 mins

SUPPORT ACT

36-44 correct in 3 mins

HEADLINER

45-59 correct in 3 mins

ROCK STAR

All correct in \leq 3mins

ROCK LEGEND

All correct in \leq 2min

ROCK HERO

All correct in \leq 1 min

**TIMES TABLES
ROCK STARS**

Name: _____

Week 13 Session 3

2020-21

2s 5s and 10s

3 a week

Times Tables Rock Stars

2 Times Tables

Licensed to Weston Point Primary School, Runcorn

1	$2 \times 11 =$ _____	21	$2 \times 7 =$ _____	41	$4 \div 2 =$ _____
2	$2 \times 10 =$ _____	22	$2 \times 10 =$ _____	42	$8 \div 2 =$ _____
3	$2 \times 1 =$ _____	23	$2 \times 1 =$ _____	43	$24 \div 2 =$ _____
4	$2 \times 9 =$ _____	24	$2 \times 5 =$ _____	44	$12 \div 2 =$ _____
5	$2 \times 11 =$ _____	25	$2 \times 2 =$ _____	45	$22 \div 2 =$ _____
6	$2 \times 8 =$ _____	26	$2 \times 5 =$ _____	46	$8 \div 2 =$ _____
7	$2 \times 9 =$ _____	27	$2 \times 12 =$ _____	47	$20 \div 2 =$ _____
8	$2 \times 1 =$ _____	28	$2 \times 11 =$ _____	48	$8 \div 2 =$ _____
9	$2 \times 9 =$ _____	29	$2 \times 12 =$ _____	49	$8 \div 2 =$ _____
10	$2 \times 9 =$ _____	30	$2 \times 7 =$ _____	50	$22 \div 2 =$ _____
11	$2 \times 10 =$ _____	31	$6 \div 2 =$ _____	51	$22 \div 2 =$ _____
12	$2 \times 8 =$ _____	32	$24 \div 2 =$ _____	52	$6 \div 2 =$ _____
13	$2 \times 8 =$ _____	33	$18 \div 2 =$ _____	53	$6 \div 2 =$ _____
14	$2 \times 11 =$ _____	34	$6 \div 2 =$ _____	54	$8 \div 2 =$ _____
15	$2 \times 1 =$ _____	35	$24 \div 2 =$ _____	55	$8 \div 2 =$ _____
16	$2 \times 3 =$ _____	36	$14 \div 2 =$ _____	56	$20 \div 2 =$ _____
17	$2 \times 12 =$ _____	37	$14 \div 2 =$ _____	57	$16 \div 2 =$ _____
18	$2 \times 12 =$ _____	38	$4 \div 2 =$ _____	58	$18 \div 2 =$ _____
19	$2 \times 2 =$ _____	39	$22 \div 2 =$ _____	59	$18 \div 2 =$ _____
20	$2 \times 9 =$ _____	40	$4 \div 2 =$ _____	60	$12 \div 2 =$ _____

Time taken

:

🕒 3 minute time limit 🕒

Score

60

Add up your time

Mins

S1 _____

S2 _____

S3 _____

Total _____

Secs

S1 _____

S2 _____

S3 _____

Total _____

Add up your score

S1 _____

S2 _____

S3 _____

Total _____

Name: _____

Week 14 Session 1

2020-21

2s 5s and 10s

3 a week

Times Tables Rock Stars

5 Times Tables

Licensed to Weston Point Primary School, Runcorn

1	$5 \times 7 =$ _____	21	$5 \times 11 =$ _____	41	$7 \times 5 =$ _____
2	$5 \times 3 =$ _____	22	$5 \times 4 =$ _____	42	$4 \times 5 =$ _____
3	$5 \times 6 =$ _____	23	$5 \times 4 =$ _____	43	$10 \times 5 =$ _____
4	$5 \times 7 =$ _____	24	$5 \times 6 =$ _____	44	$11 \times 5 =$ _____
5	$5 \times 1 =$ _____	25	$5 \times 9 =$ _____	45	$2 \times 5 =$ _____
6	$5 \times 9 =$ _____	26	$5 \times 9 =$ _____	46	$5 \times 5 =$ _____
7	$5 \times 5 =$ _____	27	$5 \times 9 =$ _____	47	$6 \times 5 =$ _____
8	$5 \times 9 =$ _____	28	$5 \times 9 =$ _____	48	$10 \times 5 =$ _____
9	$5 \times 10 =$ _____	29	$5 \times 8 =$ _____	49	$12 \times 5 =$ _____
10	$5 \times 6 =$ _____	30	$5 \times 8 =$ _____	50	$12 \times 5 =$ _____
11	$5 \times 5 =$ _____	31	$2 \times 5 =$ _____	51	$12 \times 5 =$ _____
12	$5 \times 12 =$ _____	32	$12 \times 5 =$ _____	52	$2 \times 5 =$ _____
13	$5 \times 1 =$ _____	33	$3 \times 5 =$ _____	53	$2 \times 5 =$ _____
14	$5 \times 5 =$ _____	34	$1 \times 5 =$ _____	54	$5 \times 5 =$ _____
15	$5 \times 10 =$ _____	35	$7 \times 5 =$ _____	55	$4 \times 5 =$ _____
16	$5 \times 5 =$ _____	36	$7 \times 5 =$ _____	56	$11 \times 5 =$ _____
17	$5 \times 1 =$ _____	37	$6 \times 5 =$ _____	57	$12 \times 5 =$ _____
18	$5 \times 9 =$ _____	38	$10 \times 5 =$ _____	58	$4 \times 5 =$ _____
19	$5 \times 7 =$ _____	39	$8 \times 5 =$ _____	59	$11 \times 5 =$ _____
20	$5 \times 9 =$ _____	40	$6 \times 5 =$ _____	60	$8 \times 5 =$ _____

Time taken

:

🕒 3 minute time limit 🕒

Score

60

What's your rock status?

WANNABE

< 18 correct in 3 mins

GARAGE ROCKER

18-19 correct in 3 mins

BUSKER

20-21 correct in 3 mins

GIGGER

22-24 correct in 3 mins

UNSIGNED ACT

25-29 correct in 3 mins

BREAKTHROUGH ARTIST

30-35 correct in 3 mins

SUPPORT ACT

36-44 correct in 3 mins

HEADLINER

45-59 correct in 3 mins

ROCK STAR

All correct in \leq 3mins

ROCK LEGEND

All correct in \leq 2min

ROCK HERO

All correct in \leq 1 min

**TIMES TABLES
ROCK STARS**

Name: _____

Week 14 Session 2

2020-21

2s 5s and 10s

3 a week

Times Tables Rock Stars

5 Times Tables

Licensed to Weston Point Primary School, Runcorn

1	$45 \div 5 =$ _____	21	$15 \div 5 =$ _____	41	$15 \div 5 =$ _____
2	$30 \div 5 =$ _____	22	$40 \div 5 =$ _____	42	$40 \div 5 =$ _____
3	$55 \div 5 =$ _____	23	$35 \div 5 =$ _____	43	$60 \div 5 =$ _____
4	$10 \div 5 =$ _____	24	$30 \div 5 =$ _____	44	$20 \div 5 =$ _____
5	$40 \div 5 =$ _____	25	$50 \div 5 =$ _____	45	$35 \div 5 =$ _____
6	$15 \div 5 =$ _____	26	$45 \div 5 =$ _____	46	$55 \div 5 =$ _____
7	$25 \div 5 =$ _____	27	$60 \div 5 =$ _____	47	$30 \div 5 =$ _____
8	$55 \div 5 =$ _____	28	$55 \div 5 =$ _____	48	$45 \div 5 =$ _____
9	$50 \div 5 =$ _____	29	$55 \div 5 =$ _____	49	$10 \div 5 =$ _____
10	$5 \div 5 =$ _____	30	$50 \div 5 =$ _____	50	$45 \div 5 =$ _____
11	$20 \div 5 =$ _____	31	$15 \div 5 =$ _____	51	$20 \div 5 =$ _____
12	$60 \div 5 =$ _____	32	$45 \div 5 =$ _____	52	$55 \div 5 =$ _____
13	$30 \div 5 =$ _____	33	$30 \div 5 =$ _____	53	$60 \div 5 =$ _____
14	$20 \div 5 =$ _____	34	$25 \div 5 =$ _____	54	$40 \div 5 =$ _____
15	$35 \div 5 =$ _____	35	$50 \div 5 =$ _____	55	$45 \div 5 =$ _____
16	$15 \div 5 =$ _____	36	$60 \div 5 =$ _____	56	$55 \div 5 =$ _____
17	$5 \div 5 =$ _____	37	$40 \div 5 =$ _____	57	$5 \div 5 =$ _____
18	$35 \div 5 =$ _____	38	$5 \div 5 =$ _____	58	$15 \div 5 =$ _____
19	$40 \div 5 =$ _____	39	$20 \div 5 =$ _____	59	$5 \div 5 =$ _____
20	$35 \div 5 =$ _____	40	$10 \div 5 =$ _____	60	$5 \div 5 =$ _____

Time taken

:

🕒 3 minute time limit 🕒

Score

60

What's your rock status?

WANNABE

< 18 correct in 3 mins

GARAGE ROCKER

18-19 correct in 3 mins

BUSKER

20-21 correct in 3 mins

GIGGER

22-24 correct in 3 mins

UNSIGNED ACT

25-29 correct in 3 mins

BREAKTHROUGH ARTIST

30-35 correct in 3 mins

SUPPORT ACT

36-44 correct in 3 mins

HEADLINER

45-59 correct in 3 mins

ROCK STAR

All correct in \leq 3mins

ROCK LEGEND

All correct in \leq 2min

ROCK HERO

All correct in \leq 1 min

**TIMES TABLES
ROCK STARS**

Name: _____

Week 14 Session 3

2020-21

2s 5s and 10s

3 a week

Times Tables Rock Stars

5 Times Tables

Licensed to Weston Point Primary School, Runcorn

1	$5 \times 2 =$ _____	21	$5 \times 10 =$ _____	41	$30 \div 5 =$ _____
2	$5 \times 10 =$ _____	22	$5 \times 8 =$ _____	42	$60 \div 5 =$ _____
3	$5 \times 12 =$ _____	23	$5 \times 1 =$ _____	43	$5 \div 5 =$ _____
4	$5 \times 5 =$ _____	24	$5 \times 7 =$ _____	44	$60 \div 5 =$ _____
5	$5 \times 5 =$ _____	25	$5 \times 7 =$ _____	45	$10 \div 5 =$ _____
6	$5 \times 12 =$ _____	26	$5 \times 5 =$ _____	46	$60 \div 5 =$ _____
7	$5 \times 11 =$ _____	27	$5 \times 7 =$ _____	47	$15 \div 5 =$ _____
8	$5 \times 4 =$ _____	28	$5 \times 3 =$ _____	48	$5 \div 5 =$ _____
9	$5 \times 12 =$ _____	29	$5 \times 9 =$ _____	49	$40 \div 5 =$ _____
10	$5 \times 2 =$ _____	30	$5 \times 8 =$ _____	50	$60 \div 5 =$ _____
11	$5 \times 11 =$ _____	31	$20 \div 5 =$ _____	51	$5 \div 5 =$ _____
12	$5 \times 9 =$ _____	32	$50 \div 5 =$ _____	52	$5 \div 5 =$ _____
13	$5 \times 6 =$ _____	33	$60 \div 5 =$ _____	53	$45 \div 5 =$ _____
14	$5 \times 9 =$ _____	34	$15 \div 5 =$ _____	54	$50 \div 5 =$ _____
15	$5 \times 6 =$ _____	35	$30 \div 5 =$ _____	55	$55 \div 5 =$ _____
16	$5 \times 2 =$ _____	36	$60 \div 5 =$ _____	56	$5 \div 5 =$ _____
17	$5 \times 5 =$ _____	37	$15 \div 5 =$ _____	57	$45 \div 5 =$ _____
18	$5 \times 7 =$ _____	38	$30 \div 5 =$ _____	58	$5 \div 5 =$ _____
19	$5 \times 5 =$ _____	39	$25 \div 5 =$ _____	59	$20 \div 5 =$ _____
20	$5 \times 11 =$ _____	40	$35 \div 5 =$ _____	60	$15 \div 5 =$ _____

Time taken

:

🕒 3 minute time limit 🕒

Score

60

Add up your time

Mins
S1 _____
S2 _____
S3 _____
Total _____

Secs
S1 _____
S2 _____
S3 _____
Total _____

Add up your score
S1 _____
S2 _____
S3 _____
Total _____

Name: _____

Week 15 Session 1

2020-21

2s 5s and 10s

3 a week

**Times Tables
Rock Stars**

**5
Times Tables**

Licensed to Weston Point Primary School, Runcorn

1	$5 \times 1 =$ _____	21	$5 \times 9 =$ _____	41	$4 \times 5 =$ _____
2	$5 \times 2 =$ _____	22	$5 \times 4 =$ _____	42	$5 \times 5 =$ _____
3	$5 \times 1 =$ _____	23	$5 \times 12 =$ _____	43	$7 \times 5 =$ _____
4	$5 \times 9 =$ _____	24	$5 \times 4 =$ _____	44	$1 \times 5 =$ _____
5	$5 \times 4 =$ _____	25	$5 \times 9 =$ _____	45	$11 \times 5 =$ _____
6	$5 \times 9 =$ _____	26	$5 \times 9 =$ _____	46	$4 \times 5 =$ _____
7	$5 \times 12 =$ _____	27	$5 \times 6 =$ _____	47	$10 \times 5 =$ _____
8	$5 \times 5 =$ _____	28	$5 \times 10 =$ _____	48	$3 \times 5 =$ _____
9	$5 \times 2 =$ _____	29	$5 \times 3 =$ _____	49	$2 \times 5 =$ _____
10	$5 \times 4 =$ _____	30	$5 \times 7 =$ _____	50	$3 \times 5 =$ _____
11	$5 \times 9 =$ _____	31	$9 \times 5 =$ _____	51	$5 \times 5 =$ _____
12	$5 \times 10 =$ _____	32	$1 \times 5 =$ _____	52	$1 \times 5 =$ _____
13	$5 \times 10 =$ _____	33	$9 \times 5 =$ _____	53	$4 \times 5 =$ _____
14	$5 \times 7 =$ _____	34	$7 \times 5 =$ _____	54	$5 \times 5 =$ _____
15	$5 \times 5 =$ _____	35	$8 \times 5 =$ _____	55	$9 \times 5 =$ _____
16	$5 \times 10 =$ _____	36	$2 \times 5 =$ _____	56	$8 \times 5 =$ _____
17	$5 \times 5 =$ _____	37	$2 \times 5 =$ _____	57	$6 \times 5 =$ _____
18	$5 \times 2 =$ _____	38	$12 \times 5 =$ _____	58	$4 \times 5 =$ _____
19	$5 \times 4 =$ _____	39	$9 \times 5 =$ _____	59	$2 \times 5 =$ _____
20	$5 \times 11 =$ _____	40	$6 \times 5 =$ _____	60	$6 \times 5 =$ _____

Time taken

:

3 minute time limit

Score

60

What's your rock status?

WANNABE

< 18 correct in 3 mins

GARAGE ROCKER

18-19 correct in 3 mins

BUSKER

20-21 correct in 3 mins

GIGGER

22-24 correct in 3 mins

UNSIGNED ACT

25-29 correct in 3 mins

BREAKTHROUGH ARTIST

30-35 correct in 3 mins

SUPPORT ACT

36-44 correct in 3 mins

HEADLINER

45-59 correct in 3 mins

ROCK STAR

All correct in \leq 3mins

ROCK LEGEND

All correct in \leq 2min

ROCK HERO

All correct in \leq 1 min

**TIMES TABLES
ROCK STARS**

Name: _____

Week 15 Session 2

2020-21

2s 5s and 10s

3 a week

Times Tables Rock Stars

5 Times Tables

Licensed to Weston Point Primary School, Runcorn

1	$45 \div 5 =$ _____	21	$10 \div 5 =$ _____	41	$50 \div 5 =$ _____
2	$10 \div 5 =$ _____	22	$30 \div 5 =$ _____	42	$55 \div 5 =$ _____
3	$35 \div 5 =$ _____	23	$5 \div 5 =$ _____	43	$30 \div 5 =$ _____
4	$50 \div 5 =$ _____	24	$45 \div 5 =$ _____	44	$25 \div 5 =$ _____
5	$45 \div 5 =$ _____	25	$5 \div 5 =$ _____	45	$30 \div 5 =$ _____
6	$25 \div 5 =$ _____	26	$15 \div 5 =$ _____	46	$25 \div 5 =$ _____
7	$10 \div 5 =$ _____	27	$5 \div 5 =$ _____	47	$45 \div 5 =$ _____
8	$40 \div 5 =$ _____	28	$35 \div 5 =$ _____	48	$50 \div 5 =$ _____
9	$60 \div 5 =$ _____	29	$20 \div 5 =$ _____	49	$15 \div 5 =$ _____
10	$10 \div 5 =$ _____	30	$35 \div 5 =$ _____	50	$40 \div 5 =$ _____
11	$20 \div 5 =$ _____	31	$25 \div 5 =$ _____	51	$60 \div 5 =$ _____
12	$5 \div 5 =$ _____	32	$5 \div 5 =$ _____	52	$25 \div 5 =$ _____
13	$60 \div 5 =$ _____	33	$20 \div 5 =$ _____	53	$40 \div 5 =$ _____
14	$25 \div 5 =$ _____	34	$5 \div 5 =$ _____	54	$10 \div 5 =$ _____
15	$60 \div 5 =$ _____	35	$35 \div 5 =$ _____	55	$20 \div 5 =$ _____
16	$40 \div 5 =$ _____	36	$10 \div 5 =$ _____	56	$20 \div 5 =$ _____
17	$40 \div 5 =$ _____	37	$15 \div 5 =$ _____	57	$30 \div 5 =$ _____
18	$15 \div 5 =$ _____	38	$60 \div 5 =$ _____	58	$10 \div 5 =$ _____
19	$15 \div 5 =$ _____	39	$10 \div 5 =$ _____	59	$40 \div 5 =$ _____
20	$20 \div 5 =$ _____	40	$60 \div 5 =$ _____	60	$35 \div 5 =$ _____

Time taken

:

🕒 3 minute time limit 🕒

Score

60

What's your rock status?

WANNABE

< 18 correct in 3 mins

GARAGE ROCKER

18-19 correct in 3 mins

BUSKER

20-21 correct in 3 mins

GIGGER

22-24 correct in 3 mins

UNSIGNED ACT

25-29 correct in 3 mins

BREAKTHROUGH ARTIST

30-35 correct in 3 mins

SUPPORT ACT

36-44 correct in 3 mins

HEADLINER

45-59 correct in 3 mins

ROCK STAR

All correct in \leq 3mins

ROCK LEGEND

All correct in \leq 2min

ROCK HERO

All correct in \leq 1 min

**TIMES TABLES
ROCK STARS**

Name: _____

Week 15 Session 3

2020-21

2s 5s and 10s

3 a week

Times Tables Rock Stars



5 Times Tables

Licensed to Weston Point Primary School, Runcorn

1	$5 \times 11 =$ _____	21	$5 \times 3 =$ _____	41	$30 \div 5 =$ _____
2	$5 \times 4 =$ _____	22	$5 \times 9 =$ _____	42	$10 \div 5 =$ _____
3	$5 \times 12 =$ _____	23	$5 \times 7 =$ _____	43	$25 \div 5 =$ _____
4	$5 \times 2 =$ _____	24	$5 \times 11 =$ _____	44	$5 \div 5 =$ _____
5	$5 \times 3 =$ _____	25	$5 \times 6 =$ _____	45	$30 \div 5 =$ _____
6	$5 \times 2 =$ _____	26	$5 \times 5 =$ _____	46	$40 \div 5 =$ _____
7	$5 \times 3 =$ _____	27	$5 \times 6 =$ _____	47	$25 \div 5 =$ _____
8	$5 \times 1 =$ _____	28	$5 \times 6 =$ _____	48	$35 \div 5 =$ _____
9	$5 \times 4 =$ _____	29	$5 \times 9 =$ _____	49	$30 \div 5 =$ _____
10	$5 \times 4 =$ _____	30	$5 \times 11 =$ _____	50	$45 \div 5 =$ _____
11	$5 \times 1 =$ _____	31	$50 \div 5 =$ _____	51	$45 \div 5 =$ _____
12	$5 \times 1 =$ _____	32	$50 \div 5 =$ _____	52	$60 \div 5 =$ _____
13	$5 \times 12 =$ _____	33	$25 \div 5 =$ _____	53	$30 \div 5 =$ _____
14	$5 \times 1 =$ _____	34	$15 \div 5 =$ _____	54	$30 \div 5 =$ _____
15	$5 \times 1 =$ _____	35	$30 \div 5 =$ _____	55	$10 \div 5 =$ _____
16	$5 \times 2 =$ _____	36	$40 \div 5 =$ _____	56	$10 \div 5 =$ _____
17	$5 \times 5 =$ _____	37	$40 \div 5 =$ _____	57	$25 \div 5 =$ _____
18	$5 \times 10 =$ _____	38	$25 \div 5 =$ _____	58	$35 \div 5 =$ _____
19	$5 \times 7 =$ _____	39	$40 \div 5 =$ _____	59	$10 \div 5 =$ _____
20	$5 \times 5 =$ _____	40	$35 \div 5 =$ _____	60	$40 \div 5 =$ _____

Time taken

:

 3 minute time limit 

Score

60

Add up your time

Mins

S1 _____

S2 _____

S3 _____

Total _____

Secs

S1 _____

S2 _____

S3 _____

Total _____

Add up your score

S1 _____

S2 _____

S3 _____

Total _____

Name: _____

Week 16 Session 1

2020-21

2s 5s and 10s

3 a week

Times Tables Rock Stars

10 Times Tables

Licensed to Weston Point Primary School, Runcorn

1	$10 \times 10 =$ _____	21	$10 \times 4 =$ _____	41	$5 \times 10 =$ _____
2	$10 \times 3 =$ _____	22	$10 \times 11 =$ _____	42	$1 \times 10 =$ _____
3	$10 \times 3 =$ _____	23	$10 \times 9 =$ _____	43	$6 \times 10 =$ _____
4	$10 \times 11 =$ _____	24	$10 \times 4 =$ _____	44	$11 \times 10 =$ _____
5	$10 \times 7 =$ _____	25	$10 \times 10 =$ _____	45	$5 \times 10 =$ _____
6	$10 \times 7 =$ _____	26	$10 \times 8 =$ _____	46	$11 \times 10 =$ _____
7	$10 \times 3 =$ _____	27	$10 \times 12 =$ _____	47	$12 \times 10 =$ _____
8	$10 \times 4 =$ _____	28	$10 \times 4 =$ _____	48	$12 \times 10 =$ _____
9	$10 \times 2 =$ _____	29	$10 \times 9 =$ _____	49	$1 \times 10 =$ _____
10	$10 \times 5 =$ _____	30	$10 \times 9 =$ _____	50	$6 \times 10 =$ _____
11	$10 \times 2 =$ _____	31	$4 \times 10 =$ _____	51	$3 \times 10 =$ _____
12	$10 \times 1 =$ _____	32	$9 \times 10 =$ _____	52	$12 \times 10 =$ _____
13	$10 \times 9 =$ _____	33	$9 \times 10 =$ _____	53	$3 \times 10 =$ _____
14	$10 \times 12 =$ _____	34	$12 \times 10 =$ _____	54	$9 \times 10 =$ _____
15	$10 \times 3 =$ _____	35	$11 \times 10 =$ _____	55	$12 \times 10 =$ _____
16	$10 \times 2 =$ _____	36	$8 \times 10 =$ _____	56	$6 \times 10 =$ _____
17	$10 \times 12 =$ _____	37	$1 \times 10 =$ _____	57	$1 \times 10 =$ _____
18	$10 \times 6 =$ _____	38	$11 \times 10 =$ _____	58	$12 \times 10 =$ _____
19	$10 \times 4 =$ _____	39	$8 \times 10 =$ _____	59	$2 \times 10 =$ _____
20	$10 \times 8 =$ _____	40	$9 \times 10 =$ _____	60	$9 \times 10 =$ _____

Time taken

:

🕒 3 minute time limit 🕒

Score

60

What's your rock status?

WANNABE

< 18 correct in 3 mins

GARAGE ROCKER

18-19 correct in 3 mins

BUSKER

20-21 correct in 3 mins

GIGGER

22-24 correct in 3 mins

UNSIGNED ACT

25-29 correct in 3 mins

BREAKTHROUGH ARTIST

30-35 correct in 3 mins

SUPPORT ACT

36-44 correct in 3 mins

HEADLINER

45-59 correct in 3 mins

ROCK STAR

All correct in \leq 3mins

ROCK LEGEND

All correct in \leq 2min

ROCK HERO

All correct in \leq 1 min

**TIMES TABLES
ROCK STARS**

Name: _____

Week 16 Session 2

2020-21

2s 5s and 10s

3 a week

Times Tables Rock Stars

10 Times Tables

Licensed to Weston Point Primary School, Runcorn

1	$10 \div 10 =$ _____	21	$110 \div 10 =$ _____	41	$90 \div 10 =$ _____
2	$70 \div 10 =$ _____	22	$20 \div 10 =$ _____	42	$100 \div 10 =$ _____
3	$60 \div 10 =$ _____	23	$120 \div 10 =$ _____	43	$90 \div 10 =$ _____
4	$100 \div 10 =$ _____	24	$20 \div 10 =$ _____	44	$80 \div 10 =$ _____
5	$110 \div 10 =$ _____	25	$110 \div 10 =$ _____	45	$10 \div 10 =$ _____
6	$30 \div 10 =$ _____	26	$80 \div 10 =$ _____	46	$40 \div 10 =$ _____
7	$70 \div 10 =$ _____	27	$100 \div 10 =$ _____	47	$120 \div 10 =$ _____
8	$110 \div 10 =$ _____	28	$110 \div 10 =$ _____	48	$50 \div 10 =$ _____
9	$70 \div 10 =$ _____	29	$20 \div 10 =$ _____	49	$120 \div 10 =$ _____
10	$10 \div 10 =$ _____	30	$120 \div 10 =$ _____	50	$60 \div 10 =$ _____
11	$50 \div 10 =$ _____	31	$100 \div 10 =$ _____	51	$20 \div 10 =$ _____
12	$100 \div 10 =$ _____	32	$10 \div 10 =$ _____	52	$60 \div 10 =$ _____
13	$90 \div 10 =$ _____	33	$70 \div 10 =$ _____	53	$120 \div 10 =$ _____
14	$60 \div 10 =$ _____	34	$120 \div 10 =$ _____	54	$10 \div 10 =$ _____
15	$70 \div 10 =$ _____	35	$10 \div 10 =$ _____	55	$60 \div 10 =$ _____
16	$40 \div 10 =$ _____	36	$40 \div 10 =$ _____	56	$120 \div 10 =$ _____
17	$100 \div 10 =$ _____	37	$70 \div 10 =$ _____	57	$100 \div 10 =$ _____
18	$70 \div 10 =$ _____	38	$60 \div 10 =$ _____	58	$50 \div 10 =$ _____
19	$10 \div 10 =$ _____	39	$20 \div 10 =$ _____	59	$30 \div 10 =$ _____
20	$110 \div 10 =$ _____	40	$30 \div 10 =$ _____	60	$80 \div 10 =$ _____

Time taken

:

🕒 3 minute time limit 🕒

Score

60

What's your rock status?

WANNABE

< 18 correct in 3 mins

GARAGE ROCKER

18-19 correct in 3 mins

BUSKER

20-21 correct in 3 mins

GIGGER

22-24 correct in 3 mins

UNSIGNED ACT

25-29 correct in 3 mins

BREAKTHROUGH ARTIST

30-35 correct in 3 mins

SUPPORT ACT

36-44 correct in 3 mins

HEADLINER

45-59 correct in 3 mins

ROCK STAR

All correct in \leq 3mins

ROCK LEGEND

All correct in \leq 2min

ROCK HERO

All correct in \leq 1 min

**TIMES TABLES
ROCK STARS**

Name: _____

Week 16 Session 3

2020-21

2s 5s and 10s

3 a week

Times Tables Rock Stars

10 Times Tables

Licensed to Weston Point Primary School, Runcorn

1	$10 \times 7 =$ _____	21	$10 \times 6 =$ _____	41	$80 \div 10 =$ _____
2	$10 \times 12 =$ _____	22	$10 \times 4 =$ _____	42	$110 \div 10 =$ _____
3	$10 \times 10 =$ _____	23	$10 \times 1 =$ _____	43	$40 \div 10 =$ _____
4	$10 \times 6 =$ _____	24	$10 \times 3 =$ _____	44	$90 \div 10 =$ _____
5	$10 \times 10 =$ _____	25	$10 \times 8 =$ _____	45	$90 \div 10 =$ _____
6	$10 \times 9 =$ _____	26	$10 \times 2 =$ _____	46	$10 \div 10 =$ _____
7	$10 \times 11 =$ _____	27	$10 \times 3 =$ _____	47	$100 \div 10 =$ _____
8	$10 \times 10 =$ _____	28	$10 \times 2 =$ _____	48	$40 \div 10 =$ _____
9	$10 \times 1 =$ _____	29	$10 \times 1 =$ _____	49	$80 \div 10 =$ _____
10	$10 \times 1 =$ _____	30	$10 \times 5 =$ _____	50	$30 \div 10 =$ _____
11	$10 \times 11 =$ _____	31	$60 \div 10 =$ _____	51	$30 \div 10 =$ _____
12	$10 \times 8 =$ _____	32	$20 \div 10 =$ _____	52	$10 \div 10 =$ _____
13	$10 \times 6 =$ _____	33	$40 \div 10 =$ _____	53	$100 \div 10 =$ _____
14	$10 \times 6 =$ _____	34	$30 \div 10 =$ _____	54	$20 \div 10 =$ _____
15	$10 \times 1 =$ _____	35	$20 \div 10 =$ _____	55	$20 \div 10 =$ _____
16	$10 \times 2 =$ _____	36	$10 \div 10 =$ _____	56	$70 \div 10 =$ _____
17	$10 \times 10 =$ _____	37	$40 \div 10 =$ _____	57	$80 \div 10 =$ _____
18	$10 \times 8 =$ _____	38	$120 \div 10 =$ _____	58	$60 \div 10 =$ _____
19	$10 \times 1 =$ _____	39	$60 \div 10 =$ _____	59	$10 \div 10 =$ _____
20	$10 \times 2 =$ _____	40	$120 \div 10 =$ _____	60	$70 \div 10 =$ _____

Time taken

:

🕒 3 minute time limit 🕒

Score

60

Add up your time

Mins

S1 _____

S2 _____

S3 _____

Total _____

Secs

S1 _____

S2 _____

S3 _____

Total _____

Add up your score

S1 _____

S2 _____

S3 _____

Total _____

Name: _____

Week 17 Session 1

2020-21

2s 5s and 10s

3 a week

Times Tables Rock Stars

2,10 Times Tables

Licensed to Weston Point Primary School, Runcorn

1	$10 \times 3 =$ _____	21	$10 \times 10 =$ _____	41	$11 \times 10 =$ _____
2	$10 \times 6 =$ _____	22	$2 \times 4 =$ _____	42	$10 \times 2 =$ _____
3	$10 \times 12 =$ _____	23	$10 \times 9 =$ _____	43	$4 \times 10 =$ _____
4	$10 \times 4 =$ _____	24	$2 \times 4 =$ _____	44	$2 \times 10 =$ _____
5	$10 \times 8 =$ _____	25	$2 \times 6 =$ _____	45	$10 \times 2 =$ _____
6	$10 \times 4 =$ _____	26	$10 \times 9 =$ _____	46	$4 \times 10 =$ _____
7	$10 \times 11 =$ _____	27	$2 \times 5 =$ _____	47	$6 \times 10 =$ _____
8	$10 \times 7 =$ _____	28	$10 \times 7 =$ _____	48	$9 \times 2 =$ _____
9	$10 \times 11 =$ _____	29	$10 \times 12 =$ _____	49	$8 \times 2 =$ _____
10	$10 \times 4 =$ _____	30	$10 \times 12 =$ _____	50	$9 \times 2 =$ _____
11	$10 \times 2 =$ _____	31	$6 \times 10 =$ _____	51	$5 \times 2 =$ _____
12	$2 \times 12 =$ _____	32	$1 \times 2 =$ _____	52	$8 \times 2 =$ _____
13	$10 \times 6 =$ _____	33	$12 \times 2 =$ _____	53	$7 \times 2 =$ _____
14	$2 \times 2 =$ _____	34	$10 \times 2 =$ _____	54	$2 \times 10 =$ _____
15	$10 \times 10 =$ _____	35	$2 \times 10 =$ _____	55	$9 \times 10 =$ _____
16	$10 \times 12 =$ _____	36	$6 \times 10 =$ _____	56	$11 \times 2 =$ _____
17	$10 \times 1 =$ _____	37	$4 \times 2 =$ _____	57	$4 \times 10 =$ _____
18	$10 \times 6 =$ _____	38	$11 \times 10 =$ _____	58	$4 \times 2 =$ _____
19	$10 \times 4 =$ _____	39	$8 \times 10 =$ _____	59	$4 \times 10 =$ _____
20	$2 \times 11 =$ _____	40	$5 \times 2 =$ _____	60	$7 \times 2 =$ _____

Time taken

:

🕒 3 minute time limit 🕒

Score

60

What's your rock status?

WANNABE

< 18 correct in 3 mins

GARAGE ROCKER

18-19 correct in 3 mins

BUSKER

20-21 correct in 3 mins

GIGGER

22-24 correct in 3 mins

UNSIGNED ACT

25-29 correct in 3 mins

BREAKTHROUGH ARTIST

30-35 correct in 3 mins

SUPPORT ACT

36-44 correct in 3 mins

HEADLINER

45-59 correct in 3 mins

ROCK STAR

All correct in \leq 3mins

ROCK LEGEND

All correct in \leq 2min

ROCK HERO

All correct in \leq 1 min

**TIMES TABLES
ROCK STARS**

Name: _____

Week 17 Session 2

2020-21

2s 5s and 10s

3 a week

Times Tables Rock Stars

2,10 Times Tables

Licensed to Weston Point Primary School, Runcorn

1	$20 \div 2 =$ _____	21	$80 \div 10 =$ _____	41	$18 \div 2 =$ _____
2	$40 \div 10 =$ _____	22	$2 \div 2 =$ _____	42	$90 \div 10 =$ _____
3	$10 \div 2 =$ _____	23	$90 \div 10 =$ _____	43	$120 \div 10 =$ _____
4	$40 \div 10 =$ _____	24	$60 \div 10 =$ _____	44	$12 \div 2 =$ _____
5	$22 \div 2 =$ _____	25	$10 \div 10 =$ _____	45	$10 \div 10 =$ _____
6	$22 \div 2 =$ _____	26	$90 \div 10 =$ _____	46	$30 \div 10 =$ _____
7	$22 \div 2 =$ _____	27	$50 \div 10 =$ _____	47	$90 \div 10 =$ _____
8	$4 \div 2 =$ _____	28	$18 \div 2 =$ _____	48	$24 \div 2 =$ _____
9	$120 \div 10 =$ _____	29	$24 \div 2 =$ _____	49	$10 \div 10 =$ _____
10	$110 \div 10 =$ _____	30	$90 \div 10 =$ _____	50	$120 \div 10 =$ _____
11	$110 \div 10 =$ _____	31	$4 \div 2 =$ _____	51	$20 \div 2 =$ _____
12	$10 \div 10 =$ _____	32	$90 \div 10 =$ _____	52	$10 \div 10 =$ _____
13	$6 \div 2 =$ _____	33	$12 \div 2 =$ _____	53	$8 \div 2 =$ _____
14	$70 \div 10 =$ _____	34	$50 \div 10 =$ _____	54	$14 \div 2 =$ _____
15	$14 \div 2 =$ _____	35	$14 \div 2 =$ _____	55	$100 \div 10 =$ _____
16	$22 \div 2 =$ _____	36	$30 \div 10 =$ _____	56	$70 \div 10 =$ _____
17	$10 \div 2 =$ _____	37	$8 \div 2 =$ _____	57	$80 \div 10 =$ _____
18	$14 \div 2 =$ _____	38	$24 \div 2 =$ _____	58	$16 \div 2 =$ _____
19	$24 \div 2 =$ _____	39	$8 \div 2 =$ _____	59	$40 \div 10 =$ _____
20	$120 \div 10 =$ _____	40	$2 \div 2 =$ _____	60	$14 \div 2 =$ _____

Time taken

:

🕒 3 minute time limit 🕒

Score

60

What's your rock status?

WANNABE

< 18 correct in 3 mins

GARAGE ROCKER

18-19 correct in 3 mins

BUSKER

20-21 correct in 3 mins

GIGGER

22-24 correct in 3 mins

UNSIGNED ACT

25-29 correct in 3 mins

BREAKTHROUGH ARTIST

30-35 correct in 3 mins

SUPPORT ACT

36-44 correct in 3 mins

HEADLINER

45-59 correct in 3 mins

ROCK STAR

All correct in \leq 3mins

ROCK LEGEND

All correct in \leq 2min

ROCK HERO

All correct in \leq 1 min

**TIMES TABLES
ROCK STARS**

Name: _____

Week 17 Session 3

2020-21

2s 5s and 10s

3 a week

Times Tables Rock Stars

2,10 Times Tables

Licensed to Weston Point Primary School, Runcorn

1	$2 \times 12 =$ _____	21	$10 \times 6 =$ _____	41	$14 \div 2 =$ _____
2	$10 \times 2 =$ _____	22	$10 \times 6 =$ _____	42	$40 \div 10 =$ _____
3	$2 \times 4 =$ _____	23	$2 \times 9 =$ _____	43	$14 \div 2 =$ _____
4	$10 \times 5 =$ _____	24	$2 \times 3 =$ _____	44	$10 \div 2 =$ _____
5	$2 \times 8 =$ _____	25	$2 \times 4 =$ _____	45	$10 \div 10 =$ _____
6	$2 \times 11 =$ _____	26	$10 \times 4 =$ _____	46	$80 \div 10 =$ _____
7	$2 \times 3 =$ _____	27	$10 \times 10 =$ _____	47	$24 \div 2 =$ _____
8	$2 \times 7 =$ _____	28	$10 \times 3 =$ _____	48	$18 \div 2 =$ _____
9	$10 \times 9 =$ _____	29	$2 \times 3 =$ _____	49	$100 \div 10 =$ _____
10	$2 \times 11 =$ _____	30	$2 \times 6 =$ _____	50	$22 \div 2 =$ _____
11	$10 \times 6 =$ _____	31	$20 \div 10 =$ _____	51	$2 \div 2 =$ _____
12	$2 \times 11 =$ _____	32	$80 \div 10 =$ _____	52	$60 \div 10 =$ _____
13	$2 \times 3 =$ _____	33	$10 \div 10 =$ _____	53	$90 \div 10 =$ _____
14	$10 \times 11 =$ _____	34	$14 \div 2 =$ _____	54	$4 \div 2 =$ _____
15	$2 \times 7 =$ _____	35	$6 \div 2 =$ _____	55	$16 \div 2 =$ _____
16	$2 \times 1 =$ _____	36	$90 \div 10 =$ _____	56	$20 \div 10 =$ _____
17	$2 \times 3 =$ _____	37	$60 \div 10 =$ _____	57	$70 \div 10 =$ _____
18	$2 \times 5 =$ _____	38	$10 \div 10 =$ _____	58	$16 \div 2 =$ _____
19	$10 \times 8 =$ _____	39	$4 \div 2 =$ _____	59	$110 \div 10 =$ _____
20	$10 \times 11 =$ _____	40	$120 \div 10 =$ _____	60	$90 \div 10 =$ _____

Time taken

:

🕒 3 minute time limit 🕒

Score

60

Add up your time

Mins

S1 _____

S2 _____

S3 _____

Total _____

Secs

S1 _____

S2 _____

S3 _____

Total _____

Add up your score

S1 _____

S2 _____

S3 _____

Total _____

Name: _____

Week 18 Session 1

2020-21

2s 5s and 10s

3 a week

Times Tables Rock Stars

5 Times Tables

Licensed to Weston Point Primary School, Runcorn

1	$5 \times 9 =$ _____	21	$5 \times 5 =$ _____	41	$8 \times 5 =$ _____
2	$5 \times 1 =$ _____	22	$5 \times 3 =$ _____	42	$9 \times 5 =$ _____
3	$5 \times 8 =$ _____	23	$5 \times 8 =$ _____	43	$1 \times 5 =$ _____
4	$5 \times 8 =$ _____	24	$5 \times 11 =$ _____	44	$12 \times 5 =$ _____
5	$5 \times 7 =$ _____	25	$5 \times 10 =$ _____	45	$6 \times 5 =$ _____
6	$5 \times 4 =$ _____	26	$5 \times 12 =$ _____	46	$3 \times 5 =$ _____
7	$5 \times 7 =$ _____	27	$5 \times 9 =$ _____	47	$10 \times 5 =$ _____
8	$5 \times 1 =$ _____	28	$5 \times 8 =$ _____	48	$5 \times 5 =$ _____
9	$5 \times 3 =$ _____	29	$5 \times 11 =$ _____	49	$6 \times 5 =$ _____
10	$5 \times 5 =$ _____	30	$5 \times 11 =$ _____	50	$12 \times 5 =$ _____
11	$5 \times 9 =$ _____	31	$7 \times 5 =$ _____	51	$6 \times 5 =$ _____
12	$5 \times 9 =$ _____	32	$1 \times 5 =$ _____	52	$9 \times 5 =$ _____
13	$5 \times 2 =$ _____	33	$11 \times 5 =$ _____	53	$1 \times 5 =$ _____
14	$5 \times 12 =$ _____	34	$4 \times 5 =$ _____	54	$2 \times 5 =$ _____
15	$5 \times 2 =$ _____	35	$11 \times 5 =$ _____	55	$3 \times 5 =$ _____
16	$5 \times 5 =$ _____	36	$9 \times 5 =$ _____	56	$12 \times 5 =$ _____
17	$5 \times 4 =$ _____	37	$8 \times 5 =$ _____	57	$1 \times 5 =$ _____
18	$5 \times 6 =$ _____	38	$11 \times 5 =$ _____	58	$5 \times 5 =$ _____
19	$5 \times 5 =$ _____	39	$6 \times 5 =$ _____	59	$5 \times 5 =$ _____
20	$5 \times 9 =$ _____	40	$3 \times 5 =$ _____	60	$10 \times 5 =$ _____

Time taken

:

🕒 3 minute time limit 🕒

Score

60

What's your rock status?

WANNABE

< 18 correct in 3 mins

GARAGE ROCKER

18-19 correct in 3 mins

BUSKER

20-21 correct in 3 mins

GIGGER

22-24 correct in 3 mins

UNSIGNED ACT

25-29 correct in 3 mins

BREAKTHROUGH ARTIST

30-35 correct in 3 mins

SUPPORT ACT

36-44 correct in 3 mins

HEADLINER

45-59 correct in 3 mins

ROCK STAR

All correct in \leq 3mins

ROCK LEGEND

All correct in \leq 2min

ROCK HERO

All correct in \leq 1 min

**TIMES TABLES
ROCK STARS**

Name: _____

Week 18 Session 2

2020-21

2s 5s and 10s

3 a week

Times Tables Rock Stars

5 Times Tables

Licensed to Weston Point Primary School, Runcorn

1	$45 \div 5 =$ _____	21	$25 \div 5 =$ _____	41	$30 \div 5 =$ _____
2	$45 \div 5 =$ _____	22	$40 \div 5 =$ _____	42	$50 \div 5 =$ _____
3	$5 \div 5 =$ _____	23	$20 \div 5 =$ _____	43	$40 \div 5 =$ _____
4	$15 \div 5 =$ _____	24	$10 \div 5 =$ _____	44	$20 \div 5 =$ _____
5	$60 \div 5 =$ _____	25	$60 \div 5 =$ _____	45	$45 \div 5 =$ _____
6	$20 \div 5 =$ _____	26	$15 \div 5 =$ _____	46	$35 \div 5 =$ _____
7	$5 \div 5 =$ _____	27	$30 \div 5 =$ _____	47	$25 \div 5 =$ _____
8	$35 \div 5 =$ _____	28	$55 \div 5 =$ _____	48	$15 \div 5 =$ _____
9	$35 \div 5 =$ _____	29	$20 \div 5 =$ _____	49	$25 \div 5 =$ _____
10	$20 \div 5 =$ _____	30	$5 \div 5 =$ _____	50	$30 \div 5 =$ _____
11	$60 \div 5 =$ _____	31	$50 \div 5 =$ _____	51	$30 \div 5 =$ _____
12	$20 \div 5 =$ _____	32	$50 \div 5 =$ _____	52	$15 \div 5 =$ _____
13	$15 \div 5 =$ _____	33	$45 \div 5 =$ _____	53	$35 \div 5 =$ _____
14	$10 \div 5 =$ _____	34	$55 \div 5 =$ _____	54	$20 \div 5 =$ _____
15	$50 \div 5 =$ _____	35	$30 \div 5 =$ _____	55	$10 \div 5 =$ _____
16	$30 \div 5 =$ _____	36	$25 \div 5 =$ _____	56	$5 \div 5 =$ _____
17	$55 \div 5 =$ _____	37	$45 \div 5 =$ _____	57	$20 \div 5 =$ _____
18	$15 \div 5 =$ _____	38	$20 \div 5 =$ _____	58	$15 \div 5 =$ _____
19	$60 \div 5 =$ _____	39	$5 \div 5 =$ _____	59	$20 \div 5 =$ _____
20	$5 \div 5 =$ _____	40	$60 \div 5 =$ _____	60	$10 \div 5 =$ _____

Time taken

:

🕒 3 minute time limit 🕒

Score

60

What's your rock status?

WANNABE

< 18 correct in 3 mins

GARAGE ROCKER

18-19 correct in 3 mins

BUSKER

20-21 correct in 3 mins

GIGGER

22-24 correct in 3 mins

UNSIGNED ACT

25-29 correct in 3 mins

BREAKTHROUGH ARTIST

30-35 correct in 3 mins

SUPPORT ACT

36-44 correct in 3 mins

HEADLINER

45-59 correct in 3 mins

ROCK STAR

All correct in \leq 3mins

ROCK LEGEND

All correct in \leq 2min

ROCK HERO

All correct in \leq 1 min

**TIMES TABLES
ROCK STARS**

Name: _____

Week 18 Session 3

2020-21

2s 5s and 10s

3 a week

Times Tables Rock Stars

5 Times Tables

Licensed to Weston Point Primary School, Runcorn

1	$5 \times 7 =$ _____	21	$5 \times 12 =$ _____	41	$20 \div 5 =$ _____
2	$5 \times 3 =$ _____	22	$5 \times 10 =$ _____	42	$25 \div 5 =$ _____
3	$5 \times 3 =$ _____	23	$5 \times 4 =$ _____	43	$5 \div 5 =$ _____
4	$5 \times 9 =$ _____	24	$5 \times 7 =$ _____	44	$40 \div 5 =$ _____
5	$5 \times 6 =$ _____	25	$5 \times 10 =$ _____	45	$25 \div 5 =$ _____
6	$5 \times 6 =$ _____	26	$5 \times 4 =$ _____	46	$50 \div 5 =$ _____
7	$5 \times 8 =$ _____	27	$5 \times 10 =$ _____	47	$45 \div 5 =$ _____
8	$5 \times 9 =$ _____	28	$5 \times 2 =$ _____	48	$40 \div 5 =$ _____
9	$5 \times 3 =$ _____	29	$5 \times 3 =$ _____	49	$10 \div 5 =$ _____
10	$5 \times 1 =$ _____	30	$5 \times 4 =$ _____	50	$30 \div 5 =$ _____
11	$5 \times 2 =$ _____	31	$30 \div 5 =$ _____	51	$50 \div 5 =$ _____
12	$5 \times 9 =$ _____	32	$5 \div 5 =$ _____	52	$25 \div 5 =$ _____
13	$5 \times 1 =$ _____	33	$60 \div 5 =$ _____	53	$35 \div 5 =$ _____
14	$5 \times 12 =$ _____	34	$5 \div 5 =$ _____	54	$40 \div 5 =$ _____
15	$5 \times 6 =$ _____	35	$60 \div 5 =$ _____	55	$40 \div 5 =$ _____
16	$5 \times 9 =$ _____	36	$10 \div 5 =$ _____	56	$30 \div 5 =$ _____
17	$5 \times 3 =$ _____	37	$45 \div 5 =$ _____	57	$25 \div 5 =$ _____
18	$5 \times 8 =$ _____	38	$50 \div 5 =$ _____	58	$55 \div 5 =$ _____
19	$5 \times 3 =$ _____	39	$20 \div 5 =$ _____	59	$20 \div 5 =$ _____
20	$5 \times 2 =$ _____	40	$25 \div 5 =$ _____	60	$35 \div 5 =$ _____

Time taken

:

🕒 3 minute time limit 🕒

Score

60

Add up your time

Mins	
S1	_____
S2	_____
S3	_____
Total	_____

Secs	
S1	_____
S2	_____
S3	_____
Total	_____

Add up your score	
S1	_____
S2	_____
S3	_____
Total	_____

Name: _____

Week 19 Session 1

2020-21

2s 5s and 10s

3 a week

Times Tables Rock Stars

10 Times Tables

Licensed to Weston Point Primary School, Runcorn

1	$10 \times 4 =$ _____	21	$10 \times 7 =$ _____	41	$6 \times 10 =$ _____
2	$10 \times 2 =$ _____	22	$10 \times 1 =$ _____	42	$10 \times 10 =$ _____
3	$10 \times 3 =$ _____	23	$10 \times 2 =$ _____	43	$5 \times 10 =$ _____
4	$10 \times 6 =$ _____	24	$10 \times 3 =$ _____	44	$10 \times 10 =$ _____
5	$10 \times 1 =$ _____	25	$10 \times 5 =$ _____	45	$2 \times 10 =$ _____
6	$10 \times 5 =$ _____	26	$10 \times 2 =$ _____	46	$7 \times 10 =$ _____
7	$10 \times 3 =$ _____	27	$10 \times 11 =$ _____	47	$5 \times 10 =$ _____
8	$10 \times 6 =$ _____	28	$10 \times 11 =$ _____	48	$9 \times 10 =$ _____
9	$10 \times 10 =$ _____	29	$10 \times 1 =$ _____	49	$1 \times 10 =$ _____
10	$10 \times 3 =$ _____	30	$10 \times 12 =$ _____	50	$8 \times 10 =$ _____
11	$10 \times 4 =$ _____	31	$4 \times 10 =$ _____	51	$6 \times 10 =$ _____
12	$10 \times 8 =$ _____	32	$9 \times 10 =$ _____	52	$2 \times 10 =$ _____
13	$10 \times 11 =$ _____	33	$8 \times 10 =$ _____	53	$12 \times 10 =$ _____
14	$10 \times 2 =$ _____	34	$2 \times 10 =$ _____	54	$7 \times 10 =$ _____
15	$10 \times 1 =$ _____	35	$4 \times 10 =$ _____	55	$3 \times 10 =$ _____
16	$10 \times 9 =$ _____	36	$11 \times 10 =$ _____	56	$6 \times 10 =$ _____
17	$10 \times 4 =$ _____	37	$4 \times 10 =$ _____	57	$12 \times 10 =$ _____
18	$10 \times 6 =$ _____	38	$12 \times 10 =$ _____	58	$8 \times 10 =$ _____
19	$10 \times 12 =$ _____	39	$5 \times 10 =$ _____	59	$3 \times 10 =$ _____
20	$10 \times 1 =$ _____	40	$2 \times 10 =$ _____	60	$1 \times 10 =$ _____

Time taken

:

🕒 3 minute time limit 🕒

Score

60

What's your rock status?

WANNABE

< 18 correct in 3 mins

GARAGE ROCKER

18-19 correct in 3 mins

BUSKER

20-21 correct in 3 mins

GIGGER

22-24 correct in 3 mins

UNSIGNED ACT

25-29 correct in 3 mins

BREAKTHROUGH ARTIST

30-35 correct in 3 mins

SUPPORT ACT

36-44 correct in 3 mins

HEADLINER

45-59 correct in 3 mins

ROCK STAR

All correct in \leq 3mins

ROCK LEGEND

All correct in \leq 2min

ROCK HERO

All correct in \leq 1 min

**TIMES TABLES
ROCK STARS**

Name: _____

Week 19 Session 2

2020-21

2s 5s and 10s

3 a week

Times Tables Rock Stars

10 Times Tables

Licensed to Weston Point Primary School, Runcorn

1	$40 \div 10 =$ _____	21	$50 \div 10 =$ _____	41	$60 \div 10 =$ _____
2	$90 \div 10 =$ _____	22	$90 \div 10 =$ _____	42	$40 \div 10 =$ _____
3	$40 \div 10 =$ _____	23	$30 \div 10 =$ _____	43	$50 \div 10 =$ _____
4	$40 \div 10 =$ _____	24	$120 \div 10 =$ _____	44	$20 \div 10 =$ _____
5	$50 \div 10 =$ _____	25	$50 \div 10 =$ _____	45	$60 \div 10 =$ _____
6	$120 \div 10 =$ _____	26	$60 \div 10 =$ _____	46	$60 \div 10 =$ _____
7	$110 \div 10 =$ _____	27	$30 \div 10 =$ _____	47	$10 \div 10 =$ _____
8	$50 \div 10 =$ _____	28	$80 \div 10 =$ _____	48	$120 \div 10 =$ _____
9	$60 \div 10 =$ _____	29	$60 \div 10 =$ _____	49	$50 \div 10 =$ _____
10	$100 \div 10 =$ _____	30	$20 \div 10 =$ _____	50	$80 \div 10 =$ _____
11	$10 \div 10 =$ _____	31	$60 \div 10 =$ _____	51	$50 \div 10 =$ _____
12	$100 \div 10 =$ _____	32	$20 \div 10 =$ _____	52	$30 \div 10 =$ _____
13	$100 \div 10 =$ _____	33	$40 \div 10 =$ _____	53	$40 \div 10 =$ _____
14	$30 \div 10 =$ _____	34	$110 \div 10 =$ _____	54	$30 \div 10 =$ _____
15	$10 \div 10 =$ _____	35	$30 \div 10 =$ _____	55	$60 \div 10 =$ _____
16	$120 \div 10 =$ _____	36	$10 \div 10 =$ _____	56	$90 \div 10 =$ _____
17	$50 \div 10 =$ _____	37	$20 \div 10 =$ _____	57	$90 \div 10 =$ _____
18	$90 \div 10 =$ _____	38	$90 \div 10 =$ _____	58	$70 \div 10 =$ _____
19	$10 \div 10 =$ _____	39	$20 \div 10 =$ _____	59	$80 \div 10 =$ _____
20	$70 \div 10 =$ _____	40	$100 \div 10 =$ _____	60	$50 \div 10 =$ _____

Time taken

:

🕒 3 minute time limit 🕒

Score

60

What's your rock status?

WANNABE

< 18 correct in 3 mins

GARAGE ROCKER

18-19 correct in 3 mins

BUSKER

20-21 correct in 3 mins

GIGGER

22-24 correct in 3 mins

UNSIGNED ACT

25-29 correct in 3 mins

BREAKTHROUGH ARTIST

30-35 correct in 3 mins

SUPPORT ACT

36-44 correct in 3 mins

HEADLINER

45-59 correct in 3 mins

ROCK STAR

All correct in \leq 3mins

ROCK LEGEND

All correct in \leq 2min

ROCK HERO

All correct in \leq 1 min

**TIMES TABLES
ROCK STARS**

Name: _____

Week 19 Session 3

2020-21

2s 5s and 10s

3 a week

Times Tables Rock Stars

10 Times Tables

Licensed to Weston Point Primary School, Runcorn

1	$10 \times 9 =$ _____	21	$10 \times 5 =$ _____	41	$30 \div 10 =$ _____
2	$10 \times 9 =$ _____	22	$10 \times 8 =$ _____	42	$120 \div 10 =$ _____
3	$10 \times 7 =$ _____	23	$10 \times 11 =$ _____	43	$90 \div 10 =$ _____
4	$10 \times 3 =$ _____	24	$10 \times 7 =$ _____	44	$90 \div 10 =$ _____
5	$10 \times 9 =$ _____	25	$10 \times 1 =$ _____	45	$10 \div 10 =$ _____
6	$10 \times 9 =$ _____	26	$10 \times 2 =$ _____	46	$100 \div 10 =$ _____
7	$10 \times 10 =$ _____	27	$10 \times 3 =$ _____	47	$50 \div 10 =$ _____
8	$10 \times 9 =$ _____	28	$10 \times 3 =$ _____	48	$60 \div 10 =$ _____
9	$10 \times 5 =$ _____	29	$10 \times 4 =$ _____	49	$120 \div 10 =$ _____
10	$10 \times 11 =$ _____	30	$10 \times 2 =$ _____	50	$10 \div 10 =$ _____
11	$10 \times 9 =$ _____	31	$70 \div 10 =$ _____	51	$60 \div 10 =$ _____
12	$10 \times 11 =$ _____	32	$70 \div 10 =$ _____	52	$120 \div 10 =$ _____
13	$10 \times 4 =$ _____	33	$30 \div 10 =$ _____	53	$60 \div 10 =$ _____
14	$10 \times 1 =$ _____	34	$10 \div 10 =$ _____	54	$70 \div 10 =$ _____
15	$10 \times 1 =$ _____	35	$70 \div 10 =$ _____	55	$120 \div 10 =$ _____
16	$10 \times 9 =$ _____	36	$70 \div 10 =$ _____	56	$80 \div 10 =$ _____
17	$10 \times 9 =$ _____	37	$100 \div 10 =$ _____	57	$50 \div 10 =$ _____
18	$10 \times 2 =$ _____	38	$110 \div 10 =$ _____	58	$20 \div 10 =$ _____
19	$10 \times 2 =$ _____	39	$20 \div 10 =$ _____	59	$110 \div 10 =$ _____
20	$10 \times 12 =$ _____	40	$30 \div 10 =$ _____	60	$70 \div 10 =$ _____

Time taken

:

🕒 3 minute time limit 🕒

Score

60

Add up your time

Mins

S1 _____

S2 _____

S3 _____

Total _____

Secs

S1 _____

S2 _____

S3 _____

Total _____

Add up your score

S1 _____

S2 _____

S3 _____

Total _____

Name: _____

Week 20 Session 1

2020-21

2s 5s and 10s

3 a week

Times Tables Rock Stars

2,5,10 Times Tables

Licensed to Weston Point Primary School, Runcorn

1	$10 \times 5 =$ _____	21	$2 \times 8 =$ _____	41	$7 \times 10 =$ _____
2	$5 \times 7 =$ _____	22	$10 \times 1 =$ _____	42	$2 \times 2 =$ _____
3	$10 \times 6 =$ _____	23	$10 \times 1 =$ _____	43	$5 \times 5 =$ _____
4	$2 \times 8 =$ _____	24	$10 \times 11 =$ _____	44	$6 \times 2 =$ _____
5	$10 \times 1 =$ _____	25	$5 \times 9 =$ _____	45	$9 \times 2 =$ _____
6	$10 \times 10 =$ _____	26	$2 \times 7 =$ _____	46	$9 \times 5 =$ _____
7	$5 \times 8 =$ _____	27	$2 \times 3 =$ _____	47	$4 \times 5 =$ _____
8	$2 \times 1 =$ _____	28	$5 \times 9 =$ _____	48	$10 \times 2 =$ _____
9	$10 \times 11 =$ _____	29	$5 \times 11 =$ _____	49	$12 \times 5 =$ _____
10	$2 \times 9 =$ _____	30	$5 \times 3 =$ _____	50	$7 \times 5 =$ _____
11	$2 \times 1 =$ _____	31	$8 \times 10 =$ _____	51	$8 \times 5 =$ _____
12	$5 \times 7 =$ _____	32	$2 \times 10 =$ _____	52	$1 \times 10 =$ _____
13	$5 \times 3 =$ _____	33	$7 \times 2 =$ _____	53	$2 \times 2 =$ _____
14	$10 \times 7 =$ _____	34	$3 \times 10 =$ _____	54	$12 \times 5 =$ _____
15	$5 \times 7 =$ _____	35	$5 \times 2 =$ _____	55	$7 \times 2 =$ _____
16	$10 \times 11 =$ _____	36	$2 \times 10 =$ _____	56	$6 \times 5 =$ _____
17	$2 \times 12 =$ _____	37	$12 \times 2 =$ _____	57	$9 \times 2 =$ _____
18	$2 \times 12 =$ _____	38	$4 \times 2 =$ _____	58	$2 \times 5 =$ _____
19	$5 \times 3 =$ _____	39	$2 \times 5 =$ _____	59	$9 \times 5 =$ _____
20	$2 \times 9 =$ _____	40	$10 \times 5 =$ _____	60	$10 \times 10 =$ _____

Time taken

:

🕒 3 minute time limit 🕒

Score

60

What's your rock status?

WANNABE

< 18 correct in 3 mins

GARAGE ROCKER

18-19 correct in 3 mins

BUSKER

20-21 correct in 3 mins

GIGGER

22-24 correct in 3 mins

UNSIGNED ACT

25-29 correct in 3 mins

BREAKTHROUGH ARTIST

30-35 correct in 3 mins

SUPPORT ACT

36-44 correct in 3 mins

HEADLINER

45-59 correct in 3 mins

ROCK STAR

All correct in \leq 3mins

ROCK LEGEND

All correct in \leq 2min

ROCK HERO

All correct in \leq 1 min

**TIMES TABLES
ROCK STARS**

Name: _____

Week 20 Session 2

2020-21

2s 5s and 10s

3 a week

Times Tables Rock Stars

2,5,10 Times Tables

Licensed to Weston Point Primary School, Runcorn

1	$25 \div 5 =$ _____	21	$35 \div 5 =$ _____	41	$90 \div 10 =$ _____
2	$20 \div 10 =$ _____	22	$16 \div 2 =$ _____	42	$6 \div 2 =$ _____
3	$10 \div 2 =$ _____	23	$24 \div 2 =$ _____	43	$40 \div 10 =$ _____
4	$35 \div 5 =$ _____	24	$24 \div 2 =$ _____	44	$4 \div 2 =$ _____
5	$80 \div 10 =$ _____	25	$16 \div 2 =$ _____	45	$10 \div 10 =$ _____
6	$55 \div 5 =$ _____	26	$20 \div 5 =$ _____	46	$120 \div 10 =$ _____
7	$40 \div 10 =$ _____	27	$50 \div 10 =$ _____	47	$60 \div 5 =$ _____
8	$55 \div 5 =$ _____	28	$5 \div 5 =$ _____	48	$5 \div 5 =$ _____
9	$25 \div 5 =$ _____	29	$90 \div 10 =$ _____	49	$90 \div 10 =$ _____
10	$50 \div 10 =$ _____	30	$25 \div 5 =$ _____	50	$25 \div 5 =$ _____
11	$6 \div 2 =$ _____	31	$70 \div 10 =$ _____	51	$70 \div 10 =$ _____
12	$22 \div 2 =$ _____	32	$4 \div 2 =$ _____	52	$120 \div 10 =$ _____
13	$55 \div 5 =$ _____	33	$30 \div 10 =$ _____	53	$60 \div 10 =$ _____
14	$80 \div 10 =$ _____	34	$4 \div 2 =$ _____	54	$24 \div 2 =$ _____
15	$20 \div 10 =$ _____	35	$110 \div 10 =$ _____	55	$90 \div 10 =$ _____
16	$16 \div 2 =$ _____	36	$20 \div 10 =$ _____	56	$16 \div 2 =$ _____
17	$24 \div 2 =$ _____	37	$20 \div 5 =$ _____	57	$15 \div 5 =$ _____
18	$16 \div 2 =$ _____	38	$100 \div 10 =$ _____	58	$20 \div 2 =$ _____
19	$35 \div 5 =$ _____	39	$50 \div 5 =$ _____	59	$12 \div 2 =$ _____
20	$6 \div 2 =$ _____	40	$55 \div 5 =$ _____	60	$55 \div 5 =$ _____

Time taken

:

🕒 3 minute time limit 🕒

Score

60

What's your rock status?

WANNABE

< 18 correct in 3 mins

GARAGE ROCKER

18-19 correct in 3 mins

BUSKER

20-21 correct in 3 mins

GIGGER

22-24 correct in 3 mins

UNSIGNED ACT

25-29 correct in 3 mins

BREAKTHROUGH ARTIST

30-35 correct in 3 mins

SUPPORT ACT

36-44 correct in 3 mins

HEADLINER

45-59 correct in 3 mins

ROCK STAR

All correct in \leq 3mins

ROCK LEGEND

All correct in \leq 2min

ROCK HERO

All correct in \leq 1 min

**TIMES TABLES
ROCK STARS**

Name: _____

Week 20 Session 3

2020-21

2s 5s and 10s

3 a week

Times Tables Rock Stars

2,5,10 Times Tables

Licensed to Weston Point Primary School, Runcorn

1	$5 \times 7 =$ _____	21	$10 \times 11 =$ _____	41	$90 \div 10 =$ _____
2	$2 \times 12 =$ _____	22	$2 \times 10 =$ _____	42	$10 \div 2 =$ _____
3	$10 \times 2 =$ _____	23	$2 \times 10 =$ _____	43	$60 \div 5 =$ _____
4	$2 \times 12 =$ _____	24	$2 \times 12 =$ _____	44	$35 \div 5 =$ _____
5	$10 \times 2 =$ _____	25	$10 \times 3 =$ _____	45	$55 \div 5 =$ _____
6	$5 \times 12 =$ _____	26	$10 \times 2 =$ _____	46	$24 \div 2 =$ _____
7	$2 \times 4 =$ _____	27	$10 \times 7 =$ _____	47	$45 \div 5 =$ _____
8	$10 \times 3 =$ _____	28	$10 \times 3 =$ _____	48	$35 \div 5 =$ _____
9	$2 \times 3 =$ _____	29	$5 \times 11 =$ _____	49	$20 \div 2 =$ _____
10	$2 \times 1 =$ _____	30	$5 \times 2 =$ _____	50	$20 \div 10 =$ _____
11	$10 \times 9 =$ _____	31	$50 \div 10 =$ _____	51	$16 \div 2 =$ _____
12	$2 \times 10 =$ _____	32	$20 \div 2 =$ _____	52	$55 \div 5 =$ _____
13	$2 \times 6 =$ _____	33	$100 \div 10 =$ _____	53	$16 \div 2 =$ _____
14	$5 \times 1 =$ _____	34	$10 \div 2 =$ _____	54	$55 \div 5 =$ _____
15	$10 \times 12 =$ _____	35	$18 \div 2 =$ _____	55	$6 \div 2 =$ _____
16	$10 \times 12 =$ _____	36	$24 \div 2 =$ _____	56	$70 \div 10 =$ _____
17	$5 \times 3 =$ _____	37	$4 \div 2 =$ _____	57	$40 \div 5 =$ _____
18	$2 \times 12 =$ _____	38	$20 \div 2 =$ _____	58	$35 \div 5 =$ _____
19	$10 \times 2 =$ _____	39	$45 \div 5 =$ _____	59	$10 \div 5 =$ _____
20	$10 \times 5 =$ _____	40	$60 \div 5 =$ _____	60	$30 \div 10 =$ _____

Time taken

:

🕒 3 minute time limit 🕒

Score

60

Add up your time

Mins

S1 _____

S2 _____

S3 _____

Total _____

Secs

S1 _____

S2 _____

S3 _____

Total _____

Add up your score

S1 _____

S2 _____

S3 _____

Total _____

Name: _____

Week 21 Session 1

2020-21

2s 5s and 10s

3 a week

Times Tables Rock Stars

2,5,10 Times Tables

Licensed to Weston Point Primary School, Runcorn

1	$2 \times 5 =$ _____	21	$5 \times 6 =$ _____	41	$7 \times 10 =$ _____
2	$5 \times 5 =$ _____	22	$5 \times 3 =$ _____	42	$3 \times 2 =$ _____
3	$10 \times 5 =$ _____	23	$5 \times 6 =$ _____	43	$5 \times 5 =$ _____
4	$10 \times 11 =$ _____	24	$2 \times 6 =$ _____	44	$6 \times 2 =$ _____
5	$2 \times 3 =$ _____	25	$5 \times 1 =$ _____	45	$9 \times 2 =$ _____
6	$10 \times 8 =$ _____	26	$2 \times 9 =$ _____	46	$1 \times 2 =$ _____
7	$10 \times 9 =$ _____	27	$2 \times 3 =$ _____	47	$8 \times 5 =$ _____
8	$2 \times 10 =$ _____	28	$5 \times 3 =$ _____	48	$7 \times 5 =$ _____
9	$2 \times 3 =$ _____	29	$10 \times 6 =$ _____	49	$7 \times 5 =$ _____
10	$2 \times 3 =$ _____	30	$10 \times 7 =$ _____	50	$2 \times 10 =$ _____
11	$2 \times 10 =$ _____	31	$5 \times 2 =$ _____	51	$7 \times 2 =$ _____
12	$5 \times 2 =$ _____	32	$1 \times 5 =$ _____	52	$1 \times 5 =$ _____
13	$10 \times 1 =$ _____	33	$6 \times 10 =$ _____	53	$10 \times 2 =$ _____
14	$10 \times 1 =$ _____	34	$7 \times 5 =$ _____	54	$10 \times 10 =$ _____
15	$5 \times 12 =$ _____	35	$12 \times 10 =$ _____	55	$5 \times 5 =$ _____
16	$10 \times 11 =$ _____	36	$6 \times 10 =$ _____	56	$9 \times 10 =$ _____
17	$2 \times 12 =$ _____	37	$1 \times 2 =$ _____	57	$8 \times 2 =$ _____
18	$5 \times 1 =$ _____	38	$7 \times 2 =$ _____	58	$5 \times 10 =$ _____
19	$2 \times 9 =$ _____	39	$12 \times 5 =$ _____	59	$12 \times 10 =$ _____
20	$5 \times 4 =$ _____	40	$6 \times 5 =$ _____	60	$5 \times 2 =$ _____

Time taken

:

🕒 3 minute time limit 🕒

Score

60

What's your rock status?

WANNABE

< 18 correct in 3 mins

GARAGE ROCKER

18-19 correct in 3 mins

BUSKER

20-21 correct in 3 mins

GIGGER

22-24 correct in 3 mins

UNSIGNED ACT

25-29 correct in 3 mins

BREAKTHROUGH ARTIST

30-35 correct in 3 mins

SUPPORT ACT

36-44 correct in 3 mins

HEADLINER

45-59 correct in 3 mins

ROCK STAR

All correct in \leq 3mins

ROCK LEGEND

All correct in \leq 2min

ROCK HERO

All correct in \leq 1 min

**TIMES TABLES
ROCK STARS**

Name: _____

Week 21 Session 2

2020-21

2s 5s and 10s

3 a week

Times Tables Rock Stars

2,5,10 Times Tables

Licensed to Weston Point Primary School, Runcorn

1	$40 \div 5 =$ _____	21	$16 \div 2 =$ _____	41	$100 \div 10 =$ _____
2	$22 \div 2 =$ _____	22	$35 \div 5 =$ _____	42	$40 \div 5 =$ _____
3	$40 \div 5 =$ _____	23	$35 \div 5 =$ _____	43	$10 \div 10 =$ _____
4	$70 \div 10 =$ _____	24	$55 \div 5 =$ _____	44	$10 \div 2 =$ _____
5	$24 \div 2 =$ _____	25	$22 \div 2 =$ _____	45	$25 \div 5 =$ _____
6	$4 \div 2 =$ _____	26	$18 \div 2 =$ _____	46	$18 \div 2 =$ _____
7	$120 \div 10 =$ _____	27	$10 \div 5 =$ _____	47	$110 \div 10 =$ _____
8	$10 \div 10 =$ _____	28	$16 \div 2 =$ _____	48	$30 \div 10 =$ _____
9	$45 \div 5 =$ _____	29	$15 \div 5 =$ _____	49	$2 \div 2 =$ _____
10	$50 \div 5 =$ _____	30	$25 \div 5 =$ _____	50	$50 \div 10 =$ _____
11	$70 \div 10 =$ _____	31	$10 \div 10 =$ _____	51	$8 \div 2 =$ _____
12	$70 \div 10 =$ _____	32	$20 \div 2 =$ _____	52	$60 \div 10 =$ _____
13	$90 \div 10 =$ _____	33	$35 \div 5 =$ _____	53	$5 \div 5 =$ _____
14	$60 \div 5 =$ _____	34	$90 \div 10 =$ _____	54	$15 \div 5 =$ _____
15	$70 \div 10 =$ _____	35	$6 \div 2 =$ _____	55	$100 \div 10 =$ _____
16	$20 \div 5 =$ _____	36	$10 \div 10 =$ _____	56	$25 \div 5 =$ _____
17	$10 \div 2 =$ _____	37	$16 \div 2 =$ _____	57	$10 \div 10 =$ _____
18	$120 \div 10 =$ _____	38	$60 \div 5 =$ _____	58	$70 \div 10 =$ _____
19	$100 \div 10 =$ _____	39	$40 \div 10 =$ _____	59	$70 \div 10 =$ _____
20	$120 \div 10 =$ _____	40	$16 \div 2 =$ _____	60	$55 \div 5 =$ _____

Time taken

:

🕒 3 minute time limit 🕒

Score

60

What's your rock status?

WANNABE

< 18 correct in 3 mins

GARAGE ROCKER

18-19 correct in 3 mins

BUSKER

20-21 correct in 3 mins

GIGGER

22-24 correct in 3 mins

UNSIGNED ACT

25-29 correct in 3 mins

BREAKTHROUGH ARTIST

30-35 correct in 3 mins

SUPPORT ACT

36-44 correct in 3 mins

HEADLINER

45-59 correct in 3 mins

ROCK STAR

All correct in \leq 3mins

ROCK LEGEND

All correct in \leq 2min

ROCK HERO

All correct in \leq 1 min

**TIMES TABLES
ROCK STARS**

Name: _____

Week 21 Session 3

2020-21

2s 5s and 10s

3 a week

Times Tables Rock Stars

2,5,10 Times Tables

Licensed to Weston Point Primary School, Runcorn

1	$10 \times 1 =$ _____	21	$10 \times 2 =$ _____	41	$5 \div 5 =$ _____
2	$5 \times 10 =$ _____	22	$5 \times 9 =$ _____	42	$30 \div 5 =$ _____
3	$2 \times 9 =$ _____	23	$2 \times 5 =$ _____	43	$6 \div 2 =$ _____
4	$2 \times 3 =$ _____	24	$5 \times 11 =$ _____	44	$10 \div 2 =$ _____
5	$10 \times 5 =$ _____	25	$2 \times 8 =$ _____	45	$20 \div 10 =$ _____
6	$10 \times 5 =$ _____	26	$5 \times 9 =$ _____	46	$10 \div 2 =$ _____
7	$2 \times 3 =$ _____	27	$10 \times 9 =$ _____	47	$15 \div 5 =$ _____
8	$2 \times 9 =$ _____	28	$5 \times 9 =$ _____	48	$10 \div 5 =$ _____
9	$10 \times 7 =$ _____	29	$5 \times 3 =$ _____	49	$10 \div 5 =$ _____
10	$5 \times 12 =$ _____	30	$2 \times 6 =$ _____	50	$45 \div 5 =$ _____
11	$10 \times 1 =$ _____	31	$110 \div 10 =$ _____	51	$30 \div 10 =$ _____
12	$2 \times 9 =$ _____	32	$10 \div 5 =$ _____	52	$20 \div 5 =$ _____
13	$10 \times 9 =$ _____	33	$22 \div 2 =$ _____	53	$30 \div 10 =$ _____
14	$5 \times 7 =$ _____	34	$15 \div 5 =$ _____	54	$50 \div 5 =$ _____
15	$5 \times 1 =$ _____	35	$10 \div 5 =$ _____	55	$120 \div 10 =$ _____
16	$5 \times 3 =$ _____	36	$22 \div 2 =$ _____	56	$4 \div 2 =$ _____
17	$10 \times 5 =$ _____	37	$5 \div 5 =$ _____	57	$18 \div 2 =$ _____
18	$10 \times 4 =$ _____	38	$30 \div 10 =$ _____	58	$12 \div 2 =$ _____
19	$10 \times 9 =$ _____	39	$30 \div 5 =$ _____	59	$110 \div 10 =$ _____
20	$10 \times 9 =$ _____	40	$4 \div 2 =$ _____	60	$16 \div 2 =$ _____

Time taken

:

🕒 3 minute time limit 🕒

Score

60

Add up your time

Mins

S1 _____

S2 _____

S3 _____

Total _____

Secs

S1 _____

S2 _____

S3 _____

Total _____

Add up your score

S1 _____

S2 _____

S3 _____

Total _____

Name: _____

Week 22 Session 1

2020-21

2s 5s and 10s

3 a week

Times Tables Rock Stars

2,5,10 Times Tables

Licensed to Weston Point Primary School, Runcorn

1	$5 \times 9 =$ _____	21	$2 \times 12 =$ _____	41	$8 \times 5 =$ _____
2	$5 \times 10 =$ _____	22	$2 \times 1 =$ _____	42	$8 \times 5 =$ _____
3	$2 \times 9 =$ _____	23	$2 \times 4 =$ _____	43	$11 \times 2 =$ _____
4	$5 \times 12 =$ _____	24	$5 \times 9 =$ _____	44	$3 \times 5 =$ _____
5	$10 \times 1 =$ _____	25	$2 \times 11 =$ _____	45	$4 \times 10 =$ _____
6	$2 \times 6 =$ _____	26	$5 \times 11 =$ _____	46	$6 \times 5 =$ _____
7	$10 \times 11 =$ _____	27	$10 \times 4 =$ _____	47	$12 \times 2 =$ _____
8	$2 \times 10 =$ _____	28	$10 \times 10 =$ _____	48	$10 \times 2 =$ _____
9	$2 \times 12 =$ _____	29	$5 \times 2 =$ _____	49	$8 \times 2 =$ _____
10	$10 \times 9 =$ _____	30	$5 \times 7 =$ _____	50	$10 \times 10 =$ _____
11	$10 \times 7 =$ _____	31	$6 \times 2 =$ _____	51	$1 \times 2 =$ _____
12	$10 \times 9 =$ _____	32	$12 \times 5 =$ _____	52	$4 \times 5 =$ _____
13	$10 \times 5 =$ _____	33	$6 \times 5 =$ _____	53	$9 \times 10 =$ _____
14	$2 \times 12 =$ _____	34	$9 \times 5 =$ _____	54	$3 \times 2 =$ _____
15	$5 \times 6 =$ _____	35	$10 \times 2 =$ _____	55	$9 \times 2 =$ _____
16	$2 \times 5 =$ _____	36	$4 \times 2 =$ _____	56	$10 \times 2 =$ _____
17	$10 \times 4 =$ _____	37	$9 \times 10 =$ _____	57	$7 \times 10 =$ _____
18	$2 \times 9 =$ _____	38	$11 \times 5 =$ _____	58	$5 \times 2 =$ _____
19	$2 \times 12 =$ _____	39	$3 \times 5 =$ _____	59	$9 \times 10 =$ _____
20	$10 \times 1 =$ _____	40	$1 \times 5 =$ _____	60	$2 \times 2 =$ _____

Time taken

:

🕒 3 minute time limit 🕒

Score

60

What's your rock status?

WANNABE

< 18 correct in 3 mins

GARAGE ROCKER

18-19 correct in 3 mins

BUSKER

20-21 correct in 3 mins

GIGGER

22-24 correct in 3 mins

UNSIGNED ACT

25-29 correct in 3 mins

BREAKTHROUGH ARTIST

30-35 correct in 3 mins

SUPPORT ACT

36-44 correct in 3 mins

HEADLINER

45-59 correct in 3 mins

ROCK STAR

All correct in \leq 3mins

ROCK LEGEND

All correct in \leq 2min

ROCK HERO

All correct in \leq 1 min

**TIMES TABLES
ROCK STARS**

Name: _____

Week 22 Session 2

2020-21

2s 5s and 10s

3 a week

Times Tables Rock Stars

2,5,10 Times Tables

Licensed to Weston Point Primary School, Runcorn

1	$120 \div 10 =$ _____	21	$20 \div 5 =$ _____	41	$4 \div 2 =$ _____
2	$35 \div 5 =$ _____	22	$35 \div 5 =$ _____	42	$70 \div 10 =$ _____
3	$2 \div 2 =$ _____	23	$10 \div 10 =$ _____	43	$20 \div 10 =$ _____
4	$50 \div 5 =$ _____	24	$10 \div 10 =$ _____	44	$30 \div 5 =$ _____
5	$90 \div 10 =$ _____	25	$60 \div 5 =$ _____	45	$90 \div 10 =$ _____
6	$4 \div 2 =$ _____	26	$60 \div 10 =$ _____	46	$50 \div 10 =$ _____
7	$18 \div 2 =$ _____	27	$2 \div 2 =$ _____	47	$40 \div 10 =$ _____
8	$14 \div 2 =$ _____	28	$10 \div 10 =$ _____	48	$70 \div 10 =$ _____
9	$90 \div 10 =$ _____	29	$90 \div 10 =$ _____	49	$8 \div 2 =$ _____
10	$60 \div 10 =$ _____	30	$70 \div 10 =$ _____	50	$22 \div 2 =$ _____
11	$30 \div 5 =$ _____	31	$10 \div 10 =$ _____	51	$10 \div 10 =$ _____
12	$10 \div 5 =$ _____	32	$12 \div 2 =$ _____	52	$60 \div 5 =$ _____
13	$12 \div 2 =$ _____	33	$120 \div 10 =$ _____	53	$30 \div 5 =$ _____
14	$4 \div 2 =$ _____	34	$20 \div 5 =$ _____	54	$24 \div 2 =$ _____
15	$22 \div 2 =$ _____	35	$100 \div 10 =$ _____	55	$50 \div 10 =$ _____
16	$120 \div 10 =$ _____	36	$5 \div 5 =$ _____	56	$10 \div 2 =$ _____
17	$25 \div 5 =$ _____	37	$10 \div 5 =$ _____	57	$70 \div 10 =$ _____
18	$24 \div 2 =$ _____	38	$20 \div 5 =$ _____	58	$120 \div 10 =$ _____
19	$10 \div 5 =$ _____	39	$4 \div 2 =$ _____	59	$18 \div 2 =$ _____
20	$60 \div 5 =$ _____	40	$10 \div 5 =$ _____	60	$110 \div 10 =$ _____

Time taken

:

🕒 3 minute time limit 🕒

Score

60

What's your rock status?

WANNABE

< 18 correct in 3 mins

GARAGE ROCKER

18-19 correct in 3 mins

BUSKER

20-21 correct in 3 mins

GIGGER

22-24 correct in 3 mins

UNSIGNED ACT

25-29 correct in 3 mins

BREAKTHROUGH ARTIST

30-35 correct in 3 mins

SUPPORT ACT

36-44 correct in 3 mins

HEADLINER

45-59 correct in 3 mins

ROCK STAR

All correct in \leq 3mins

ROCK LEGEND

All correct in \leq 2min

ROCK HERO

All correct in \leq 1 min

**TIMES TABLES
ROCK STARS**

Name: _____

Week 22 Session 3

2020-21

2s 5s and 10s

3 a week

Times Tables Rock Stars

2,5,10 Times Tables

Licensed to Weston Point Primary School, Runcorn

1	$2 \times 12 =$ _____	21	$5 \times 9 =$ _____	41	$20 \div 2 =$ _____
2	$10 \times 5 =$ _____	22	$2 \times 12 =$ _____	42	$2 \div 2 =$ _____
3	$2 \times 7 =$ _____	23	$2 \times 5 =$ _____	43	$50 \div 10 =$ _____
4	$5 \times 3 =$ _____	24	$2 \times 10 =$ _____	44	$15 \div 5 =$ _____
5	$2 \times 1 =$ _____	25	$2 \times 1 =$ _____	45	$60 \div 5 =$ _____
6	$10 \times 4 =$ _____	26	$10 \times 9 =$ _____	46	$80 \div 10 =$ _____
7	$5 \times 7 =$ _____	27	$10 \times 2 =$ _____	47	$120 \div 10 =$ _____
8	$2 \times 11 =$ _____	28	$5 \times 12 =$ _____	48	$10 \div 2 =$ _____
9	$5 \times 7 =$ _____	29	$5 \times 7 =$ _____	49	$40 \div 5 =$ _____
10	$2 \times 9 =$ _____	30	$10 \times 4 =$ _____	50	$5 \div 5 =$ _____
11	$2 \times 11 =$ _____	31	$22 \div 2 =$ _____	51	$90 \div 10 =$ _____
12	$10 \times 6 =$ _____	32	$70 \div 10 =$ _____	52	$110 \div 10 =$ _____
13	$10 \times 6 =$ _____	33	$60 \div 10 =$ _____	53	$20 \div 2 =$ _____
14	$5 \times 6 =$ _____	34	$30 \div 5 =$ _____	54	$110 \div 10 =$ _____
15	$5 \times 5 =$ _____	35	$70 \div 10 =$ _____	55	$14 \div 2 =$ _____
16	$5 \times 12 =$ _____	36	$15 \div 5 =$ _____	56	$70 \div 10 =$ _____
17	$10 \times 10 =$ _____	37	$6 \div 2 =$ _____	57	$30 \div 5 =$ _____
18	$10 \times 3 =$ _____	38	$10 \div 10 =$ _____	58	$4 \div 2 =$ _____
19	$5 \times 11 =$ _____	39	$10 \div 10 =$ _____	59	$18 \div 2 =$ _____
20	$2 \times 8 =$ _____	40	$60 \div 5 =$ _____	60	$6 \div 2 =$ _____

Time taken

:

🕒 3 minute time limit 🕒

Score

60

Add up your time

Mins	
S1	_____
S2	_____
S3	_____
Total	_____

Secs	
S1	_____
S2	_____
S3	_____
Total	_____

Add up your score	
S1	_____
S2	_____
S3	_____
Total	_____

Name: _____

Week 23 Session 1

2020-21

2s 5s and 10s

3 a week

Times Tables Rock Stars

2 Times Tables

Licensed to Weston Point Primary School, Runcorn

1	$2 \times 5 =$ _____	21	$2 \times 4 =$ _____	41	$6 \times 2 =$ _____
2	$2 \times 11 =$ _____	22	$2 \times 12 =$ _____	42	$12 \times 2 =$ _____
3	$2 \times 9 =$ _____	23	$2 \times 11 =$ _____	43	$9 \times 2 =$ _____
4	$2 \times 8 =$ _____	24	$2 \times 6 =$ _____	44	$6 \times 2 =$ _____
5	$2 \times 12 =$ _____	25	$2 \times 9 =$ _____	45	$8 \times 2 =$ _____
6	$2 \times 10 =$ _____	26	$2 \times 1 =$ _____	46	$11 \times 2 =$ _____
7	$2 \times 7 =$ _____	27	$2 \times 6 =$ _____	47	$10 \times 2 =$ _____
8	$2 \times 1 =$ _____	28	$2 \times 12 =$ _____	48	$12 \times 2 =$ _____
9	$2 \times 6 =$ _____	29	$2 \times 11 =$ _____	49	$7 \times 2 =$ _____
10	$2 \times 1 =$ _____	30	$2 \times 9 =$ _____	50	$8 \times 2 =$ _____
11	$2 \times 8 =$ _____	31	$7 \times 2 =$ _____	51	$5 \times 2 =$ _____
12	$2 \times 10 =$ _____	32	$3 \times 2 =$ _____	52	$9 \times 2 =$ _____
13	$2 \times 11 =$ _____	33	$11 \times 2 =$ _____	53	$6 \times 2 =$ _____
14	$2 \times 11 =$ _____	34	$7 \times 2 =$ _____	54	$7 \times 2 =$ _____
15	$2 \times 12 =$ _____	35	$7 \times 2 =$ _____	55	$9 \times 2 =$ _____
16	$2 \times 8 =$ _____	36	$11 \times 2 =$ _____	56	$6 \times 2 =$ _____
17	$2 \times 2 =$ _____	37	$10 \times 2 =$ _____	57	$3 \times 2 =$ _____
18	$2 \times 11 =$ _____	38	$4 \times 2 =$ _____	58	$4 \times 2 =$ _____
19	$2 \times 3 =$ _____	39	$10 \times 2 =$ _____	59	$5 \times 2 =$ _____
20	$2 \times 1 =$ _____	40	$8 \times 2 =$ _____	60	$1 \times 2 =$ _____

Time taken

:

🕒 3 minute time limit 🕒

Score

60

What's your rock status?

WANNABE

< 18 correct in 3 mins

GARAGE ROCKER

18-19 correct in 3 mins

BUSKER

20-21 correct in 3 mins

GIGGER

22-24 correct in 3 mins

UNSIGNED ACT

25-29 correct in 3 mins

BREAKTHROUGH ARTIST

30-35 correct in 3 mins

SUPPORT ACT

36-44 correct in 3 mins

HEADLINER

45-59 correct in 3 mins

ROCK STAR

All correct in \leq 3mins

ROCK LEGEND

All correct in \leq 2min

ROCK HERO

All correct in \leq 1 min

**TIMES TABLES
ROCK STARS**

Name: _____

Week 23 Session 2

2020-21

2s 5s and 10s

3 a week

Times Tables Rock Stars

2 Times Tables

Licensed to Weston Point Primary School, Runcorn

1	$22 \div 2 =$ _____	21	$14 \div 2 =$ _____	41	$4 \div 2 =$ _____
2	$10 \div 2 =$ _____	22	$14 \div 2 =$ _____	42	$10 \div 2 =$ _____
3	$24 \div 2 =$ _____	23	$4 \div 2 =$ _____	43	$4 \div 2 =$ _____
4	$8 \div 2 =$ _____	24	$14 \div 2 =$ _____	44	$20 \div 2 =$ _____
5	$8 \div 2 =$ _____	25	$10 \div 2 =$ _____	45	$4 \div 2 =$ _____
6	$2 \div 2 =$ _____	26	$16 \div 2 =$ _____	46	$24 \div 2 =$ _____
7	$18 \div 2 =$ _____	27	$22 \div 2 =$ _____	47	$18 \div 2 =$ _____
8	$20 \div 2 =$ _____	28	$14 \div 2 =$ _____	48	$2 \div 2 =$ _____
9	$20 \div 2 =$ _____	29	$2 \div 2 =$ _____	49	$22 \div 2 =$ _____
10	$18 \div 2 =$ _____	30	$12 \div 2 =$ _____	50	$20 \div 2 =$ _____
11	$4 \div 2 =$ _____	31	$4 \div 2 =$ _____	51	$22 \div 2 =$ _____
12	$10 \div 2 =$ _____	32	$10 \div 2 =$ _____	52	$2 \div 2 =$ _____
13	$8 \div 2 =$ _____	33	$6 \div 2 =$ _____	53	$4 \div 2 =$ _____
14	$8 \div 2 =$ _____	34	$16 \div 2 =$ _____	54	$24 \div 2 =$ _____
15	$16 \div 2 =$ _____	35	$6 \div 2 =$ _____	55	$20 \div 2 =$ _____
16	$16 \div 2 =$ _____	36	$14 \div 2 =$ _____	56	$6 \div 2 =$ _____
17	$22 \div 2 =$ _____	37	$16 \div 2 =$ _____	57	$2 \div 2 =$ _____
18	$10 \div 2 =$ _____	38	$24 \div 2 =$ _____	58	$8 \div 2 =$ _____
19	$16 \div 2 =$ _____	39	$18 \div 2 =$ _____	59	$18 \div 2 =$ _____
20	$24 \div 2 =$ _____	40	$14 \div 2 =$ _____	60	$14 \div 2 =$ _____

Time taken

:

🕒 3 minute time limit 🕒

Score

60

What's your rock status?

WANNABE

< 18 correct in 3 mins

GARAGE ROCKER

18-19 correct in 3 mins

BUSKER

20-21 correct in 3 mins

GIGGER

22-24 correct in 3 mins

UNSIGNED ACT

25-29 correct in 3 mins

BREAKTHROUGH ARTIST

30-35 correct in 3 mins

SUPPORT ACT

36-44 correct in 3 mins

HEADLINER

45-59 correct in 3 mins

ROCK STAR

All correct in \leq 3mins

ROCK LEGEND

All correct in \leq 2min

ROCK HERO

All correct in \leq 1 min

**TIMES TABLES
ROCK STARS**

Name: _____

Week 23 Session 3

2020-21

2s 5s and 10s

3 a week

Times Tables Rock Stars

2 Times Tables

Licensed to Weston Point Primary School, Runcorn

1	$2 \times 6 =$ _____	21	$2 \times 5 =$ _____	41	$16 \div 2 =$ _____
2	$2 \times 2 =$ _____	22	$2 \times 5 =$ _____	42	$22 \div 2 =$ _____
3	$2 \times 12 =$ _____	23	$2 \times 3 =$ _____	43	$16 \div 2 =$ _____
4	$2 \times 2 =$ _____	24	$2 \times 10 =$ _____	44	$4 \div 2 =$ _____
5	$2 \times 3 =$ _____	25	$2 \times 2 =$ _____	45	$10 \div 2 =$ _____
6	$2 \times 5 =$ _____	26	$2 \times 4 =$ _____	46	$14 \div 2 =$ _____
7	$2 \times 2 =$ _____	27	$2 \times 6 =$ _____	47	$16 \div 2 =$ _____
8	$2 \times 2 =$ _____	28	$2 \times 10 =$ _____	48	$14 \div 2 =$ _____
9	$2 \times 5 =$ _____	29	$2 \times 9 =$ _____	49	$20 \div 2 =$ _____
10	$2 \times 6 =$ _____	30	$2 \times 10 =$ _____	50	$6 \div 2 =$ _____
11	$2 \times 9 =$ _____	31	$12 \div 2 =$ _____	51	$6 \div 2 =$ _____
12	$2 \times 9 =$ _____	32	$16 \div 2 =$ _____	52	$22 \div 2 =$ _____
13	$2 \times 5 =$ _____	33	$14 \div 2 =$ _____	53	$2 \div 2 =$ _____
14	$2 \times 3 =$ _____	34	$2 \div 2 =$ _____	54	$18 \div 2 =$ _____
15	$2 \times 9 =$ _____	35	$2 \div 2 =$ _____	55	$22 \div 2 =$ _____
16	$2 \times 1 =$ _____	36	$4 \div 2 =$ _____	56	$8 \div 2 =$ _____
17	$2 \times 5 =$ _____	37	$16 \div 2 =$ _____	57	$6 \div 2 =$ _____
18	$2 \times 3 =$ _____	38	$22 \div 2 =$ _____	58	$16 \div 2 =$ _____
19	$2 \times 5 =$ _____	39	$8 \div 2 =$ _____	59	$8 \div 2 =$ _____
20	$2 \times 6 =$ _____	40	$22 \div 2 =$ _____	60	$2 \div 2 =$ _____

Time taken

:

🕒 3 minute time limit 🕒

Score

60

Add up your time

Mins

S1 _____

S2 _____

S3 _____

Total _____

Secs

S1 _____

S2 _____

S3 _____

Total _____

Add up your score

S1 _____

S2 _____

S3 _____

Total _____

Name: _____

Week 24 Session 1

2020-21

2s 5s and 10s

3 a week

Times Tables Rock Stars

2 Times Tables

Licensed to Weston Point Primary School, Runcorn

1	$2 \times 3 =$ _____	21	$2 \times 9 =$ _____	41	$8 \times 2 =$ _____
2	$2 \times 10 =$ _____	22	$2 \times 3 =$ _____	42	$12 \times 2 =$ _____
3	$2 \times 6 =$ _____	23	$2 \times 11 =$ _____	43	$9 \times 2 =$ _____
4	$2 \times 11 =$ _____	24	$2 \times 5 =$ _____	44	$8 \times 2 =$ _____
5	$2 \times 9 =$ _____	25	$2 \times 12 =$ _____	45	$5 \times 2 =$ _____
6	$2 \times 1 =$ _____	26	$2 \times 2 =$ _____	46	$8 \times 2 =$ _____
7	$2 \times 6 =$ _____	27	$2 \times 11 =$ _____	47	$12 \times 2 =$ _____
8	$2 \times 7 =$ _____	28	$2 \times 8 =$ _____	48	$7 \times 2 =$ _____
9	$2 \times 2 =$ _____	29	$2 \times 1 =$ _____	49	$12 \times 2 =$ _____
10	$2 \times 9 =$ _____	30	$2 \times 8 =$ _____	50	$11 \times 2 =$ _____
11	$2 \times 2 =$ _____	31	$5 \times 2 =$ _____	51	$5 \times 2 =$ _____
12	$2 \times 10 =$ _____	32	$5 \times 2 =$ _____	52	$2 \times 2 =$ _____
13	$2 \times 8 =$ _____	33	$4 \times 2 =$ _____	53	$4 \times 2 =$ _____
14	$2 \times 4 =$ _____	34	$10 \times 2 =$ _____	54	$7 \times 2 =$ _____
15	$2 \times 1 =$ _____	35	$1 \times 2 =$ _____	55	$12 \times 2 =$ _____
16	$2 \times 2 =$ _____	36	$10 \times 2 =$ _____	56	$1 \times 2 =$ _____
17	$2 \times 6 =$ _____	37	$9 \times 2 =$ _____	57	$3 \times 2 =$ _____
18	$2 \times 1 =$ _____	38	$9 \times 2 =$ _____	58	$3 \times 2 =$ _____
19	$2 \times 3 =$ _____	39	$10 \times 2 =$ _____	59	$10 \times 2 =$ _____
20	$2 \times 11 =$ _____	40	$1 \times 2 =$ _____	60	$9 \times 2 =$ _____

Time taken

:

🕒 3 minute time limit 🕒

Score

60

What's your rock status?

WANNABE

< 18 correct in 3 mins

GARAGE ROCKER

18-19 correct in 3 mins

BUSKER

20-21 correct in 3 mins

GIGGER

22-24 correct in 3 mins

UNSIGNED ACT

25-29 correct in 3 mins

BREAKTHROUGH ARTIST

30-35 correct in 3 mins

SUPPORT ACT

36-44 correct in 3 mins

HEADLINER

45-59 correct in 3 mins

ROCK STAR

All correct in \leq 3mins

ROCK LEGEND

All correct in \leq 2min

ROCK HERO

All correct in \leq 1 min

**TIMES TABLES
ROCK STARS**

Name: _____

Week 24 Session 2

2020-21

2s 5s and 10s

3 a week

Times Tables Rock Stars

2 Times Tables

Licensed to Weston Point Primary School, Runcorn

1	$8 \div 2 =$ _____	21	$18 \div 2 =$ _____	41	$4 \div 2 =$ _____
2	$24 \div 2 =$ _____	22	$20 \div 2 =$ _____	42	$10 \div 2 =$ _____
3	$16 \div 2 =$ _____	23	$2 \div 2 =$ _____	43	$4 \div 2 =$ _____
4	$18 \div 2 =$ _____	24	$4 \div 2 =$ _____	44	$24 \div 2 =$ _____
5	$16 \div 2 =$ _____	25	$24 \div 2 =$ _____	45	$6 \div 2 =$ _____
6	$10 \div 2 =$ _____	26	$8 \div 2 =$ _____	46	$20 \div 2 =$ _____
7	$14 \div 2 =$ _____	27	$10 \div 2 =$ _____	47	$20 \div 2 =$ _____
8	$24 \div 2 =$ _____	28	$12 \div 2 =$ _____	48	$12 \div 2 =$ _____
9	$2 \div 2 =$ _____	29	$4 \div 2 =$ _____	49	$20 \div 2 =$ _____
10	$10 \div 2 =$ _____	30	$10 \div 2 =$ _____	50	$18 \div 2 =$ _____
11	$8 \div 2 =$ _____	31	$14 \div 2 =$ _____	51	$10 \div 2 =$ _____
12	$16 \div 2 =$ _____	32	$12 \div 2 =$ _____	52	$16 \div 2 =$ _____
13	$4 \div 2 =$ _____	33	$6 \div 2 =$ _____	53	$20 \div 2 =$ _____
14	$18 \div 2 =$ _____	34	$20 \div 2 =$ _____	54	$2 \div 2 =$ _____
15	$8 \div 2 =$ _____	35	$16 \div 2 =$ _____	55	$8 \div 2 =$ _____
16	$20 \div 2 =$ _____	36	$12 \div 2 =$ _____	56	$20 \div 2 =$ _____
17	$22 \div 2 =$ _____	37	$4 \div 2 =$ _____	57	$12 \div 2 =$ _____
18	$20 \div 2 =$ _____	38	$4 \div 2 =$ _____	58	$20 \div 2 =$ _____
19	$10 \div 2 =$ _____	39	$10 \div 2 =$ _____	59	$22 \div 2 =$ _____
20	$18 \div 2 =$ _____	40	$12 \div 2 =$ _____	60	$24 \div 2 =$ _____

Time taken

:

🕒 3 minute time limit 🕒

Score

60

What's your rock status?

WANNABE

< 18 correct in 3 mins

GARAGE ROCKER

18-19 correct in 3 mins

BUSKER

20-21 correct in 3 mins

GIGGER

22-24 correct in 3 mins

UNSIGNED ACT

25-29 correct in 3 mins

BREAKTHROUGH ARTIST

30-35 correct in 3 mins

SUPPORT ACT

36-44 correct in 3 mins

HEADLINER

45-59 correct in 3 mins

ROCK STAR

All correct in \leq 3mins

ROCK LEGEND

All correct in \leq 2min

ROCK HERO

All correct in \leq 1 min

**TIMES TABLES
ROCK STARS**

Name: _____

Week 24 Session 3

2020-21

2s 5s and 10s

3 a week

Times Tables Rock Stars

2 Times Tables

Licensed to Weston Point Primary School, Runcorn

1	$2 \times 11 =$ _____	21	$2 \times 7 =$ _____	41	$6 \div 2 =$ _____
2	$2 \times 3 =$ _____	22	$2 \times 5 =$ _____	42	$10 \div 2 =$ _____
3	$2 \times 4 =$ _____	23	$2 \times 12 =$ _____	43	$6 \div 2 =$ _____
4	$2 \times 2 =$ _____	24	$2 \times 7 =$ _____	44	$8 \div 2 =$ _____
5	$2 \times 11 =$ _____	25	$2 \times 8 =$ _____	45	$18 \div 2 =$ _____
6	$2 \times 5 =$ _____	26	$2 \times 7 =$ _____	46	$2 \div 2 =$ _____
7	$2 \times 4 =$ _____	27	$2 \times 8 =$ _____	47	$8 \div 2 =$ _____
8	$2 \times 6 =$ _____	28	$2 \times 6 =$ _____	48	$22 \div 2 =$ _____
9	$2 \times 11 =$ _____	29	$2 \times 4 =$ _____	49	$20 \div 2 =$ _____
10	$2 \times 3 =$ _____	30	$2 \times 8 =$ _____	50	$2 \div 2 =$ _____
11	$2 \times 6 =$ _____	31	$18 \div 2 =$ _____	51	$10 \div 2 =$ _____
12	$2 \times 11 =$ _____	32	$22 \div 2 =$ _____	52	$20 \div 2 =$ _____
13	$2 \times 10 =$ _____	33	$22 \div 2 =$ _____	53	$14 \div 2 =$ _____
14	$2 \times 4 =$ _____	34	$22 \div 2 =$ _____	54	$8 \div 2 =$ _____
15	$2 \times 4 =$ _____	35	$14 \div 2 =$ _____	55	$10 \div 2 =$ _____
16	$2 \times 2 =$ _____	36	$18 \div 2 =$ _____	56	$2 \div 2 =$ _____
17	$2 \times 10 =$ _____	37	$12 \div 2 =$ _____	57	$6 \div 2 =$ _____
18	$2 \times 5 =$ _____	38	$20 \div 2 =$ _____	58	$16 \div 2 =$ _____
19	$2 \times 9 =$ _____	39	$24 \div 2 =$ _____	59	$18 \div 2 =$ _____
20	$2 \times 4 =$ _____	40	$10 \div 2 =$ _____	60	$4 \div 2 =$ _____

Time taken

:

🕒 3 minute time limit 🕒

Score

60

Add up your time

Mins
S1 _____
S2 _____
S3 _____
Total _____

Secs
S1 _____
S2 _____
S3 _____
Total _____

Add up your score
S1 _____
S2 _____
S3 _____
Total _____

Name: _____

Week 25 Session 1

2020-21

2s 5s and 10s

3 a week

Times Tables Rock Stars

5 Times Tables

Licensed to Weston Point Primary School, Runcorn

1	$5 \times 8 =$ _____	21	$5 \times 3 =$ _____	41	$8 \times 5 =$ _____
2	$5 \times 8 =$ _____	22	$5 \times 1 =$ _____	42	$8 \times 5 =$ _____
3	$5 \times 8 =$ _____	23	$5 \times 12 =$ _____	43	$1 \times 5 =$ _____
4	$5 \times 3 =$ _____	24	$5 \times 12 =$ _____	44	$1 \times 5 =$ _____
5	$5 \times 12 =$ _____	25	$5 \times 10 =$ _____	45	$11 \times 5 =$ _____
6	$5 \times 2 =$ _____	26	$5 \times 6 =$ _____	46	$1 \times 5 =$ _____
7	$5 \times 11 =$ _____	27	$5 \times 11 =$ _____	47	$3 \times 5 =$ _____
8	$5 \times 7 =$ _____	28	$5 \times 1 =$ _____	48	$11 \times 5 =$ _____
9	$5 \times 2 =$ _____	29	$5 \times 2 =$ _____	49	$4 \times 5 =$ _____
10	$5 \times 9 =$ _____	30	$5 \times 4 =$ _____	50	$11 \times 5 =$ _____
11	$5 \times 11 =$ _____	31	$8 \times 5 =$ _____	51	$9 \times 5 =$ _____
12	$5 \times 2 =$ _____	32	$1 \times 5 =$ _____	52	$4 \times 5 =$ _____
13	$5 \times 5 =$ _____	33	$6 \times 5 =$ _____	53	$6 \times 5 =$ _____
14	$5 \times 11 =$ _____	34	$7 \times 5 =$ _____	54	$4 \times 5 =$ _____
15	$5 \times 2 =$ _____	35	$5 \times 5 =$ _____	55	$3 \times 5 =$ _____
16	$5 \times 8 =$ _____	36	$10 \times 5 =$ _____	56	$3 \times 5 =$ _____
17	$5 \times 11 =$ _____	37	$6 \times 5 =$ _____	57	$1 \times 5 =$ _____
18	$5 \times 8 =$ _____	38	$2 \times 5 =$ _____	58	$3 \times 5 =$ _____
19	$5 \times 4 =$ _____	39	$2 \times 5 =$ _____	59	$2 \times 5 =$ _____
20	$5 \times 12 =$ _____	40	$10 \times 5 =$ _____	60	$8 \times 5 =$ _____

Time taken

:

🕒 3 minute time limit 🕒

Score

60

What's your rock status?

WANNABE

< 18 correct in 3 mins

GARAGE ROCKER

18-19 correct in 3 mins

BUSKER

20-21 correct in 3 mins

GIGGER

22-24 correct in 3 mins

UNSIGNED ACT

25-29 correct in 3 mins

BREAKTHROUGH ARTIST

30-35 correct in 3 mins

SUPPORT ACT

36-44 correct in 3 mins

HEADLINER

45-59 correct in 3 mins

ROCK STAR

All correct in \leq 3mins

ROCK LEGEND

All correct in \leq 2min

ROCK HERO

All correct in \leq 1 min

**TIMES TABLES
ROCK STARS**

Name: _____

Week 25 Session 2

2020-21

2s 5s and 10s

3 a week

Times Tables Rock Stars

5 Times Tables

Licensed to Weston Point Primary School, Runcorn

1	$60 \div 5 =$ _____	21	$10 \div 5 =$ _____	41	$40 \div 5 =$ _____
2	$10 \div 5 =$ _____	22	$20 \div 5 =$ _____	42	$40 \div 5 =$ _____
3	$55 \div 5 =$ _____	23	$60 \div 5 =$ _____	43	$40 \div 5 =$ _____
4	$40 \div 5 =$ _____	24	$35 \div 5 =$ _____	44	$35 \div 5 =$ _____
5	$50 \div 5 =$ _____	25	$10 \div 5 =$ _____	45	$35 \div 5 =$ _____
6	$35 \div 5 =$ _____	26	$50 \div 5 =$ _____	46	$35 \div 5 =$ _____
7	$40 \div 5 =$ _____	27	$45 \div 5 =$ _____	47	$35 \div 5 =$ _____
8	$20 \div 5 =$ _____	28	$30 \div 5 =$ _____	48	$5 \div 5 =$ _____
9	$5 \div 5 =$ _____	29	$40 \div 5 =$ _____	49	$5 \div 5 =$ _____
10	$15 \div 5 =$ _____	30	$50 \div 5 =$ _____	50	$45 \div 5 =$ _____
11	$20 \div 5 =$ _____	31	$45 \div 5 =$ _____	51	$25 \div 5 =$ _____
12	$40 \div 5 =$ _____	32	$5 \div 5 =$ _____	52	$50 \div 5 =$ _____
13	$35 \div 5 =$ _____	33	$55 \div 5 =$ _____	53	$10 \div 5 =$ _____
14	$25 \div 5 =$ _____	34	$5 \div 5 =$ _____	54	$25 \div 5 =$ _____
15	$10 \div 5 =$ _____	35	$15 \div 5 =$ _____	55	$10 \div 5 =$ _____
16	$5 \div 5 =$ _____	36	$35 \div 5 =$ _____	56	$10 \div 5 =$ _____
17	$15 \div 5 =$ _____	37	$20 \div 5 =$ _____	57	$25 \div 5 =$ _____
18	$10 \div 5 =$ _____	38	$35 \div 5 =$ _____	58	$20 \div 5 =$ _____
19	$35 \div 5 =$ _____	39	$15 \div 5 =$ _____	59	$5 \div 5 =$ _____
20	$15 \div 5 =$ _____	40	$60 \div 5 =$ _____	60	$10 \div 5 =$ _____

Time taken

:

🕒 3 minute time limit 🕒

Score

60

What's your rock status?

WANNABE

< 18 correct in 3 mins

GARAGE ROCKER

18-19 correct in 3 mins

BUSKER

20-21 correct in 3 mins

GIGGER

22-24 correct in 3 mins

UNSIGNED ACT

25-29 correct in 3 mins

BREAKTHROUGH ARTIST

30-35 correct in 3 mins

SUPPORT ACT

36-44 correct in 3 mins

HEADLINER

45-59 correct in 3 mins

ROCK STAR

All correct in \leq 3mins

ROCK LEGEND

All correct in \leq 2min

ROCK HERO

All correct in \leq 1 min

**TIMES TABLES
ROCK STARS**

Name: _____

Week 25 Session 3

2020-21

2s 5s and 10s

3 a week

Times Tables Rock Stars

5 Times Tables

Licensed to Weston Point Primary School, Runcorn

1	$5 \times 9 =$ _____	21	$5 \times 7 =$ _____	41	$60 \div 5 =$ _____
2	$5 \times 6 =$ _____	22	$5 \times 11 =$ _____	42	$25 \div 5 =$ _____
3	$5 \times 12 =$ _____	23	$5 \times 11 =$ _____	43	$60 \div 5 =$ _____
4	$5 \times 10 =$ _____	24	$5 \times 10 =$ _____	44	$10 \div 5 =$ _____
5	$5 \times 11 =$ _____	25	$5 \times 1 =$ _____	45	$20 \div 5 =$ _____
6	$5 \times 5 =$ _____	26	$5 \times 12 =$ _____	46	$10 \div 5 =$ _____
7	$5 \times 11 =$ _____	27	$5 \times 12 =$ _____	47	$25 \div 5 =$ _____
8	$5 \times 9 =$ _____	28	$5 \times 7 =$ _____	48	$55 \div 5 =$ _____
9	$5 \times 8 =$ _____	29	$5 \times 1 =$ _____	49	$10 \div 5 =$ _____
10	$5 \times 6 =$ _____	30	$5 \times 5 =$ _____	50	$55 \div 5 =$ _____
11	$5 \times 6 =$ _____	31	$20 \div 5 =$ _____	51	$30 \div 5 =$ _____
12	$5 \times 11 =$ _____	32	$15 \div 5 =$ _____	52	$40 \div 5 =$ _____
13	$5 \times 9 =$ _____	33	$45 \div 5 =$ _____	53	$30 \div 5 =$ _____
14	$5 \times 5 =$ _____	34	$25 \div 5 =$ _____	54	$15 \div 5 =$ _____
15	$5 \times 4 =$ _____	35	$50 \div 5 =$ _____	55	$20 \div 5 =$ _____
16	$5 \times 8 =$ _____	36	$25 \div 5 =$ _____	56	$60 \div 5 =$ _____
17	$5 \times 10 =$ _____	37	$35 \div 5 =$ _____	57	$25 \div 5 =$ _____
18	$5 \times 2 =$ _____	38	$45 \div 5 =$ _____	58	$50 \div 5 =$ _____
19	$5 \times 6 =$ _____	39	$5 \div 5 =$ _____	59	$60 \div 5 =$ _____
20	$5 \times 5 =$ _____	40	$45 \div 5 =$ _____	60	$50 \div 5 =$ _____

Time taken

:

🕒 3 minute time limit 🕒

Score

60

Add up your time

Mins

S1 _____

S2 _____

S3 _____

Total _____

Secs

S1 _____

S2 _____

S3 _____

Total _____

Add up your score

S1 _____

S2 _____

S3 _____

Total _____

Name: _____

Week 26 Session 1

2020-21

2s 5s and 10s

3 a week

Times Tables Rock Stars

5 Times Tables

Licensed to Weston Point Primary School, Runcorn

1	$5 \times 8 =$ _____	21	$5 \times 12 =$ _____	41	$1 \times 5 =$ _____
2	$5 \times 4 =$ _____	22	$5 \times 10 =$ _____	42	$1 \times 5 =$ _____
3	$5 \times 7 =$ _____	23	$5 \times 9 =$ _____	43	$11 \times 5 =$ _____
4	$5 \times 1 =$ _____	24	$5 \times 5 =$ _____	44	$10 \times 5 =$ _____
5	$5 \times 9 =$ _____	25	$5 \times 11 =$ _____	45	$6 \times 5 =$ _____
6	$5 \times 7 =$ _____	26	$5 \times 9 =$ _____	46	$9 \times 5 =$ _____
7	$5 \times 11 =$ _____	27	$5 \times 4 =$ _____	47	$3 \times 5 =$ _____
8	$5 \times 5 =$ _____	28	$5 \times 5 =$ _____	48	$7 \times 5 =$ _____
9	$5 \times 6 =$ _____	29	$5 \times 11 =$ _____	49	$7 \times 5 =$ _____
10	$5 \times 6 =$ _____	30	$5 \times 12 =$ _____	50	$9 \times 5 =$ _____
11	$5 \times 2 =$ _____	31	$11 \times 5 =$ _____	51	$1 \times 5 =$ _____
12	$5 \times 6 =$ _____	32	$5 \times 5 =$ _____	52	$11 \times 5 =$ _____
13	$5 \times 8 =$ _____	33	$11 \times 5 =$ _____	53	$5 \times 5 =$ _____
14	$5 \times 1 =$ _____	34	$12 \times 5 =$ _____	54	$11 \times 5 =$ _____
15	$5 \times 7 =$ _____	35	$12 \times 5 =$ _____	55	$12 \times 5 =$ _____
16	$5 \times 1 =$ _____	36	$6 \times 5 =$ _____	56	$5 \times 5 =$ _____
17	$5 \times 10 =$ _____	37	$7 \times 5 =$ _____	57	$2 \times 5 =$ _____
18	$5 \times 6 =$ _____	38	$3 \times 5 =$ _____	58	$3 \times 5 =$ _____
19	$5 \times 8 =$ _____	39	$5 \times 5 =$ _____	59	$1 \times 5 =$ _____
20	$5 \times 10 =$ _____	40	$9 \times 5 =$ _____	60	$12 \times 5 =$ _____

Time taken

:

🕒 3 minute time limit 🕒

Score

60

What's your rock status?

WANNABE

< 18 correct in 3 mins

GARAGE ROCKER

18-19 correct in 3 mins

BUSKER

20-21 correct in 3 mins

GIGGER

22-24 correct in 3 mins

UNSIGNED ACT

25-29 correct in 3 mins

BREAKTHROUGH ARTIST

30-35 correct in 3 mins

SUPPORT ACT

36-44 correct in 3 mins

HEADLINER

45-59 correct in 3 mins

ROCK STAR

All correct in \leq 3mins

ROCK LEGEND

All correct in \leq 2min

ROCK HERO

All correct in \leq 1 min

**TIMES TABLES
ROCK STARS**

Name: _____

Week 26 Session 2

2020-21

2s 5s and 10s

3 a week

Times Tables Rock Stars

5 Times Tables

Licensed to Weston Point Primary School, Runcorn

1	$10 \div 5 =$ _____	21	$35 \div 5 =$ _____	41	$45 \div 5 =$ _____
2	$25 \div 5 =$ _____	22	$55 \div 5 =$ _____	42	$10 \div 5 =$ _____
3	$45 \div 5 =$ _____	23	$45 \div 5 =$ _____	43	$60 \div 5 =$ _____
4	$40 \div 5 =$ _____	24	$55 \div 5 =$ _____	44	$45 \div 5 =$ _____
5	$15 \div 5 =$ _____	25	$15 \div 5 =$ _____	45	$50 \div 5 =$ _____
6	$35 \div 5 =$ _____	26	$20 \div 5 =$ _____	46	$20 \div 5 =$ _____
7	$60 \div 5 =$ _____	27	$5 \div 5 =$ _____	47	$20 \div 5 =$ _____
8	$20 \div 5 =$ _____	28	$50 \div 5 =$ _____	48	$45 \div 5 =$ _____
9	$15 \div 5 =$ _____	29	$40 \div 5 =$ _____	49	$35 \div 5 =$ _____
10	$60 \div 5 =$ _____	30	$15 \div 5 =$ _____	50	$20 \div 5 =$ _____
11	$10 \div 5 =$ _____	31	$5 \div 5 =$ _____	51	$40 \div 5 =$ _____
12	$10 \div 5 =$ _____	32	$55 \div 5 =$ _____	52	$50 \div 5 =$ _____
13	$30 \div 5 =$ _____	33	$20 \div 5 =$ _____	53	$10 \div 5 =$ _____
14	$20 \div 5 =$ _____	34	$10 \div 5 =$ _____	54	$35 \div 5 =$ _____
15	$25 \div 5 =$ _____	35	$30 \div 5 =$ _____	55	$10 \div 5 =$ _____
16	$20 \div 5 =$ _____	36	$30 \div 5 =$ _____	56	$25 \div 5 =$ _____
17	$35 \div 5 =$ _____	37	$35 \div 5 =$ _____	57	$45 \div 5 =$ _____
18	$35 \div 5 =$ _____	38	$50 \div 5 =$ _____	58	$25 \div 5 =$ _____
19	$10 \div 5 =$ _____	39	$5 \div 5 =$ _____	59	$55 \div 5 =$ _____
20	$10 \div 5 =$ _____	40	$20 \div 5 =$ _____	60	$5 \div 5 =$ _____

Time taken

:

🕒 3 minute time limit 🕒

Score

60

What's your rock status?

WANNABE

< 18 correct in 3 mins

GARAGE ROCKER

18-19 correct in 3 mins

BUSKER

20-21 correct in 3 mins

GIGGER

22-24 correct in 3 mins

UNSIGNED ACT

25-29 correct in 3 mins

BREAKTHROUGH ARTIST

30-35 correct in 3 mins

SUPPORT ACT

36-44 correct in 3 mins

HEADLINER

45-59 correct in 3 mins

ROCK STAR

All correct in \leq 3mins

ROCK LEGEND

All correct in \leq 2min

ROCK HERO

All correct in \leq 1 min

**TIMES TABLES
ROCK STARS**

Name: _____

Week 26 Session 3

2020-21

2s 5s and 10s

3 a week

Times Tables Rock Stars

5 Times Tables

Licensed to Weston Point Primary School, Runcorn

1	$5 \times 8 =$ _____	21	$5 \times 7 =$ _____	41	$50 \div 5 =$ _____
2	$5 \times 9 =$ _____	22	$5 \times 11 =$ _____	42	$40 \div 5 =$ _____
3	$5 \times 7 =$ _____	23	$5 \times 6 =$ _____	43	$60 \div 5 =$ _____
4	$5 \times 10 =$ _____	24	$5 \times 4 =$ _____	44	$40 \div 5 =$ _____
5	$5 \times 10 =$ _____	25	$5 \times 9 =$ _____	45	$60 \div 5 =$ _____
6	$5 \times 10 =$ _____	26	$5 \times 5 =$ _____	46	$30 \div 5 =$ _____
7	$5 \times 12 =$ _____	27	$5 \times 10 =$ _____	47	$5 \div 5 =$ _____
8	$5 \times 12 =$ _____	28	$5 \times 3 =$ _____	48	$5 \div 5 =$ _____
9	$5 \times 12 =$ _____	29	$5 \times 10 =$ _____	49	$60 \div 5 =$ _____
10	$5 \times 4 =$ _____	30	$5 \times 9 =$ _____	50	$10 \div 5 =$ _____
11	$5 \times 4 =$ _____	31	$50 \div 5 =$ _____	51	$25 \div 5 =$ _____
12	$5 \times 10 =$ _____	32	$50 \div 5 =$ _____	52	$5 \div 5 =$ _____
13	$5 \times 4 =$ _____	33	$55 \div 5 =$ _____	53	$45 \div 5 =$ _____
14	$5 \times 1 =$ _____	34	$25 \div 5 =$ _____	54	$55 \div 5 =$ _____
15	$5 \times 5 =$ _____	35	$55 \div 5 =$ _____	55	$60 \div 5 =$ _____
16	$5 \times 12 =$ _____	36	$10 \div 5 =$ _____	56	$60 \div 5 =$ _____
17	$5 \times 12 =$ _____	37	$45 \div 5 =$ _____	57	$60 \div 5 =$ _____
18	$5 \times 1 =$ _____	38	$60 \div 5 =$ _____	58	$5 \div 5 =$ _____
19	$5 \times 6 =$ _____	39	$25 \div 5 =$ _____	59	$5 \div 5 =$ _____
20	$5 \times 4 =$ _____	40	$15 \div 5 =$ _____	60	$60 \div 5 =$ _____

Time taken

:

🕒 3 minute time limit 🕒

Score

60

Add up your time

Mins

S1 _____

S2 _____

S3 _____

Total _____

Secs

S1 _____

S2 _____

S3 _____

Total _____

Add up your score

S1 _____

S2 _____

S3 _____

Total _____

Name: _____

Week 27 Session 1

2020-21

2s 5s and 10s

3 a week

Times Tables Rock Stars

10 Times Tables

Licensed to Weston Point Primary School, Runcorn

1	$10 \times 9 =$ _____	21	$10 \times 7 =$ _____	41	$5 \times 10 =$ _____
2	$10 \times 5 =$ _____	22	$10 \times 10 =$ _____	42	$12 \times 10 =$ _____
3	$10 \times 4 =$ _____	23	$10 \times 7 =$ _____	43	$10 \times 10 =$ _____
4	$10 \times 4 =$ _____	24	$10 \times 7 =$ _____	44	$8 \times 10 =$ _____
5	$10 \times 10 =$ _____	25	$10 \times 10 =$ _____	45	$7 \times 10 =$ _____
6	$10 \times 6 =$ _____	26	$10 \times 8 =$ _____	46	$5 \times 10 =$ _____
7	$10 \times 3 =$ _____	27	$10 \times 11 =$ _____	47	$3 \times 10 =$ _____
8	$10 \times 9 =$ _____	28	$10 \times 11 =$ _____	48	$5 \times 10 =$ _____
9	$10 \times 3 =$ _____	29	$10 \times 6 =$ _____	49	$2 \times 10 =$ _____
10	$10 \times 8 =$ _____	30	$10 \times 12 =$ _____	50	$11 \times 10 =$ _____
11	$10 \times 5 =$ _____	31	$5 \times 10 =$ _____	51	$6 \times 10 =$ _____
12	$10 \times 6 =$ _____	32	$11 \times 10 =$ _____	52	$2 \times 10 =$ _____
13	$10 \times 4 =$ _____	33	$10 \times 10 =$ _____	53	$9 \times 10 =$ _____
14	$10 \times 10 =$ _____	34	$9 \times 10 =$ _____	54	$2 \times 10 =$ _____
15	$10 \times 2 =$ _____	35	$8 \times 10 =$ _____	55	$6 \times 10 =$ _____
16	$10 \times 12 =$ _____	36	$12 \times 10 =$ _____	56	$6 \times 10 =$ _____
17	$10 \times 10 =$ _____	37	$4 \times 10 =$ _____	57	$4 \times 10 =$ _____
18	$10 \times 2 =$ _____	38	$10 \times 10 =$ _____	58	$3 \times 10 =$ _____
19	$10 \times 6 =$ _____	39	$12 \times 10 =$ _____	59	$5 \times 10 =$ _____
20	$10 \times 12 =$ _____	40	$4 \times 10 =$ _____	60	$4 \times 10 =$ _____

Time taken

:

🕒 3 minute time limit 🕒

Score

60

What's your rock status?

WANNABE

< 18 correct in 3 mins

GARAGE ROCKER

18-19 correct in 3 mins

BUSKER

20-21 correct in 3 mins

GIGGER

22-24 correct in 3 mins

UNSIGNED ACT

25-29 correct in 3 mins

BREAKTHROUGH ARTIST

30-35 correct in 3 mins

SUPPORT ACT

36-44 correct in 3 mins

HEADLINER

45-59 correct in 3 mins

ROCK STAR

All correct in \leq 3mins

ROCK LEGEND

All correct in \leq 2min

ROCK HERO

All correct in \leq 1 min

**TIMES TABLES
ROCK STARS**

Name: _____

Week 27 Session 2

2020-21

2s 5s and 10s

3 a week

Times Tables Rock Stars

10 Times Tables

Licensed to Weston Point Primary School, Runcorn

1	$110 \div 10 =$ _____	21	$20 \div 10 =$ _____	41	$70 \div 10 =$ _____
2	$110 \div 10 =$ _____	22	$80 \div 10 =$ _____	42	$100 \div 10 =$ _____
3	$10 \div 10 =$ _____	23	$110 \div 10 =$ _____	43	$80 \div 10 =$ _____
4	$40 \div 10 =$ _____	24	$40 \div 10 =$ _____	44	$10 \div 10 =$ _____
5	$110 \div 10 =$ _____	25	$40 \div 10 =$ _____	45	$20 \div 10 =$ _____
6	$90 \div 10 =$ _____	26	$100 \div 10 =$ _____	46	$10 \div 10 =$ _____
7	$80 \div 10 =$ _____	27	$30 \div 10 =$ _____	47	$60 \div 10 =$ _____
8	$110 \div 10 =$ _____	28	$40 \div 10 =$ _____	48	$120 \div 10 =$ _____
9	$70 \div 10 =$ _____	29	$40 \div 10 =$ _____	49	$20 \div 10 =$ _____
10	$60 \div 10 =$ _____	30	$80 \div 10 =$ _____	50	$20 \div 10 =$ _____
11	$80 \div 10 =$ _____	31	$30 \div 10 =$ _____	51	$20 \div 10 =$ _____
12	$40 \div 10 =$ _____	32	$120 \div 10 =$ _____	52	$120 \div 10 =$ _____
13	$60 \div 10 =$ _____	33	$120 \div 10 =$ _____	53	$120 \div 10 =$ _____
14	$110 \div 10 =$ _____	34	$80 \div 10 =$ _____	54	$30 \div 10 =$ _____
15	$120 \div 10 =$ _____	35	$80 \div 10 =$ _____	55	$110 \div 10 =$ _____
16	$90 \div 10 =$ _____	36	$90 \div 10 =$ _____	56	$60 \div 10 =$ _____
17	$100 \div 10 =$ _____	37	$50 \div 10 =$ _____	57	$30 \div 10 =$ _____
18	$90 \div 10 =$ _____	38	$70 \div 10 =$ _____	58	$90 \div 10 =$ _____
19	$100 \div 10 =$ _____	39	$70 \div 10 =$ _____	59	$50 \div 10 =$ _____
20	$60 \div 10 =$ _____	40	$40 \div 10 =$ _____	60	$50 \div 10 =$ _____

Time taken

:

🕒 3 minute time limit 🕒

Score

60

What's your rock status?

WANNABE

< 18 correct in 3 mins

GARAGE ROCKER

18-19 correct in 3 mins

BUSKER

20-21 correct in 3 mins

GIGGER

22-24 correct in 3 mins

UNSIGNED ACT

25-29 correct in 3 mins

BREAKTHROUGH ARTIST

30-35 correct in 3 mins

SUPPORT ACT

36-44 correct in 3 mins

HEADLINER

45-59 correct in 3 mins

ROCK STAR

All correct in \leq 3mins

ROCK LEGEND

All correct in \leq 2min

ROCK HERO

All correct in \leq 1 min

**TIMES TABLES
ROCK STARS**

Name: _____

Week 27 Session 3

2020-21

2s 5s and 10s

3 a week

Times Tables Rock Stars

10 Times Tables

Licensed to Weston Point Primary School, Runcorn

1	$10 \times 7 =$ _____	21	$10 \times 6 =$ _____	41	$40 \div 10 =$ _____
2	$10 \times 4 =$ _____	22	$10 \times 2 =$ _____	42	$60 \div 10 =$ _____
3	$10 \times 7 =$ _____	23	$10 \times 6 =$ _____	43	$110 \div 10 =$ _____
4	$10 \times 7 =$ _____	24	$10 \times 6 =$ _____	44	$20 \div 10 =$ _____
5	$10 \times 6 =$ _____	25	$10 \times 9 =$ _____	45	$100 \div 10 =$ _____
6	$10 \times 12 =$ _____	26	$10 \times 9 =$ _____	46	$10 \div 10 =$ _____
7	$10 \times 9 =$ _____	27	$10 \times 7 =$ _____	47	$70 \div 10 =$ _____
8	$10 \times 3 =$ _____	28	$10 \times 5 =$ _____	48	$100 \div 10 =$ _____
9	$10 \times 1 =$ _____	29	$10 \times 5 =$ _____	49	$70 \div 10 =$ _____
10	$10 \times 1 =$ _____	30	$10 \times 8 =$ _____	50	$40 \div 10 =$ _____
11	$10 \times 12 =$ _____	31	$70 \div 10 =$ _____	51	$30 \div 10 =$ _____
12	$10 \times 7 =$ _____	32	$30 \div 10 =$ _____	52	$80 \div 10 =$ _____
13	$10 \times 2 =$ _____	33	$30 \div 10 =$ _____	53	$60 \div 10 =$ _____
14	$10 \times 1 =$ _____	34	$100 \div 10 =$ _____	54	$40 \div 10 =$ _____
15	$10 \times 12 =$ _____	35	$80 \div 10 =$ _____	55	$30 \div 10 =$ _____
16	$10 \times 5 =$ _____	36	$50 \div 10 =$ _____	56	$100 \div 10 =$ _____
17	$10 \times 8 =$ _____	37	$90 \div 10 =$ _____	57	$110 \div 10 =$ _____
18	$10 \times 1 =$ _____	38	$80 \div 10 =$ _____	58	$100 \div 10 =$ _____
19	$10 \times 9 =$ _____	39	$110 \div 10 =$ _____	59	$50 \div 10 =$ _____
20	$10 \times 10 =$ _____	40	$120 \div 10 =$ _____	60	$40 \div 10 =$ _____

Time taken

:

🕒 3 minute time limit 🕒

Score

60

Add up your time

Mins

S1 _____

S2 _____

S3 _____

Total _____

Secs

S1 _____

S2 _____

S3 _____

Total _____

Add up your score

S1 _____

S2 _____

S3 _____

Total _____

Name: _____

Week 28 Session 1

2020-21

2s 5s and 10s

3 a week

Times Tables Rock Stars

2,10 Times Tables

Licensed to Weston Point Primary School, Runcorn

1	$10 \times 6 =$ _____	21	$2 \times 8 =$ _____	41	$8 \times 2 =$ _____
2	$2 \times 1 =$ _____	22	$2 \times 3 =$ _____	42	$6 \times 10 =$ _____
3	$10 \times 1 =$ _____	23	$10 \times 2 =$ _____	43	$4 \times 10 =$ _____
4	$10 \times 10 =$ _____	24	$2 \times 4 =$ _____	44	$12 \times 10 =$ _____
5	$10 \times 8 =$ _____	25	$10 \times 9 =$ _____	45	$10 \times 2 =$ _____
6	$10 \times 10 =$ _____	26	$2 \times 12 =$ _____	46	$3 \times 10 =$ _____
7	$10 \times 1 =$ _____	27	$2 \times 5 =$ _____	47	$5 \times 2 =$ _____
8	$10 \times 3 =$ _____	28	$10 \times 4 =$ _____	48	$12 \times 2 =$ _____
9	$10 \times 1 =$ _____	29	$10 \times 7 =$ _____	49	$9 \times 10 =$ _____
10	$10 \times 5 =$ _____	30	$2 \times 11 =$ _____	50	$6 \times 2 =$ _____
11	$10 \times 1 =$ _____	31	$6 \times 2 =$ _____	51	$3 \times 2 =$ _____
12	$10 \times 9 =$ _____	32	$7 \times 2 =$ _____	52	$11 \times 2 =$ _____
13	$10 \times 6 =$ _____	33	$2 \times 10 =$ _____	53	$2 \times 2 =$ _____
14	$2 \times 10 =$ _____	34	$1 \times 2 =$ _____	54	$10 \times 10 =$ _____
15	$10 \times 12 =$ _____	35	$5 \times 2 =$ _____	55	$8 \times 10 =$ _____
16	$2 \times 12 =$ _____	36	$5 \times 10 =$ _____	56	$4 \times 2 =$ _____
17	$10 \times 8 =$ _____	37	$5 \times 10 =$ _____	57	$1 \times 10 =$ _____
18	$10 \times 5 =$ _____	38	$1 \times 2 =$ _____	58	$9 \times 10 =$ _____
19	$2 \times 12 =$ _____	39	$3 \times 10 =$ _____	59	$7 \times 2 =$ _____
20	$10 \times 8 =$ _____	40	$5 \times 2 =$ _____	60	$9 \times 2 =$ _____

Time taken

:

🕒 3 minute time limit 🕒

Score

60

What's your rock status?

WANNABE

< 18 correct in 3 mins

GARAGE ROCKER

18-19 correct in 3 mins

BUSKER

20-21 correct in 3 mins

GIGGER

22-24 correct in 3 mins

UNSIGNED ACT

25-29 correct in 3 mins

BREAKTHROUGH ARTIST

30-35 correct in 3 mins

SUPPORT ACT

36-44 correct in 3 mins

HEADLINER

45-59 correct in 3 mins

ROCK STAR

All correct in \leq 3mins

ROCK LEGEND

All correct in \leq 2min

ROCK HERO

All correct in \leq 1 min

**TIMES TABLES
ROCK STARS**

Name: _____

Week 28 Session 2

2020-21

2s 5s and 10s

3 a week

Times Tables Rock Stars

2,10 Times Tables

Licensed to Weston Point Primary School, Runcorn

1	$10 \div 10 =$ _____	21	$2 \div 2 =$ _____	41	$100 \div 10 =$ _____
2	$110 \div 10 =$ _____	22	$60 \div 10 =$ _____	42	$10 \div 10 =$ _____
3	$80 \div 10 =$ _____	23	$30 \div 10 =$ _____	43	$24 \div 2 =$ _____
4	$110 \div 10 =$ _____	24	$22 \div 2 =$ _____	44	$50 \div 10 =$ _____
5	$60 \div 10 =$ _____	25	$110 \div 10 =$ _____	45	$10 \div 2 =$ _____
6	$2 \div 2 =$ _____	26	$100 \div 10 =$ _____	46	$18 \div 2 =$ _____
7	$6 \div 2 =$ _____	27	$6 \div 2 =$ _____	47	$90 \div 10 =$ _____
8	$90 \div 10 =$ _____	28	$40 \div 10 =$ _____	48	$60 \div 10 =$ _____
9	$16 \div 2 =$ _____	29	$100 \div 10 =$ _____	49	$20 \div 2 =$ _____
10	$120 \div 10 =$ _____	30	$10 \div 2 =$ _____	50	$22 \div 2 =$ _____
11	$120 \div 10 =$ _____	31	$70 \div 10 =$ _____	51	$18 \div 2 =$ _____
12	$6 \div 2 =$ _____	32	$120 \div 10 =$ _____	52	$60 \div 10 =$ _____
13	$40 \div 10 =$ _____	33	$4 \div 2 =$ _____	53	$10 \div 10 =$ _____
14	$120 \div 10 =$ _____	34	$22 \div 2 =$ _____	54	$24 \div 2 =$ _____
15	$6 \div 2 =$ _____	35	$24 \div 2 =$ _____	55	$80 \div 10 =$ _____
16	$20 \div 10 =$ _____	36	$60 \div 10 =$ _____	56	$20 \div 10 =$ _____
17	$110 \div 10 =$ _____	37	$10 \div 10 =$ _____	57	$120 \div 10 =$ _____
18	$22 \div 2 =$ _____	38	$2 \div 2 =$ _____	58	$24 \div 2 =$ _____
19	$22 \div 2 =$ _____	39	$40 \div 10 =$ _____	59	$8 \div 2 =$ _____
20	$50 \div 10 =$ _____	40	$12 \div 2 =$ _____	60	$24 \div 2 =$ _____

Time taken

:

🕒 3 minute time limit 🕒

Score

60

What's your rock status?

WANNABE

< 18 correct in 3 mins

GARAGE ROCKER

18-19 correct in 3 mins

BUSKER

20-21 correct in 3 mins

GIGGER

22-24 correct in 3 mins

UNSIGNED ACT

25-29 correct in 3 mins

BREAKTHROUGH ARTIST

30-35 correct in 3 mins

SUPPORT ACT

36-44 correct in 3 mins

HEADLINER

45-59 correct in 3 mins

ROCK STAR

All correct in \leq 3mins

ROCK LEGEND

All correct in \leq 2min

ROCK HERO

All correct in \leq 1 min

**TIMES TABLES
ROCK STARS**

Name: _____

Week 28 Session 3

2020-21

2s 5s and 10s

3 a week

Times Tables Rock Stars

2,10 Times Tables

Licensed to Weston Point Primary School, Runcorn

1	$2 \times 1 =$ _____	21	$10 \times 3 =$ _____	41	$50 \div 10 =$ _____
2	$2 \times 12 =$ _____	22	$2 \times 7 =$ _____	42	$10 \div 10 =$ _____
3	$10 \times 9 =$ _____	23	$10 \times 12 =$ _____	43	$80 \div 10 =$ _____
4	$2 \times 7 =$ _____	24	$10 \times 11 =$ _____	44	$40 \div 10 =$ _____
5	$2 \times 11 =$ _____	25	$2 \times 12 =$ _____	45	$4 \div 2 =$ _____
6	$10 \times 12 =$ _____	26	$10 \times 6 =$ _____	46	$90 \div 10 =$ _____
7	$2 \times 10 =$ _____	27	$2 \times 5 =$ _____	47	$18 \div 2 =$ _____
8	$2 \times 5 =$ _____	28	$2 \times 12 =$ _____	48	$80 \div 10 =$ _____
9	$10 \times 10 =$ _____	29	$10 \times 3 =$ _____	49	$100 \div 10 =$ _____
10	$10 \times 12 =$ _____	30	$10 \times 4 =$ _____	50	$2 \div 2 =$ _____
11	$2 \times 4 =$ _____	31	$4 \div 2 =$ _____	51	$14 \div 2 =$ _____
12	$2 \times 6 =$ _____	32	$80 \div 10 =$ _____	52	$40 \div 10 =$ _____
13	$2 \times 10 =$ _____	33	$2 \div 2 =$ _____	53	$60 \div 10 =$ _____
14	$2 \times 6 =$ _____	34	$60 \div 10 =$ _____	54	$10 \div 10 =$ _____
15	$10 \times 6 =$ _____	35	$20 \div 2 =$ _____	55	$8 \div 2 =$ _____
16	$10 \times 1 =$ _____	36	$4 \div 2 =$ _____	56	$20 \div 10 =$ _____
17	$2 \times 12 =$ _____	37	$18 \div 2 =$ _____	57	$10 \div 10 =$ _____
18	$2 \times 3 =$ _____	38	$30 \div 10 =$ _____	58	$100 \div 10 =$ _____
19	$10 \times 1 =$ _____	39	$24 \div 2 =$ _____	59	$14 \div 2 =$ _____
20	$2 \times 8 =$ _____	40	$110 \div 10 =$ _____	60	$20 \div 2 =$ _____

Time taken

:

🕒 3 minute time limit 🕒

Score

60

Add up your time

Mins	
S1	_____
S2	_____
S3	_____
Total	_____

Secs	
S1	_____
S2	_____
S3	_____
Total	_____

Add up your score	
S1	_____
S2	_____
S3	_____
Total	_____

Name: _____

Week 29 Session 1

2020-21

2s 5s and 10s

3 a week

Times Tables Rock Stars

5 Times Tables

Licensed to Weston Point Primary School, Runcorn

1	$5 \times 11 =$ _____	21	$5 \times 2 =$ _____	41	$8 \times 5 =$ _____
2	$5 \times 8 =$ _____	22	$5 \times 5 =$ _____	42	$3 \times 5 =$ _____
3	$5 \times 3 =$ _____	23	$5 \times 11 =$ _____	43	$7 \times 5 =$ _____
4	$5 \times 2 =$ _____	24	$5 \times 12 =$ _____	44	$11 \times 5 =$ _____
5	$5 \times 9 =$ _____	25	$5 \times 5 =$ _____	45	$3 \times 5 =$ _____
6	$5 \times 3 =$ _____	26	$5 \times 9 =$ _____	46	$2 \times 5 =$ _____
7	$5 \times 2 =$ _____	27	$5 \times 3 =$ _____	47	$10 \times 5 =$ _____
8	$5 \times 3 =$ _____	28	$5 \times 1 =$ _____	48	$4 \times 5 =$ _____
9	$5 \times 4 =$ _____	29	$5 \times 2 =$ _____	49	$12 \times 5 =$ _____
10	$5 \times 7 =$ _____	30	$5 \times 9 =$ _____	50	$7 \times 5 =$ _____
11	$5 \times 10 =$ _____	31	$6 \times 5 =$ _____	51	$10 \times 5 =$ _____
12	$5 \times 12 =$ _____	32	$10 \times 5 =$ _____	52	$11 \times 5 =$ _____
13	$5 \times 5 =$ _____	33	$6 \times 5 =$ _____	53	$11 \times 5 =$ _____
14	$5 \times 9 =$ _____	34	$1 \times 5 =$ _____	54	$11 \times 5 =$ _____
15	$5 \times 2 =$ _____	35	$1 \times 5 =$ _____	55	$11 \times 5 =$ _____
16	$5 \times 9 =$ _____	36	$12 \times 5 =$ _____	56	$5 \times 5 =$ _____
17	$5 \times 6 =$ _____	37	$9 \times 5 =$ _____	57	$10 \times 5 =$ _____
18	$5 \times 4 =$ _____	38	$7 \times 5 =$ _____	58	$4 \times 5 =$ _____
19	$5 \times 10 =$ _____	39	$10 \times 5 =$ _____	59	$4 \times 5 =$ _____
20	$5 \times 2 =$ _____	40	$1 \times 5 =$ _____	60	$8 \times 5 =$ _____

Time taken

:

🕒 3 minute time limit 🕒

Score

60

What's your rock status?

WANNABE

< 18 correct in 3 mins

GARAGE ROCKER

18-19 correct in 3 mins

BUSKER

20-21 correct in 3 mins

GIGGER

22-24 correct in 3 mins

UNSIGNED ACT

25-29 correct in 3 mins

BREAKTHROUGH ARTIST

30-35 correct in 3 mins

SUPPORT ACT

36-44 correct in 3 mins

HEADLINER

45-59 correct in 3 mins

ROCK STAR

All correct in \leq 3mins

ROCK LEGEND

All correct in \leq 2min

ROCK HERO

All correct in \leq 1 min

**TIMES TABLES
ROCK STARS**

Name: _____

Week 29 Session 2

2020-21

2s 5s and 10s

3 a week

Times Tables Rock Stars

5 Times Tables

Licensed to Weston Point Primary School, Runcorn

1	$10 \div 5 =$ _____	21	$40 \div 5 =$ _____	41	$60 \div 5 =$ _____
2	$50 \div 5 =$ _____	22	$40 \div 5 =$ _____	42	$55 \div 5 =$ _____
3	$15 \div 5 =$ _____	23	$30 \div 5 =$ _____	43	$55 \div 5 =$ _____
4	$60 \div 5 =$ _____	24	$40 \div 5 =$ _____	44	$10 \div 5 =$ _____
5	$25 \div 5 =$ _____	25	$45 \div 5 =$ _____	45	$35 \div 5 =$ _____
6	$50 \div 5 =$ _____	26	$55 \div 5 =$ _____	46	$5 \div 5 =$ _____
7	$10 \div 5 =$ _____	27	$20 \div 5 =$ _____	47	$60 \div 5 =$ _____
8	$30 \div 5 =$ _____	28	$35 \div 5 =$ _____	48	$10 \div 5 =$ _____
9	$55 \div 5 =$ _____	29	$45 \div 5 =$ _____	49	$30 \div 5 =$ _____
10	$20 \div 5 =$ _____	30	$15 \div 5 =$ _____	50	$40 \div 5 =$ _____
11	$55 \div 5 =$ _____	31	$55 \div 5 =$ _____	51	$35 \div 5 =$ _____
12	$25 \div 5 =$ _____	32	$40 \div 5 =$ _____	52	$45 \div 5 =$ _____
13	$30 \div 5 =$ _____	33	$25 \div 5 =$ _____	53	$35 \div 5 =$ _____
14	$5 \div 5 =$ _____	34	$15 \div 5 =$ _____	54	$30 \div 5 =$ _____
15	$15 \div 5 =$ _____	35	$30 \div 5 =$ _____	55	$10 \div 5 =$ _____
16	$40 \div 5 =$ _____	36	$45 \div 5 =$ _____	56	$40 \div 5 =$ _____
17	$40 \div 5 =$ _____	37	$30 \div 5 =$ _____	57	$10 \div 5 =$ _____
18	$10 \div 5 =$ _____	38	$10 \div 5 =$ _____	58	$50 \div 5 =$ _____
19	$30 \div 5 =$ _____	39	$40 \div 5 =$ _____	59	$50 \div 5 =$ _____
20	$50 \div 5 =$ _____	40	$5 \div 5 =$ _____	60	$25 \div 5 =$ _____

Time taken

:

🕒 3 minute time limit 🕒

Score

60

What's your rock status?

WANNABE

< 18 correct in 3 mins

GARAGE ROCKER

18-19 correct in 3 mins

BUSKER

20-21 correct in 3 mins

GIGGER

22-24 correct in 3 mins

UNSIGNED ACT

25-29 correct in 3 mins

BREAKTHROUGH ARTIST

30-35 correct in 3 mins

SUPPORT ACT

36-44 correct in 3 mins

HEADLINER

45-59 correct in 3 mins

ROCK STAR

All correct in \leq 3mins

ROCK LEGEND

All correct in \leq 2min

ROCK HERO

All correct in \leq 1 min

**TIMES TABLES
ROCK STARS**

Name: _____

Week 29 Session 3

2020-21

2s 5s and 10s

3 a week

Times Tables Rock Stars

5 Times Tables

Licensed to Weston Point Primary School, Runcorn

1	$5 \times 11 =$ _____	21	$5 \times 6 =$ _____	41	$55 \div 5 =$ _____
2	$5 \times 6 =$ _____	22	$5 \times 8 =$ _____	42	$25 \div 5 =$ _____
3	$5 \times 3 =$ _____	23	$5 \times 2 =$ _____	43	$55 \div 5 =$ _____
4	$5 \times 7 =$ _____	24	$5 \times 1 =$ _____	44	$55 \div 5 =$ _____
5	$5 \times 7 =$ _____	25	$5 \times 2 =$ _____	45	$25 \div 5 =$ _____
6	$5 \times 8 =$ _____	26	$5 \times 6 =$ _____	46	$10 \div 5 =$ _____
7	$5 \times 5 =$ _____	27	$5 \times 2 =$ _____	47	$50 \div 5 =$ _____
8	$5 \times 9 =$ _____	28	$5 \times 4 =$ _____	48	$40 \div 5 =$ _____
9	$5 \times 6 =$ _____	29	$5 \times 6 =$ _____	49	$10 \div 5 =$ _____
10	$5 \times 11 =$ _____	30	$5 \times 5 =$ _____	50	$55 \div 5 =$ _____
11	$5 \times 5 =$ _____	31	$55 \div 5 =$ _____	51	$40 \div 5 =$ _____
12	$5 \times 2 =$ _____	32	$20 \div 5 =$ _____	52	$45 \div 5 =$ _____
13	$5 \times 12 =$ _____	33	$45 \div 5 =$ _____	53	$45 \div 5 =$ _____
14	$5 \times 3 =$ _____	34	$35 \div 5 =$ _____	54	$25 \div 5 =$ _____
15	$5 \times 4 =$ _____	35	$50 \div 5 =$ _____	55	$60 \div 5 =$ _____
16	$5 \times 5 =$ _____	36	$45 \div 5 =$ _____	56	$30 \div 5 =$ _____
17	$5 \times 2 =$ _____	37	$40 \div 5 =$ _____	57	$60 \div 5 =$ _____
18	$5 \times 8 =$ _____	38	$55 \div 5 =$ _____	58	$5 \div 5 =$ _____
19	$5 \times 8 =$ _____	39	$25 \div 5 =$ _____	59	$20 \div 5 =$ _____
20	$5 \times 10 =$ _____	40	$10 \div 5 =$ _____	60	$40 \div 5 =$ _____

Time taken

:

🕒 3 minute time limit 🕒

Score

60

Add up your time

Mins

S1 _____

S2 _____

S3 _____

Total _____

Secs

S1 _____

S2 _____

S3 _____

Total _____

Add up your score

S1 _____

S2 _____

S3 _____

Total _____

Name: _____

Week 30 Session 1

2020-21

2s 5s and 10s

3 a week

Times Tables Rock Stars

10 Times Tables

Licensed to Weston Point Primary School, Runcorn

1	$10 \times 7 =$ _____	21	$10 \times 1 =$ _____	41	$11 \times 10 =$ _____
2	$10 \times 10 =$ _____	22	$10 \times 9 =$ _____	42	$12 \times 10 =$ _____
3	$10 \times 10 =$ _____	23	$10 \times 5 =$ _____	43	$12 \times 10 =$ _____
4	$10 \times 11 =$ _____	24	$10 \times 5 =$ _____	44	$8 \times 10 =$ _____
5	$10 \times 7 =$ _____	25	$10 \times 10 =$ _____	45	$10 \times 10 =$ _____
6	$10 \times 2 =$ _____	26	$10 \times 8 =$ _____	46	$10 \times 10 =$ _____
7	$10 \times 2 =$ _____	27	$10 \times 10 =$ _____	47	$7 \times 10 =$ _____
8	$10 \times 10 =$ _____	28	$10 \times 11 =$ _____	48	$6 \times 10 =$ _____
9	$10 \times 4 =$ _____	29	$10 \times 6 =$ _____	49	$9 \times 10 =$ _____
10	$10 \times 8 =$ _____	30	$10 \times 12 =$ _____	50	$3 \times 10 =$ _____
11	$10 \times 1 =$ _____	31	$10 \times 10 =$ _____	51	$3 \times 10 =$ _____
12	$10 \times 3 =$ _____	32	$9 \times 10 =$ _____	52	$8 \times 10 =$ _____
13	$10 \times 2 =$ _____	33	$4 \times 10 =$ _____	53	$11 \times 10 =$ _____
14	$10 \times 7 =$ _____	34	$5 \times 10 =$ _____	54	$2 \times 10 =$ _____
15	$10 \times 1 =$ _____	35	$7 \times 10 =$ _____	55	$6 \times 10 =$ _____
16	$10 \times 7 =$ _____	36	$11 \times 10 =$ _____	56	$3 \times 10 =$ _____
17	$10 \times 7 =$ _____	37	$7 \times 10 =$ _____	57	$12 \times 10 =$ _____
18	$10 \times 12 =$ _____	38	$12 \times 10 =$ _____	58	$2 \times 10 =$ _____
19	$10 \times 9 =$ _____	39	$3 \times 10 =$ _____	59	$4 \times 10 =$ _____
20	$10 \times 10 =$ _____	40	$9 \times 10 =$ _____	60	$8 \times 10 =$ _____

Time taken

:

🕒 3 minute time limit 🕒

Score

60

What's your rock status?

WANNABE

< 18 correct in 3 mins

GARAGE ROCKER

18-19 correct in 3 mins

BUSKER

20-21 correct in 3 mins

GIGGER

22-24 correct in 3 mins

UNSIGNED ACT

25-29 correct in 3 mins

BREAKTHROUGH ARTIST

30-35 correct in 3 mins

SUPPORT ACT

36-44 correct in 3 mins

HEADLINER

45-59 correct in 3 mins

ROCK STAR

All correct in \leq 3mins

ROCK LEGEND

All correct in \leq 2min

ROCK HERO

All correct in \leq 1 min

**TIMES TABLES
ROCK STARS**

Name: _____

Week 30 Session 2

2020-21

2s 5s and 10s

3 a week

Times Tables Rock Stars

10 Times Tables

Licensed to Weston Point Primary School, Runcorn

1	$120 \div 10 =$ _____	21	$60 \div 10 =$ _____	41	$10 \div 10 =$ _____
2	$10 \div 10 =$ _____	22	$10 \div 10 =$ _____	42	$90 \div 10 =$ _____
3	$100 \div 10 =$ _____	23	$80 \div 10 =$ _____	43	$10 \div 10 =$ _____
4	$120 \div 10 =$ _____	24	$110 \div 10 =$ _____	44	$70 \div 10 =$ _____
5	$20 \div 10 =$ _____	25	$40 \div 10 =$ _____	45	$90 \div 10 =$ _____
6	$60 \div 10 =$ _____	26	$20 \div 10 =$ _____	46	$90 \div 10 =$ _____
7	$80 \div 10 =$ _____	27	$50 \div 10 =$ _____	47	$120 \div 10 =$ _____
8	$50 \div 10 =$ _____	28	$90 \div 10 =$ _____	48	$20 \div 10 =$ _____
9	$60 \div 10 =$ _____	29	$50 \div 10 =$ _____	49	$40 \div 10 =$ _____
10	$70 \div 10 =$ _____	30	$60 \div 10 =$ _____	50	$50 \div 10 =$ _____
11	$40 \div 10 =$ _____	31	$60 \div 10 =$ _____	51	$20 \div 10 =$ _____
12	$10 \div 10 =$ _____	32	$80 \div 10 =$ _____	52	$120 \div 10 =$ _____
13	$50 \div 10 =$ _____	33	$90 \div 10 =$ _____	53	$110 \div 10 =$ _____
14	$30 \div 10 =$ _____	34	$90 \div 10 =$ _____	54	$60 \div 10 =$ _____
15	$40 \div 10 =$ _____	35	$50 \div 10 =$ _____	55	$10 \div 10 =$ _____
16	$30 \div 10 =$ _____	36	$20 \div 10 =$ _____	56	$100 \div 10 =$ _____
17	$10 \div 10 =$ _____	37	$50 \div 10 =$ _____	57	$30 \div 10 =$ _____
18	$30 \div 10 =$ _____	38	$50 \div 10 =$ _____	58	$80 \div 10 =$ _____
19	$30 \div 10 =$ _____	39	$60 \div 10 =$ _____	59	$100 \div 10 =$ _____
20	$60 \div 10 =$ _____	40	$60 \div 10 =$ _____	60	$70 \div 10 =$ _____

Time taken

:

🕒 3 minute time limit 🕒

Score

60

What's your rock status?

WANNABE

< 18 correct in 3 mins

GARAGE ROCKER

18-19 correct in 3 mins

BUSKER

20-21 correct in 3 mins

GIGGER

22-24 correct in 3 mins

UNSIGNED ACT

25-29 correct in 3 mins

BREAKTHROUGH ARTIST

30-35 correct in 3 mins

SUPPORT ACT

36-44 correct in 3 mins

HEADLINER

45-59 correct in 3 mins

ROCK STAR

All correct in \leq 3mins

ROCK LEGEND

All correct in \leq 2min

ROCK HERO

All correct in \leq 1 min

**TIMES TABLES
ROCK STARS**

Name: _____

Week 30 Session 3

2020-21

2s 5s and 10s

3 a week

Times Tables Rock Stars

10 Times Tables

Licensed to Weston Point Primary School, Runcorn

1	$10 \times 1 =$ _____	21	$10 \times 12 =$ _____	41	$120 \div 10 =$ _____
2	$10 \times 7 =$ _____	22	$10 \times 1 =$ _____	42	$30 \div 10 =$ _____
3	$10 \times 11 =$ _____	23	$10 \times 5 =$ _____	43	$60 \div 10 =$ _____
4	$10 \times 10 =$ _____	24	$10 \times 3 =$ _____	44	$60 \div 10 =$ _____
5	$10 \times 5 =$ _____	25	$10 \times 6 =$ _____	45	$50 \div 10 =$ _____
6	$10 \times 5 =$ _____	26	$10 \times 6 =$ _____	46	$50 \div 10 =$ _____
7	$10 \times 12 =$ _____	27	$10 \times 10 =$ _____	47	$60 \div 10 =$ _____
8	$10 \times 4 =$ _____	28	$10 \times 3 =$ _____	48	$80 \div 10 =$ _____
9	$10 \times 12 =$ _____	29	$10 \times 7 =$ _____	49	$60 \div 10 =$ _____
10	$10 \times 4 =$ _____	30	$10 \times 7 =$ _____	50	$90 \div 10 =$ _____
11	$10 \times 1 =$ _____	31	$110 \div 10 =$ _____	51	$40 \div 10 =$ _____
12	$10 \times 9 =$ _____	32	$60 \div 10 =$ _____	52	$50 \div 10 =$ _____
13	$10 \times 8 =$ _____	33	$30 \div 10 =$ _____	53	$70 \div 10 =$ _____
14	$10 \times 1 =$ _____	34	$100 \div 10 =$ _____	54	$50 \div 10 =$ _____
15	$10 \times 4 =$ _____	35	$90 \div 10 =$ _____	55	$110 \div 10 =$ _____
16	$10 \times 1 =$ _____	36	$90 \div 10 =$ _____	56	$40 \div 10 =$ _____
17	$10 \times 11 =$ _____	37	$70 \div 10 =$ _____	57	$40 \div 10 =$ _____
18	$10 \times 11 =$ _____	38	$80 \div 10 =$ _____	58	$100 \div 10 =$ _____
19	$10 \times 7 =$ _____	39	$50 \div 10 =$ _____	59	$50 \div 10 =$ _____
20	$10 \times 7 =$ _____	40	$80 \div 10 =$ _____	60	$10 \div 10 =$ _____

Time taken

:

🕒 3 minute time limit 🕒

Score

60

Add up your time

Mins

S1 _____

S2 _____

S3 _____

Total _____

Secs

S1 _____

S2 _____

S3 _____

Total _____

Add up your score

S1 _____

S2 _____

S3 _____

Total _____

Name: _____

Week 31 Session 1

2020-21

2s 5s and 10s

3 a week

Times Tables Rock Stars

2 Times Tables

Licensed to Weston Point Primary School, Runcorn

1	$2 \times 3 =$ _____	21	$2 \times 6 =$ _____	41	$11 \times 2 =$ _____
2	$2 \times 6 =$ _____	22	$2 \times 11 =$ _____	42	$10 \times 2 =$ _____
3	$2 \times 11 =$ _____	23	$2 \times 6 =$ _____	43	$3 \times 2 =$ _____
4	$2 \times 10 =$ _____	24	$2 \times 1 =$ _____	44	$7 \times 2 =$ _____
5	$2 \times 1 =$ _____	25	$2 \times 4 =$ _____	45	$11 \times 2 =$ _____
6	$2 \times 5 =$ _____	26	$2 \times 8 =$ _____	46	$2 \times 2 =$ _____
7	$2 \times 11 =$ _____	27	$2 \times 6 =$ _____	47	$9 \times 2 =$ _____
8	$2 \times 11 =$ _____	28	$2 \times 3 =$ _____	48	$3 \times 2 =$ _____
9	$2 \times 4 =$ _____	29	$2 \times 12 =$ _____	49	$9 \times 2 =$ _____
10	$2 \times 5 =$ _____	30	$2 \times 1 =$ _____	50	$3 \times 2 =$ _____
11	$2 \times 1 =$ _____	31	$2 \times 2 =$ _____	51	$6 \times 2 =$ _____
12	$2 \times 3 =$ _____	32	$10 \times 2 =$ _____	52	$3 \times 2 =$ _____
13	$2 \times 7 =$ _____	33	$7 \times 2 =$ _____	53	$3 \times 2 =$ _____
14	$2 \times 2 =$ _____	34	$12 \times 2 =$ _____	54	$8 \times 2 =$ _____
15	$2 \times 5 =$ _____	35	$1 \times 2 =$ _____	55	$7 \times 2 =$ _____
16	$2 \times 2 =$ _____	36	$4 \times 2 =$ _____	56	$4 \times 2 =$ _____
17	$2 \times 2 =$ _____	37	$12 \times 2 =$ _____	57	$7 \times 2 =$ _____
18	$2 \times 12 =$ _____	38	$8 \times 2 =$ _____	58	$6 \times 2 =$ _____
19	$2 \times 8 =$ _____	39	$11 \times 2 =$ _____	59	$9 \times 2 =$ _____
20	$2 \times 10 =$ _____	40	$10 \times 2 =$ _____	60	$12 \times 2 =$ _____

Time taken

:

🕒 3 minute time limit 🕒

Score

60

What's your rock status?

WANNABE

< 18 correct in 3 mins

GARAGE ROCKER

18-19 correct in 3 mins

BUSKER

20-21 correct in 3 mins

GIGGER

22-24 correct in 3 mins

UNSIGNED ACT

25-29 correct in 3 mins

BREAKTHROUGH ARTIST

30-35 correct in 3 mins

SUPPORT ACT

36-44 correct in 3 mins

HEADLINER

45-59 correct in 3 mins

ROCK STAR

All correct in \leq 3mins

ROCK LEGEND

All correct in \leq 2min

ROCK HERO

All correct in \leq 1 min

**TIMES TABLES
ROCK STARS**

Name: _____

Week 31 Session 2

2020-21

2s 5s and 10s

3 a week

Times Tables Rock Stars

2 Times Tables

Licensed to Weston Point Primary School, Runcorn

1	$2 \div 2 =$ _____	21	$4 \div 2 =$ _____	41	$18 \div 2 =$ _____
2	$18 \div 2 =$ _____	22	$12 \div 2 =$ _____	42	$12 \div 2 =$ _____
3	$6 \div 2 =$ _____	23	$6 \div 2 =$ _____	43	$24 \div 2 =$ _____
4	$24 \div 2 =$ _____	24	$22 \div 2 =$ _____	44	$14 \div 2 =$ _____
5	$24 \div 2 =$ _____	25	$20 \div 2 =$ _____	45	$6 \div 2 =$ _____
6	$4 \div 2 =$ _____	26	$6 \div 2 =$ _____	46	$22 \div 2 =$ _____
7	$24 \div 2 =$ _____	27	$22 \div 2 =$ _____	47	$12 \div 2 =$ _____
8	$20 \div 2 =$ _____	28	$24 \div 2 =$ _____	48	$22 \div 2 =$ _____
9	$6 \div 2 =$ _____	29	$22 \div 2 =$ _____	49	$6 \div 2 =$ _____
10	$18 \div 2 =$ _____	30	$18 \div 2 =$ _____	50	$22 \div 2 =$ _____
11	$22 \div 2 =$ _____	31	$4 \div 2 =$ _____	51	$6 \div 2 =$ _____
12	$20 \div 2 =$ _____	32	$20 \div 2 =$ _____	52	$16 \div 2 =$ _____
13	$20 \div 2 =$ _____	33	$8 \div 2 =$ _____	53	$16 \div 2 =$ _____
14	$14 \div 2 =$ _____	34	$12 \div 2 =$ _____	54	$20 \div 2 =$ _____
15	$20 \div 2 =$ _____	35	$16 \div 2 =$ _____	55	$14 \div 2 =$ _____
16	$14 \div 2 =$ _____	36	$12 \div 2 =$ _____	56	$12 \div 2 =$ _____
17	$18 \div 2 =$ _____	37	$10 \div 2 =$ _____	57	$14 \div 2 =$ _____
18	$10 \div 2 =$ _____	38	$12 \div 2 =$ _____	58	$4 \div 2 =$ _____
19	$14 \div 2 =$ _____	39	$16 \div 2 =$ _____	59	$14 \div 2 =$ _____
20	$18 \div 2 =$ _____	40	$2 \div 2 =$ _____	60	$14 \div 2 =$ _____

Time taken

:

🕒 3 minute time limit 🕒

Score

60

What's your rock status?

WANNABE

< 18 correct in 3 mins

GARAGE ROCKER

18-19 correct in 3 mins

BUSKER

20-21 correct in 3 mins

GIGGER

22-24 correct in 3 mins

UNSIGNED ACT

25-29 correct in 3 mins

BREAKTHROUGH ARTIST

30-35 correct in 3 mins

SUPPORT ACT

36-44 correct in 3 mins

HEADLINER

45-59 correct in 3 mins

ROCK STAR

All correct in \leq 3mins

ROCK LEGEND

All correct in \leq 2min

ROCK HERO

All correct in \leq 1 min

**TIMES TABLES
ROCK STARS**

Name: _____

Week 31 Session 3

2020-21

2s 5s and 10s

3 a week

Times Tables Rock Stars

2 Times Tables

Licensed to Weston Point Primary School, Runcorn

1	$2 \times 4 =$ _____	21	$2 \times 9 =$ _____	41	$2 \div 2 =$ _____
2	$2 \times 11 =$ _____	22	$2 \times 10 =$ _____	42	$22 \div 2 =$ _____
3	$2 \times 5 =$ _____	23	$2 \times 8 =$ _____	43	$16 \div 2 =$ _____
4	$2 \times 8 =$ _____	24	$2 \times 2 =$ _____	44	$22 \div 2 =$ _____
5	$2 \times 3 =$ _____	25	$2 \times 12 =$ _____	45	$14 \div 2 =$ _____
6	$2 \times 6 =$ _____	26	$2 \times 6 =$ _____	46	$6 \div 2 =$ _____
7	$2 \times 10 =$ _____	27	$2 \times 10 =$ _____	47	$16 \div 2 =$ _____
8	$2 \times 4 =$ _____	28	$2 \times 10 =$ _____	48	$6 \div 2 =$ _____
9	$2 \times 9 =$ _____	29	$2 \times 11 =$ _____	49	$14 \div 2 =$ _____
10	$2 \times 6 =$ _____	30	$2 \times 12 =$ _____	50	$20 \div 2 =$ _____
11	$2 \times 12 =$ _____	31	$8 \div 2 =$ _____	51	$16 \div 2 =$ _____
12	$2 \times 12 =$ _____	32	$10 \div 2 =$ _____	52	$10 \div 2 =$ _____
13	$2 \times 4 =$ _____	33	$20 \div 2 =$ _____	53	$22 \div 2 =$ _____
14	$2 \times 9 =$ _____	34	$12 \div 2 =$ _____	54	$20 \div 2 =$ _____
15	$2 \times 10 =$ _____	35	$2 \div 2 =$ _____	55	$20 \div 2 =$ _____
16	$2 \times 2 =$ _____	36	$22 \div 2 =$ _____	56	$2 \div 2 =$ _____
17	$2 \times 6 =$ _____	37	$4 \div 2 =$ _____	57	$16 \div 2 =$ _____
18	$2 \times 2 =$ _____	38	$12 \div 2 =$ _____	58	$24 \div 2 =$ _____
19	$2 \times 5 =$ _____	39	$16 \div 2 =$ _____	59	$8 \div 2 =$ _____
20	$2 \times 11 =$ _____	40	$16 \div 2 =$ _____	60	$8 \div 2 =$ _____

Time taken

:

🕒 3 minute time limit 🕒

Score

60

Add up your time

Mins
S1 _____
S2 _____
S3 _____
Total _____

Secs
S1 _____
S2 _____
S3 _____
Total _____

Add up your score
S1 _____
S2 _____
S3 _____
Total _____

Name: _____

Week 32 Session 1

2020-21

2s 5s and 10s

3 a week

Times Tables Rock Stars

5 Times Tables

Licensed to Weston Point Primary School, Runcorn

1	$5 \times 12 =$ _____	21	$5 \times 1 =$ _____	41	$10 \times 5 =$ _____
2	$5 \times 11 =$ _____	22	$5 \times 6 =$ _____	42	$3 \times 5 =$ _____
3	$5 \times 10 =$ _____	23	$5 \times 10 =$ _____	43	$1 \times 5 =$ _____
4	$5 \times 9 =$ _____	24	$5 \times 1 =$ _____	44	$7 \times 5 =$ _____
5	$5 \times 12 =$ _____	25	$5 \times 12 =$ _____	45	$1 \times 5 =$ _____
6	$5 \times 11 =$ _____	26	$5 \times 9 =$ _____	46	$11 \times 5 =$ _____
7	$5 \times 1 =$ _____	27	$5 \times 10 =$ _____	47	$2 \times 5 =$ _____
8	$5 \times 6 =$ _____	28	$5 \times 4 =$ _____	48	$7 \times 5 =$ _____
9	$5 \times 4 =$ _____	29	$5 \times 2 =$ _____	49	$4 \times 5 =$ _____
10	$5 \times 3 =$ _____	30	$5 \times 6 =$ _____	50	$2 \times 5 =$ _____
11	$5 \times 1 =$ _____	31	$12 \times 5 =$ _____	51	$7 \times 5 =$ _____
12	$5 \times 12 =$ _____	32	$5 \times 5 =$ _____	52	$3 \times 5 =$ _____
13	$5 \times 3 =$ _____	33	$3 \times 5 =$ _____	53	$12 \times 5 =$ _____
14	$5 \times 12 =$ _____	34	$4 \times 5 =$ _____	54	$11 \times 5 =$ _____
15	$5 \times 3 =$ _____	35	$1 \times 5 =$ _____	55	$9 \times 5 =$ _____
16	$5 \times 10 =$ _____	36	$11 \times 5 =$ _____	56	$11 \times 5 =$ _____
17	$5 \times 12 =$ _____	37	$5 \times 5 =$ _____	57	$12 \times 5 =$ _____
18	$5 \times 9 =$ _____	38	$5 \times 5 =$ _____	58	$4 \times 5 =$ _____
19	$5 \times 9 =$ _____	39	$7 \times 5 =$ _____	59	$4 \times 5 =$ _____
20	$5 \times 6 =$ _____	40	$4 \times 5 =$ _____	60	$9 \times 5 =$ _____

Time taken

:

🕒 3 minute time limit 🕒

Score

60

What's your rock status?

WANNABE

< 18 correct in 3 mins

GARAGE ROCKER

18-19 correct in 3 mins

BUSKER

20-21 correct in 3 mins

GIGGER

22-24 correct in 3 mins

UNSIGNED ACT

25-29 correct in 3 mins

BREAKTHROUGH ARTIST

30-35 correct in 3 mins

SUPPORT ACT

36-44 correct in 3 mins

HEADLINER

45-59 correct in 3 mins

ROCK STAR

All correct in \leq 3mins

ROCK LEGEND

All correct in \leq 2min

ROCK HERO

All correct in \leq 1 min

**TIMES TABLES
ROCK STARS**

Name: _____

Week 32 Session 2

2020-21

2s 5s and 10s

3 a week

Times Tables Rock Stars

5 Times Tables

Licensed to Weston Point Primary School, Runcorn

1	$15 \div 5 =$ _____	21	$10 \div 5 =$ _____	41	$35 \div 5 =$ _____
2	$55 \div 5 =$ _____	22	$30 \div 5 =$ _____	42	$55 \div 5 =$ _____
3	$45 \div 5 =$ _____	23	$30 \div 5 =$ _____	43	$50 \div 5 =$ _____
4	$5 \div 5 =$ _____	24	$50 \div 5 =$ _____	44	$40 \div 5 =$ _____
5	$20 \div 5 =$ _____	25	$60 \div 5 =$ _____	45	$5 \div 5 =$ _____
6	$25 \div 5 =$ _____	26	$15 \div 5 =$ _____	46	$25 \div 5 =$ _____
7	$15 \div 5 =$ _____	27	$20 \div 5 =$ _____	47	$60 \div 5 =$ _____
8	$5 \div 5 =$ _____	28	$20 \div 5 =$ _____	48	$50 \div 5 =$ _____
9	$40 \div 5 =$ _____	29	$55 \div 5 =$ _____	49	$5 \div 5 =$ _____
10	$50 \div 5 =$ _____	30	$30 \div 5 =$ _____	50	$55 \div 5 =$ _____
11	$40 \div 5 =$ _____	31	$50 \div 5 =$ _____	51	$50 \div 5 =$ _____
12	$60 \div 5 =$ _____	32	$25 \div 5 =$ _____	52	$10 \div 5 =$ _____
13	$10 \div 5 =$ _____	33	$55 \div 5 =$ _____	53	$50 \div 5 =$ _____
14	$45 \div 5 =$ _____	34	$30 \div 5 =$ _____	54	$10 \div 5 =$ _____
15	$25 \div 5 =$ _____	35	$10 \div 5 =$ _____	55	$50 \div 5 =$ _____
16	$45 \div 5 =$ _____	36	$15 \div 5 =$ _____	56	$20 \div 5 =$ _____
17	$20 \div 5 =$ _____	37	$55 \div 5 =$ _____	57	$15 \div 5 =$ _____
18	$25 \div 5 =$ _____	38	$15 \div 5 =$ _____	58	$30 \div 5 =$ _____
19	$10 \div 5 =$ _____	39	$60 \div 5 =$ _____	59	$40 \div 5 =$ _____
20	$10 \div 5 =$ _____	40	$10 \div 5 =$ _____	60	$30 \div 5 =$ _____

Time taken

:

🕒 3 minute time limit 🕒

Score

60

What's your rock status?

WANNABE

< 18 correct in 3 mins

GARAGE ROCKER

18-19 correct in 3 mins

BUSKER

20-21 correct in 3 mins

GIGGER

22-24 correct in 3 mins

UNSIGNED ACT

25-29 correct in 3 mins

BREAKTHROUGH ARTIST

30-35 correct in 3 mins

SUPPORT ACT

36-44 correct in 3 mins

HEADLINER

45-59 correct in 3 mins

ROCK STAR

All correct in \leq 3mins

ROCK LEGEND

All correct in \leq 2min

ROCK HERO

All correct in \leq 1 min

**TIMES TABLES
ROCK STARS**

Name: _____

Week 32 Session 3

2020-21

2s 5s and 10s

3 a week

Times Tables Rock Stars

5 Times Tables

Licensed to Weston Point Primary School, Runcorn

1	$5 \times 10 =$ _____	21	$5 \times 11 =$ _____	41	$10 \div 5 =$ _____
2	$5 \times 6 =$ _____	22	$5 \times 5 =$ _____	42	$40 \div 5 =$ _____
3	$5 \times 3 =$ _____	23	$5 \times 4 =$ _____	43	$25 \div 5 =$ _____
4	$5 \times 4 =$ _____	24	$5 \times 2 =$ _____	44	$25 \div 5 =$ _____
5	$5 \times 3 =$ _____	25	$5 \times 8 =$ _____	45	$35 \div 5 =$ _____
6	$5 \times 3 =$ _____	26	$5 \times 7 =$ _____	46	$5 \div 5 =$ _____
7	$5 \times 7 =$ _____	27	$5 \times 1 =$ _____	47	$60 \div 5 =$ _____
8	$5 \times 7 =$ _____	28	$5 \times 9 =$ _____	48	$60 \div 5 =$ _____
9	$5 \times 9 =$ _____	29	$5 \times 2 =$ _____	49	$10 \div 5 =$ _____
10	$5 \times 1 =$ _____	30	$5 \times 6 =$ _____	50	$15 \div 5 =$ _____
11	$5 \times 6 =$ _____	31	$50 \div 5 =$ _____	51	$5 \div 5 =$ _____
12	$5 \times 4 =$ _____	32	$20 \div 5 =$ _____	52	$15 \div 5 =$ _____
13	$5 \times 5 =$ _____	33	$55 \div 5 =$ _____	53	$55 \div 5 =$ _____
14	$5 \times 5 =$ _____	34	$15 \div 5 =$ _____	54	$30 \div 5 =$ _____
15	$5 \times 12 =$ _____	35	$50 \div 5 =$ _____	55	$35 \div 5 =$ _____
16	$5 \times 10 =$ _____	36	$45 \div 5 =$ _____	56	$35 \div 5 =$ _____
17	$5 \times 3 =$ _____	37	$35 \div 5 =$ _____	57	$35 \div 5 =$ _____
18	$5 \times 2 =$ _____	38	$60 \div 5 =$ _____	58	$15 \div 5 =$ _____
19	$5 \times 7 =$ _____	39	$25 \div 5 =$ _____	59	$55 \div 5 =$ _____
20	$5 \times 6 =$ _____	40	$45 \div 5 =$ _____	60	$55 \div 5 =$ _____

Time taken

:

🕒 3 minute time limit 🕒

Score

60

Add up your time

Mins
S1 _____
S2 _____
S3 _____
Total _____

Secs
S1 _____
S2 _____
S3 _____
Total _____

Add up your score
S1 _____
S2 _____
S3 _____
Total _____

Name: _____

Week 33 Session 1

2020-21

2s 5s and 10s

3 a week

Times Tables Rock Stars

10 Times Tables

Licensed to Weston Point Primary School, Runcorn

1	$10 \times 2 =$ _____	21	$10 \times 8 =$ _____	41	$12 \times 10 =$ _____
2	$10 \times 7 =$ _____	22	$10 \times 6 =$ _____	42	$7 \times 10 =$ _____
3	$10 \times 10 =$ _____	23	$10 \times 11 =$ _____	43	$5 \times 10 =$ _____
4	$10 \times 12 =$ _____	24	$10 \times 7 =$ _____	44	$5 \times 10 =$ _____
5	$10 \times 11 =$ _____	25	$10 \times 3 =$ _____	45	$1 \times 10 =$ _____
6	$10 \times 9 =$ _____	26	$10 \times 9 =$ _____	46	$12 \times 10 =$ _____
7	$10 \times 6 =$ _____	27	$10 \times 4 =$ _____	47	$3 \times 10 =$ _____
8	$10 \times 10 =$ _____	28	$10 \times 9 =$ _____	48	$12 \times 10 =$ _____
9	$10 \times 4 =$ _____	29	$10 \times 12 =$ _____	49	$8 \times 10 =$ _____
10	$10 \times 6 =$ _____	30	$10 \times 6 =$ _____	50	$1 \times 10 =$ _____
11	$10 \times 9 =$ _____	31	$7 \times 10 =$ _____	51	$12 \times 10 =$ _____
12	$10 \times 11 =$ _____	32	$11 \times 10 =$ _____	52	$5 \times 10 =$ _____
13	$10 \times 9 =$ _____	33	$8 \times 10 =$ _____	53	$10 \times 10 =$ _____
14	$10 \times 5 =$ _____	34	$3 \times 10 =$ _____	54	$7 \times 10 =$ _____
15	$10 \times 7 =$ _____	35	$5 \times 10 =$ _____	55	$7 \times 10 =$ _____
16	$10 \times 8 =$ _____	36	$10 \times 10 =$ _____	56	$8 \times 10 =$ _____
17	$10 \times 7 =$ _____	37	$4 \times 10 =$ _____	57	$8 \times 10 =$ _____
18	$10 \times 5 =$ _____	38	$10 \times 10 =$ _____	58	$4 \times 10 =$ _____
19	$10 \times 7 =$ _____	39	$12 \times 10 =$ _____	59	$9 \times 10 =$ _____
20	$10 \times 7 =$ _____	40	$3 \times 10 =$ _____	60	$4 \times 10 =$ _____

Time taken

:

🕒 3 minute time limit 🕒

Score

60

What's your rock status?

WANNABE

< 18 correct in 3 mins

GARAGE ROCKER

18-19 correct in 3 mins

BUSKER

20-21 correct in 3 mins

GIGGER

22-24 correct in 3 mins

UNSIGNED ACT

25-29 correct in 3 mins

BREAKTHROUGH ARTIST

30-35 correct in 3 mins

SUPPORT ACT

36-44 correct in 3 mins

HEADLINER

45-59 correct in 3 mins

ROCK STAR

All correct in \leq 3mins

ROCK LEGEND

All correct in \leq 2min

ROCK HERO

All correct in \leq 1 min

**TIMES TABLES
ROCK STARS**

Name: _____

Week 33 Session 2

2020-21

2s 5s and 10s

3 a week

Times Tables Rock Stars

10 Times Tables

Licensed to Weston Point Primary School, Runcorn

1	$20 \div 10 =$ _____	21	$120 \div 10 =$ _____	41	$40 \div 10 =$ _____
2	$40 \div 10 =$ _____	22	$30 \div 10 =$ _____	42	$70 \div 10 =$ _____
3	$120 \div 10 =$ _____	23	$20 \div 10 =$ _____	43	$70 \div 10 =$ _____
4	$90 \div 10 =$ _____	24	$30 \div 10 =$ _____	44	$30 \div 10 =$ _____
5	$100 \div 10 =$ _____	25	$30 \div 10 =$ _____	45	$120 \div 10 =$ _____
6	$20 \div 10 =$ _____	26	$10 \div 10 =$ _____	46	$120 \div 10 =$ _____
7	$110 \div 10 =$ _____	27	$120 \div 10 =$ _____	47	$60 \div 10 =$ _____
8	$30 \div 10 =$ _____	28	$20 \div 10 =$ _____	48	$100 \div 10 =$ _____
9	$10 \div 10 =$ _____	29	$20 \div 10 =$ _____	49	$10 \div 10 =$ _____
10	$50 \div 10 =$ _____	30	$40 \div 10 =$ _____	50	$40 \div 10 =$ _____
11	$40 \div 10 =$ _____	31	$40 \div 10 =$ _____	51	$70 \div 10 =$ _____
12	$30 \div 10 =$ _____	32	$20 \div 10 =$ _____	52	$90 \div 10 =$ _____
13	$110 \div 10 =$ _____	33	$80 \div 10 =$ _____	53	$100 \div 10 =$ _____
14	$20 \div 10 =$ _____	34	$10 \div 10 =$ _____	54	$120 \div 10 =$ _____
15	$30 \div 10 =$ _____	35	$50 \div 10 =$ _____	55	$40 \div 10 =$ _____
16	$50 \div 10 =$ _____	36	$20 \div 10 =$ _____	56	$80 \div 10 =$ _____
17	$50 \div 10 =$ _____	37	$50 \div 10 =$ _____	57	$30 \div 10 =$ _____
18	$40 \div 10 =$ _____	38	$70 \div 10 =$ _____	58	$20 \div 10 =$ _____
19	$80 \div 10 =$ _____	39	$60 \div 10 =$ _____	59	$30 \div 10 =$ _____
20	$70 \div 10 =$ _____	40	$120 \div 10 =$ _____	60	$80 \div 10 =$ _____

Time taken

:

🕒 3 minute time limit 🕒

Score

60

What's your rock status?

WANNABE

< 18 correct in 3 mins

GARAGE ROCKER

18-19 correct in 3 mins

BUSKER

20-21 correct in 3 mins

GIGGER

22-24 correct in 3 mins

UNSIGNED ACT

25-29 correct in 3 mins

BREAKTHROUGH ARTIST

30-35 correct in 3 mins

SUPPORT ACT

36-44 correct in 3 mins

HEADLINER

45-59 correct in 3 mins

ROCK STAR

All correct in \leq 3mins

ROCK LEGEND

All correct in \leq 2min

ROCK HERO

All correct in \leq 1 min

**TIMES TABLES
ROCK STARS**

Name: _____

Week 33 Session 3

2020-21

2s 5s and 10s

3 a week

Times Tables Rock Stars



10 Times Tables

Licensed to Weston Point Primary School, Runcorn

1	$10 \times 7 =$ _____	21	$10 \times 1 =$ _____	41	$20 \div 10 =$ _____
2	$10 \times 4 =$ _____	22	$10 \times 2 =$ _____	42	$70 \div 10 =$ _____
3	$10 \times 2 =$ _____	23	$10 \times 9 =$ _____	43	$120 \div 10 =$ _____
4	$10 \times 7 =$ _____	24	$10 \times 8 =$ _____	44	$120 \div 10 =$ _____
5	$10 \times 12 =$ _____	25	$10 \times 5 =$ _____	45	$90 \div 10 =$ _____
6	$10 \times 7 =$ _____	26	$10 \times 12 =$ _____	46	$60 \div 10 =$ _____
7	$10 \times 9 =$ _____	27	$10 \times 4 =$ _____	47	$40 \div 10 =$ _____
8	$10 \times 9 =$ _____	28	$10 \times 10 =$ _____	48	$50 \div 10 =$ _____
9	$10 \times 11 =$ _____	29	$10 \times 2 =$ _____	49	$100 \div 10 =$ _____
10	$10 \times 4 =$ _____	30	$10 \times 6 =$ _____	50	$40 \div 10 =$ _____
11	$10 \times 11 =$ _____	31	$90 \div 10 =$ _____	51	$70 \div 10 =$ _____
12	$10 \times 11 =$ _____	32	$110 \div 10 =$ _____	52	$90 \div 10 =$ _____
13	$10 \times 5 =$ _____	33	$70 \div 10 =$ _____	53	$10 \div 10 =$ _____
14	$10 \times 8 =$ _____	34	$60 \div 10 =$ _____	54	$70 \div 10 =$ _____
15	$10 \times 2 =$ _____	35	$70 \div 10 =$ _____	55	$40 \div 10 =$ _____
16	$10 \times 10 =$ _____	36	$10 \div 10 =$ _____	56	$70 \div 10 =$ _____
17	$10 \times 5 =$ _____	37	$40 \div 10 =$ _____	57	$10 \div 10 =$ _____
18	$10 \times 12 =$ _____	38	$50 \div 10 =$ _____	58	$80 \div 10 =$ _____
19	$10 \times 8 =$ _____	39	$110 \div 10 =$ _____	59	$10 \div 10 =$ _____
20	$10 \times 2 =$ _____	40	$20 \div 10 =$ _____	60	$100 \div 10 =$ _____

Time taken

:

 3 minute time limit 

Score

60

Add up your time

Mins	
S1	_____
S2	_____
S3	_____
Total	_____

Secs	
S1	_____
S2	_____
S3	_____
Total	_____

Add up your score	
S1	_____
S2	_____
S3	_____
Total	_____

Name: _____

Week 34 Session 1

2020-21

2s 5s and 10s

3 a week

Times Tables Rock Stars

10 Times Tables

Licensed to Weston Point Primary School, Runcorn

1	$10 \times 8 =$ _____	21	$10 \times 2 =$ _____	41	$3 \times 10 =$ _____
2	$10 \times 4 =$ _____	22	$10 \times 8 =$ _____	42	$8 \times 10 =$ _____
3	$10 \times 2 =$ _____	23	$10 \times 1 =$ _____	43	$12 \times 10 =$ _____
4	$10 \times 7 =$ _____	24	$10 \times 12 =$ _____	44	$2 \times 10 =$ _____
5	$10 \times 4 =$ _____	25	$10 \times 8 =$ _____	45	$10 \times 10 =$ _____
6	$10 \times 5 =$ _____	26	$10 \times 6 =$ _____	46	$7 \times 10 =$ _____
7	$10 \times 12 =$ _____	27	$10 \times 7 =$ _____	47	$6 \times 10 =$ _____
8	$10 \times 2 =$ _____	28	$10 \times 2 =$ _____	48	$11 \times 10 =$ _____
9	$10 \times 3 =$ _____	29	$10 \times 6 =$ _____	49	$10 \times 10 =$ _____
10	$10 \times 1 =$ _____	30	$10 \times 8 =$ _____	50	$7 \times 10 =$ _____
11	$10 \times 12 =$ _____	31	$3 \times 10 =$ _____	51	$7 \times 10 =$ _____
12	$10 \times 1 =$ _____	32	$12 \times 10 =$ _____	52	$10 \times 10 =$ _____
13	$10 \times 3 =$ _____	33	$7 \times 10 =$ _____	53	$2 \times 10 =$ _____
14	$10 \times 1 =$ _____	34	$7 \times 10 =$ _____	54	$9 \times 10 =$ _____
15	$10 \times 5 =$ _____	35	$8 \times 10 =$ _____	55	$5 \times 10 =$ _____
16	$10 \times 11 =$ _____	36	$9 \times 10 =$ _____	56	$9 \times 10 =$ _____
17	$10 \times 4 =$ _____	37	$3 \times 10 =$ _____	57	$7 \times 10 =$ _____
18	$10 \times 2 =$ _____	38	$1 \times 10 =$ _____	58	$9 \times 10 =$ _____
19	$10 \times 11 =$ _____	39	$4 \times 10 =$ _____	59	$11 \times 10 =$ _____
20	$10 \times 6 =$ _____	40	$4 \times 10 =$ _____	60	$12 \times 10 =$ _____

Time taken

:

🕒 3 minute time limit 🕒

Score

60

What's your rock status?

WANNABE

< 18 correct in 3 mins

GARAGE ROCKER

18-19 correct in 3 mins

BUSKER

20-21 correct in 3 mins

GIGGER

22-24 correct in 3 mins

UNSIGNED ACT

25-29 correct in 3 mins

BREAKTHROUGH ARTIST

30-35 correct in 3 mins

SUPPORT ACT

36-44 correct in 3 mins

HEADLINER

45-59 correct in 3 mins

ROCK STAR

All correct in \leq 3mins

ROCK LEGEND

All correct in \leq 2min

ROCK HERO

All correct in \leq 1 min

**TIMES TABLES
ROCK STARS**

Name: _____

Week 34 Session 2

2020-21

2s 5s and 10s

3 a week

Times Tables Rock Stars

10 Times Tables

Licensed to Weston Point Primary School, Runcorn

1	$20 \div 10 =$ _____	21	$120 \div 10 =$ _____	41	$60 \div 10 =$ _____
2	$110 \div 10 =$ _____	22	$60 \div 10 =$ _____	42	$100 \div 10 =$ _____
3	$90 \div 10 =$ _____	23	$70 \div 10 =$ _____	43	$80 \div 10 =$ _____
4	$50 \div 10 =$ _____	24	$50 \div 10 =$ _____	44	$70 \div 10 =$ _____
5	$40 \div 10 =$ _____	25	$30 \div 10 =$ _____	45	$30 \div 10 =$ _____
6	$50 \div 10 =$ _____	26	$110 \div 10 =$ _____	46	$90 \div 10 =$ _____
7	$70 \div 10 =$ _____	27	$50 \div 10 =$ _____	47	$110 \div 10 =$ _____
8	$50 \div 10 =$ _____	28	$80 \div 10 =$ _____	48	$10 \div 10 =$ _____
9	$50 \div 10 =$ _____	29	$100 \div 10 =$ _____	49	$40 \div 10 =$ _____
10	$70 \div 10 =$ _____	30	$70 \div 10 =$ _____	50	$90 \div 10 =$ _____
11	$40 \div 10 =$ _____	31	$110 \div 10 =$ _____	51	$50 \div 10 =$ _____
12	$40 \div 10 =$ _____	32	$110 \div 10 =$ _____	52	$80 \div 10 =$ _____
13	$100 \div 10 =$ _____	33	$80 \div 10 =$ _____	53	$50 \div 10 =$ _____
14	$40 \div 10 =$ _____	34	$120 \div 10 =$ _____	54	$10 \div 10 =$ _____
15	$110 \div 10 =$ _____	35	$50 \div 10 =$ _____	55	$110 \div 10 =$ _____
16	$60 \div 10 =$ _____	36	$60 \div 10 =$ _____	56	$110 \div 10 =$ _____
17	$100 \div 10 =$ _____	37	$80 \div 10 =$ _____	57	$90 \div 10 =$ _____
18	$50 \div 10 =$ _____	38	$40 \div 10 =$ _____	58	$100 \div 10 =$ _____
19	$40 \div 10 =$ _____	39	$40 \div 10 =$ _____	59	$20 \div 10 =$ _____
20	$10 \div 10 =$ _____	40	$90 \div 10 =$ _____	60	$40 \div 10 =$ _____

Time taken

:

🕒 3 minute time limit 🕒

Score

60

What's your rock status?

WANNABE

< 18 correct in 3 mins

GARAGE ROCKER

18-19 correct in 3 mins

BUSKER

20-21 correct in 3 mins

GIGGER

22-24 correct in 3 mins

UNSIGNED ACT

25-29 correct in 3 mins

BREAKTHROUGH ARTIST

30-35 correct in 3 mins

SUPPORT ACT

36-44 correct in 3 mins

HEADLINER

45-59 correct in 3 mins

ROCK STAR

All correct in \leq 3mins

ROCK LEGEND

All correct in \leq 2min

ROCK HERO

All correct in \leq 1 min

**TIMES TABLES
ROCK STARS**

Name: _____

Week 34 Session 3

2020-21

2s 5s and 10s

3 a week

Times Tables Rock Stars

10 Times Tables

Licensed to Weston Point Primary School, Runcorn

1	$10 \times 1 =$ _____	21	$10 \times 9 =$ _____	41	$50 \div 10 =$ _____
2	$10 \times 2 =$ _____	22	$10 \times 4 =$ _____	42	$20 \div 10 =$ _____
3	$10 \times 10 =$ _____	23	$10 \times 10 =$ _____	43	$30 \div 10 =$ _____
4	$10 \times 4 =$ _____	24	$10 \times 11 =$ _____	44	$100 \div 10 =$ _____
5	$10 \times 1 =$ _____	25	$10 \times 11 =$ _____	45	$30 \div 10 =$ _____
6	$10 \times 2 =$ _____	26	$10 \times 11 =$ _____	46	$110 \div 10 =$ _____
7	$10 \times 6 =$ _____	27	$10 \times 6 =$ _____	47	$110 \div 10 =$ _____
8	$10 \times 11 =$ _____	28	$10 \times 5 =$ _____	48	$50 \div 10 =$ _____
9	$10 \times 5 =$ _____	29	$10 \times 3 =$ _____	49	$90 \div 10 =$ _____
10	$10 \times 7 =$ _____	30	$10 \times 2 =$ _____	50	$100 \div 10 =$ _____
11	$10 \times 9 =$ _____	31	$60 \div 10 =$ _____	51	$100 \div 10 =$ _____
12	$10 \times 10 =$ _____	32	$90 \div 10 =$ _____	52	$120 \div 10 =$ _____
13	$10 \times 12 =$ _____	33	$70 \div 10 =$ _____	53	$50 \div 10 =$ _____
14	$10 \times 10 =$ _____	34	$30 \div 10 =$ _____	54	$40 \div 10 =$ _____
15	$10 \times 10 =$ _____	35	$90 \div 10 =$ _____	55	$70 \div 10 =$ _____
16	$10 \times 12 =$ _____	36	$20 \div 10 =$ _____	56	$110 \div 10 =$ _____
17	$10 \times 3 =$ _____	37	$30 \div 10 =$ _____	57	$90 \div 10 =$ _____
18	$10 \times 6 =$ _____	38	$110 \div 10 =$ _____	58	$110 \div 10 =$ _____
19	$10 \times 10 =$ _____	39	$60 \div 10 =$ _____	59	$80 \div 10 =$ _____
20	$10 \times 1 =$ _____	40	$20 \div 10 =$ _____	60	$50 \div 10 =$ _____

Time taken

:

3 minute time limit

Score

60

Add up your time

Mins

S1 _____

S2 _____

S3 _____

Total _____

Secs

S1 _____

S2 _____

S3 _____

Total _____

Add up your score

S1 _____

S2 _____

S3 _____

Total _____

Name: _____

Week 35 Session 1

2020-21

2s 5s and 10s

3 a week

Times Tables Rock Stars

5 Times Tables

Licensed to Weston Point Primary School, Runcorn

1	$5 \times 11 =$ _____	21	$5 \times 4 =$ _____	41	$12 \times 5 =$ _____
2	$5 \times 5 =$ _____	22	$5 \times 10 =$ _____	42	$10 \times 5 =$ _____
3	$5 \times 12 =$ _____	23	$5 \times 4 =$ _____	43	$4 \times 5 =$ _____
4	$5 \times 4 =$ _____	24	$5 \times 6 =$ _____	44	$11 \times 5 =$ _____
5	$5 \times 2 =$ _____	25	$5 \times 11 =$ _____	45	$1 \times 5 =$ _____
6	$5 \times 4 =$ _____	26	$5 \times 10 =$ _____	46	$1 \times 5 =$ _____
7	$5 \times 9 =$ _____	27	$5 \times 7 =$ _____	47	$10 \times 5 =$ _____
8	$5 \times 2 =$ _____	28	$5 \times 7 =$ _____	48	$5 \times 5 =$ _____
9	$5 \times 11 =$ _____	29	$5 \times 2 =$ _____	49	$8 \times 5 =$ _____
10	$5 \times 9 =$ _____	30	$5 \times 7 =$ _____	50	$5 \times 5 =$ _____
11	$5 \times 7 =$ _____	31	$3 \times 5 =$ _____	51	$10 \times 5 =$ _____
12	$5 \times 8 =$ _____	32	$3 \times 5 =$ _____	52	$4 \times 5 =$ _____
13	$5 \times 5 =$ _____	33	$8 \times 5 =$ _____	53	$3 \times 5 =$ _____
14	$5 \times 2 =$ _____	34	$6 \times 5 =$ _____	54	$1 \times 5 =$ _____
15	$5 \times 11 =$ _____	35	$7 \times 5 =$ _____	55	$6 \times 5 =$ _____
16	$5 \times 5 =$ _____	36	$9 \times 5 =$ _____	56	$8 \times 5 =$ _____
17	$5 \times 8 =$ _____	37	$2 \times 5 =$ _____	57	$1 \times 5 =$ _____
18	$5 \times 4 =$ _____	38	$12 \times 5 =$ _____	58	$9 \times 5 =$ _____
19	$5 \times 1 =$ _____	39	$9 \times 5 =$ _____	59	$7 \times 5 =$ _____
20	$5 \times 11 =$ _____	40	$6 \times 5 =$ _____	60	$10 \times 5 =$ _____

Time taken

:

🕒 3 minute time limit 🕒

Score

60

What's your rock status?

WANNABE

< 18 correct in 3 mins

GARAGE ROCKER

18-19 correct in 3 mins

BUSKER

20-21 correct in 3 mins

GIGGER

22-24 correct in 3 mins

UNSIGNED ACT

25-29 correct in 3 mins

BREAKTHROUGH ARTIST

30-35 correct in 3 mins

SUPPORT ACT

36-44 correct in 3 mins

HEADLINER

45-59 correct in 3 mins

ROCK STAR

All correct in \leq 3mins

ROCK LEGEND

All correct in \leq 2min

ROCK HERO

All correct in \leq 1 min

**TIMES TABLES
ROCK STARS**

Name: _____

Week 35 Session 2

2020-21

2s 5s and 10s

3 a week

Times Tables Rock Stars

5 Times Tables

Licensed to Weston Point Primary School, Runcorn

1	$35 \div 5 =$ _____	21	$25 \div 5 =$ _____	41	$40 \div 5 =$ _____
2	$20 \div 5 =$ _____	22	$60 \div 5 =$ _____	42	$35 \div 5 =$ _____
3	$20 \div 5 =$ _____	23	$40 \div 5 =$ _____	43	$10 \div 5 =$ _____
4	$60 \div 5 =$ _____	24	$55 \div 5 =$ _____	44	$20 \div 5 =$ _____
5	$45 \div 5 =$ _____	25	$20 \div 5 =$ _____	45	$50 \div 5 =$ _____
6	$25 \div 5 =$ _____	26	$25 \div 5 =$ _____	46	$10 \div 5 =$ _____
7	$40 \div 5 =$ _____	27	$20 \div 5 =$ _____	47	$25 \div 5 =$ _____
8	$40 \div 5 =$ _____	28	$60 \div 5 =$ _____	48	$10 \div 5 =$ _____
9	$50 \div 5 =$ _____	29	$55 \div 5 =$ _____	49	$60 \div 5 =$ _____
10	$50 \div 5 =$ _____	30	$30 \div 5 =$ _____	50	$60 \div 5 =$ _____
11	$25 \div 5 =$ _____	31	$60 \div 5 =$ _____	51	$35 \div 5 =$ _____
12	$50 \div 5 =$ _____	32	$10 \div 5 =$ _____	52	$20 \div 5 =$ _____
13	$25 \div 5 =$ _____	33	$15 \div 5 =$ _____	53	$40 \div 5 =$ _____
14	$15 \div 5 =$ _____	34	$10 \div 5 =$ _____	54	$30 \div 5 =$ _____
15	$20 \div 5 =$ _____	35	$50 \div 5 =$ _____	55	$60 \div 5 =$ _____
16	$35 \div 5 =$ _____	36	$45 \div 5 =$ _____	56	$10 \div 5 =$ _____
17	$25 \div 5 =$ _____	37	$35 \div 5 =$ _____	57	$60 \div 5 =$ _____
18	$25 \div 5 =$ _____	38	$10 \div 5 =$ _____	58	$20 \div 5 =$ _____
19	$35 \div 5 =$ _____	39	$10 \div 5 =$ _____	59	$55 \div 5 =$ _____
20	$45 \div 5 =$ _____	40	$55 \div 5 =$ _____	60	$5 \div 5 =$ _____

Time taken

:

🕒 3 minute time limit 🕒

Score

60

What's your rock status?

WANNABE

< 18 correct in 3 mins

GARAGE ROCKER

18-19 correct in 3 mins

BUSKER

20-21 correct in 3 mins

GIGGER

22-24 correct in 3 mins

UNSIGNED ACT

25-29 correct in 3 mins

BREAKTHROUGH ARTIST

30-35 correct in 3 mins

SUPPORT ACT

36-44 correct in 3 mins

HEADLINER

45-59 correct in 3 mins

ROCK STAR

All correct in \leq 3mins

ROCK LEGEND

All correct in \leq 2min

ROCK HERO

All correct in \leq 1 min

**TIMES TABLES
ROCK STARS**

Name: _____

Week 35 Session 3

2020-21

2s 5s and 10s

3 a week

Times Tables Rock Stars

5 Times Tables

Licensed to Weston Point Primary School, Runcorn

1	$5 \times 5 =$ _____	21	$5 \times 5 =$ _____	41	$10 \div 5 =$ _____
2	$5 \times 10 =$ _____	22	$5 \times 2 =$ _____	42	$40 \div 5 =$ _____
3	$5 \times 9 =$ _____	23	$5 \times 8 =$ _____	43	$60 \div 5 =$ _____
4	$5 \times 8 =$ _____	24	$5 \times 4 =$ _____	44	$15 \div 5 =$ _____
5	$5 \times 2 =$ _____	25	$5 \times 5 =$ _____	45	$20 \div 5 =$ _____
6	$5 \times 5 =$ _____	26	$5 \times 4 =$ _____	46	$10 \div 5 =$ _____
7	$5 \times 7 =$ _____	27	$5 \times 6 =$ _____	47	$35 \div 5 =$ _____
8	$5 \times 6 =$ _____	28	$5 \times 8 =$ _____	48	$40 \div 5 =$ _____
9	$5 \times 11 =$ _____	29	$5 \times 3 =$ _____	49	$10 \div 5 =$ _____
10	$5 \times 11 =$ _____	30	$5 \times 9 =$ _____	50	$25 \div 5 =$ _____
11	$5 \times 9 =$ _____	31	$45 \div 5 =$ _____	51	$50 \div 5 =$ _____
12	$5 \times 3 =$ _____	32	$50 \div 5 =$ _____	52	$60 \div 5 =$ _____
13	$5 \times 11 =$ _____	33	$20 \div 5 =$ _____	53	$45 \div 5 =$ _____
14	$5 \times 5 =$ _____	34	$50 \div 5 =$ _____	54	$40 \div 5 =$ _____
15	$5 \times 3 =$ _____	35	$40 \div 5 =$ _____	55	$10 \div 5 =$ _____
16	$5 \times 7 =$ _____	36	$60 \div 5 =$ _____	56	$5 \div 5 =$ _____
17	$5 \times 3 =$ _____	37	$30 \div 5 =$ _____	57	$35 \div 5 =$ _____
18	$5 \times 5 =$ _____	38	$50 \div 5 =$ _____	58	$45 \div 5 =$ _____
19	$5 \times 1 =$ _____	39	$60 \div 5 =$ _____	59	$50 \div 5 =$ _____
20	$5 \times 4 =$ _____	40	$20 \div 5 =$ _____	60	$40 \div 5 =$ _____

Time taken

:

🕒 3 minute time limit 🕒

Score

60

Add up your time

Mins
S1 _____
S2 _____
S3 _____
Total _____

Secs
S1 _____
S2 _____
S3 _____
Total _____

Add up your score
S1 _____
S2 _____
S3 _____
Total _____

Name: _____

Week 36 Session 1

2020-21

2s 5s and 10s

3 a week

Times Tables Rock Stars

2 Times Tables

Licensed to Weston Point Primary School, Runcorn

1	$2 \times 12 =$ _____	21	$2 \times 1 =$ _____	41	$10 \times 2 =$ _____
2	$2 \times 10 =$ _____	22	$2 \times 4 =$ _____	42	$5 \times 2 =$ _____
3	$2 \times 4 =$ _____	23	$2 \times 12 =$ _____	43	$2 \times 2 =$ _____
4	$2 \times 2 =$ _____	24	$2 \times 12 =$ _____	44	$1 \times 2 =$ _____
5	$2 \times 7 =$ _____	25	$2 \times 6 =$ _____	45	$2 \times 2 =$ _____
6	$2 \times 4 =$ _____	26	$2 \times 6 =$ _____	46	$6 \times 2 =$ _____
7	$2 \times 4 =$ _____	27	$2 \times 11 =$ _____	47	$11 \times 2 =$ _____
8	$2 \times 12 =$ _____	28	$2 \times 12 =$ _____	48	$8 \times 2 =$ _____
9	$2 \times 2 =$ _____	29	$2 \times 2 =$ _____	49	$10 \times 2 =$ _____
10	$2 \times 3 =$ _____	30	$2 \times 12 =$ _____	50	$7 \times 2 =$ _____
11	$2 \times 8 =$ _____	31	$6 \times 2 =$ _____	51	$7 \times 2 =$ _____
12	$2 \times 7 =$ _____	32	$12 \times 2 =$ _____	52	$6 \times 2 =$ _____
13	$2 \times 11 =$ _____	33	$10 \times 2 =$ _____	53	$11 \times 2 =$ _____
14	$2 \times 8 =$ _____	34	$2 \times 2 =$ _____	54	$10 \times 2 =$ _____
15	$2 \times 8 =$ _____	35	$11 \times 2 =$ _____	55	$4 \times 2 =$ _____
16	$2 \times 9 =$ _____	36	$2 \times 2 =$ _____	56	$1 \times 2 =$ _____
17	$2 \times 6 =$ _____	37	$8 \times 2 =$ _____	57	$9 \times 2 =$ _____
18	$2 \times 11 =$ _____	38	$1 \times 2 =$ _____	58	$9 \times 2 =$ _____
19	$2 \times 10 =$ _____	39	$3 \times 2 =$ _____	59	$1 \times 2 =$ _____
20	$2 \times 3 =$ _____	40	$7 \times 2 =$ _____	60	$12 \times 2 =$ _____

Time taken

:

🕒 3 minute time limit 🕒

Score

60

What's your rock status?

WANNABE

< 18 correct in 3 mins

GARAGE ROCKER

18-19 correct in 3 mins

BUSKER

20-21 correct in 3 mins

GIGGER

22-24 correct in 3 mins

UNSIGNED ACT

25-29 correct in 3 mins

BREAKTHROUGH ARTIST

30-35 correct in 3 mins

SUPPORT ACT

36-44 correct in 3 mins

HEADLINER

45-59 correct in 3 mins

ROCK STAR

All correct in \leq 3mins

ROCK LEGEND

All correct in \leq 2min

ROCK HERO

All correct in \leq 1 min

**TIMES TABLES
ROCK STARS**

Name: _____

Week 36 Session 2

2020-21

2s 5s and 10s

3 a week

Times Tables Rock Stars

2 Times Tables

Licensed to Weston Point Primary School, Runcorn

1	$18 \div 2 =$ _____	21	$12 \div 2 =$ _____	41	$14 \div 2 =$ _____
2	$6 \div 2 =$ _____	22	$2 \div 2 =$ _____	42	$6 \div 2 =$ _____
3	$16 \div 2 =$ _____	23	$16 \div 2 =$ _____	43	$24 \div 2 =$ _____
4	$20 \div 2 =$ _____	24	$8 \div 2 =$ _____	44	$10 \div 2 =$ _____
5	$14 \div 2 =$ _____	25	$2 \div 2 =$ _____	45	$20 \div 2 =$ _____
6	$2 \div 2 =$ _____	26	$14 \div 2 =$ _____	46	$20 \div 2 =$ _____
7	$4 \div 2 =$ _____	27	$8 \div 2 =$ _____	47	$20 \div 2 =$ _____
8	$6 \div 2 =$ _____	28	$12 \div 2 =$ _____	48	$20 \div 2 =$ _____
9	$14 \div 2 =$ _____	29	$10 \div 2 =$ _____	49	$20 \div 2 =$ _____
10	$22 \div 2 =$ _____	30	$8 \div 2 =$ _____	50	$10 \div 2 =$ _____
11	$2 \div 2 =$ _____	31	$12 \div 2 =$ _____	51	$24 \div 2 =$ _____
12	$20 \div 2 =$ _____	32	$2 \div 2 =$ _____	52	$6 \div 2 =$ _____
13	$10 \div 2 =$ _____	33	$4 \div 2 =$ _____	53	$12 \div 2 =$ _____
14	$14 \div 2 =$ _____	34	$22 \div 2 =$ _____	54	$4 \div 2 =$ _____
15	$12 \div 2 =$ _____	35	$22 \div 2 =$ _____	55	$12 \div 2 =$ _____
16	$12 \div 2 =$ _____	36	$20 \div 2 =$ _____	56	$16 \div 2 =$ _____
17	$20 \div 2 =$ _____	37	$4 \div 2 =$ _____	57	$4 \div 2 =$ _____
18	$16 \div 2 =$ _____	38	$18 \div 2 =$ _____	58	$12 \div 2 =$ _____
19	$24 \div 2 =$ _____	39	$24 \div 2 =$ _____	59	$8 \div 2 =$ _____
20	$16 \div 2 =$ _____	40	$20 \div 2 =$ _____	60	$12 \div 2 =$ _____

Time taken

:

🕒 3 minute time limit 🕒

Score

60

What's your rock status?

WANNABE

< 18 correct in 3 mins

GARAGE ROCKER

18-19 correct in 3 mins

BUSKER

20-21 correct in 3 mins

GIGGER

22-24 correct in 3 mins

UNSIGNED ACT

25-29 correct in 3 mins

BREAKTHROUGH ARTIST

30-35 correct in 3 mins

SUPPORT ACT

36-44 correct in 3 mins

HEADLINER

45-59 correct in 3 mins

ROCK STAR

All correct in \leq 3mins

ROCK LEGEND

All correct in \leq 2min

ROCK HERO

All correct in \leq 1 min

**TIMES TABLES
ROCK STARS**

Name: _____

Week 36 Session 3

2020-21

2s 5s and 10s

3 a week

Times Tables Rock Stars

2 Times Tables

Licensed to Weston Point Primary School, Runcorn

1	$2 \times 12 =$ _____	21	$2 \times 9 =$ _____	41	$2 \div 2 =$ _____
2	$2 \times 1 =$ _____	22	$2 \times 7 =$ _____	42	$22 \div 2 =$ _____
3	$2 \times 7 =$ _____	23	$2 \times 11 =$ _____	43	$10 \div 2 =$ _____
4	$2 \times 6 =$ _____	24	$2 \times 11 =$ _____	44	$22 \div 2 =$ _____
5	$2 \times 1 =$ _____	25	$2 \times 4 =$ _____	45	$8 \div 2 =$ _____
6	$2 \times 4 =$ _____	26	$2 \times 7 =$ _____	46	$12 \div 2 =$ _____
7	$2 \times 11 =$ _____	27	$2 \times 8 =$ _____	47	$12 \div 2 =$ _____
8	$2 \times 5 =$ _____	28	$2 \times 7 =$ _____	48	$2 \div 2 =$ _____
9	$2 \times 6 =$ _____	29	$2 \times 3 =$ _____	49	$4 \div 2 =$ _____
10	$2 \times 9 =$ _____	30	$2 \times 8 =$ _____	50	$18 \div 2 =$ _____
11	$2 \times 10 =$ _____	31	$20 \div 2 =$ _____	51	$10 \div 2 =$ _____
12	$2 \times 12 =$ _____	32	$20 \div 2 =$ _____	52	$22 \div 2 =$ _____
13	$2 \times 12 =$ _____	33	$22 \div 2 =$ _____	53	$8 \div 2 =$ _____
14	$2 \times 10 =$ _____	34	$24 \div 2 =$ _____	54	$2 \div 2 =$ _____
15	$2 \times 12 =$ _____	35	$4 \div 2 =$ _____	55	$10 \div 2 =$ _____
16	$2 \times 7 =$ _____	36	$22 \div 2 =$ _____	56	$6 \div 2 =$ _____
17	$2 \times 9 =$ _____	37	$6 \div 2 =$ _____	57	$6 \div 2 =$ _____
18	$2 \times 9 =$ _____	38	$10 \div 2 =$ _____	58	$16 \div 2 =$ _____
19	$2 \times 6 =$ _____	39	$6 \div 2 =$ _____	59	$6 \div 2 =$ _____
20	$2 \times 7 =$ _____	40	$18 \div 2 =$ _____	60	$8 \div 2 =$ _____

Time taken

:

🕒 3 minute time limit 🕒

Score

60

Add up your time

Mins
S1 _____
S2 _____
S3 _____
Total _____

Secs
S1 _____
S2 _____
S3 _____
Total _____

Add up your score
S1 _____
S2 _____
S3 _____
Total _____

Name: _____

Week 37 Session 1

2020-21

2s 5s and 10s

3 a week

Times Tables Rock Stars

2,5,10 Times Tables

Licensed to Weston Point Primary School, Runcorn

1	$5 \times 12 =$ _____	21	$2 \times 5 =$ _____	41	$8 \times 2 =$ _____
2	$2 \times 8 =$ _____	22	$10 \times 12 =$ _____	42	$3 \times 5 =$ _____
3	$2 \times 6 =$ _____	23	$2 \times 9 =$ _____	43	$3 \times 10 =$ _____
4	$5 \times 9 =$ _____	24	$5 \times 7 =$ _____	44	$8 \times 2 =$ _____
5	$10 \times 3 =$ _____	25	$2 \times 7 =$ _____	45	$7 \times 10 =$ _____
6	$2 \times 2 =$ _____	26	$2 \times 10 =$ _____	46	$6 \times 10 =$ _____
7	$2 \times 7 =$ _____	27	$2 \times 5 =$ _____	47	$1 \times 10 =$ _____
8	$2 \times 6 =$ _____	28	$5 \times 7 =$ _____	48	$3 \times 5 =$ _____
9	$10 \times 5 =$ _____	29	$10 \times 2 =$ _____	49	$11 \times 10 =$ _____
10	$5 \times 3 =$ _____	30	$10 \times 11 =$ _____	50	$7 \times 2 =$ _____
11	$10 \times 4 =$ _____	31	$5 \times 5 =$ _____	51	$8 \times 2 =$ _____
12	$2 \times 4 =$ _____	32	$3 \times 2 =$ _____	52	$4 \times 10 =$ _____
13	$10 \times 1 =$ _____	33	$9 \times 10 =$ _____	53	$5 \times 5 =$ _____
14	$2 \times 3 =$ _____	34	$5 \times 10 =$ _____	54	$9 \times 2 =$ _____
15	$10 \times 8 =$ _____	35	$8 \times 5 =$ _____	55	$8 \times 10 =$ _____
16	$5 \times 2 =$ _____	36	$5 \times 2 =$ _____	56	$8 \times 10 =$ _____
17	$5 \times 3 =$ _____	37	$6 \times 5 =$ _____	57	$10 \times 5 =$ _____
18	$5 \times 6 =$ _____	38	$8 \times 10 =$ _____	58	$11 \times 10 =$ _____
19	$5 \times 3 =$ _____	39	$3 \times 10 =$ _____	59	$11 \times 10 =$ _____
20	$2 \times 7 =$ _____	40	$1 \times 2 =$ _____	60	$12 \times 5 =$ _____

Time taken

:

🕒 3 minute time limit 🕒

Score

60

What's your rock status?

WANNABE

< 18 correct in 3 mins

GARAGE ROCKER

18-19 correct in 3 mins

BUSKER

20-21 correct in 3 mins

GIGGER

22-24 correct in 3 mins

UNSIGNED ACT

25-29 correct in 3 mins

BREAKTHROUGH ARTIST

30-35 correct in 3 mins

SUPPORT ACT

36-44 correct in 3 mins

HEADLINER

45-59 correct in 3 mins

ROCK STAR

All correct in \leq 3mins

ROCK LEGEND

All correct in \leq 2min

ROCK HERO

All correct in \leq 1 min

**TIMES TABLES
ROCK STARS**

Name: _____

Week 37 Session 2

2020-21

2s 5s and 10s

3 a week

**Times Tables
Rock Stars**

**2,5,10
Times Tables**

Licensed to Weston Point Primary School, Runcorn

1	$50 \div 10 =$ _____	21	$22 \div 2 =$ _____	41	$5 \div 5 =$ _____
2	$50 \div 10 =$ _____	22	$60 \div 5 =$ _____	42	$16 \div 2 =$ _____
3	$24 \div 2 =$ _____	23	$80 \div 10 =$ _____	43	$20 \div 10 =$ _____
4	$4 \div 2 =$ _____	24	$45 \div 5 =$ _____	44	$20 \div 5 =$ _____
5	$100 \div 10 =$ _____	25	$14 \div 2 =$ _____	45	$20 \div 5 =$ _____
6	$14 \div 2 =$ _____	26	$60 \div 5 =$ _____	46	$35 \div 5 =$ _____
7	$2 \div 2 =$ _____	27	$15 \div 5 =$ _____	47	$90 \div 10 =$ _____
8	$100 \div 10 =$ _____	28	$16 \div 2 =$ _____	48	$70 \div 10 =$ _____
9	$70 \div 10 =$ _____	29	$14 \div 2 =$ _____	49	$20 \div 5 =$ _____
10	$120 \div 10 =$ _____	30	$20 \div 2 =$ _____	50	$30 \div 10 =$ _____
11	$30 \div 5 =$ _____	31	$15 \div 5 =$ _____	51	$110 \div 10 =$ _____
12	$50 \div 5 =$ _____	32	$20 \div 2 =$ _____	52	$50 \div 10 =$ _____
13	$10 \div 2 =$ _____	33	$20 \div 5 =$ _____	53	$18 \div 2 =$ _____
14	$55 \div 5 =$ _____	34	$90 \div 10 =$ _____	54	$40 \div 10 =$ _____
15	$20 \div 10 =$ _____	35	$2 \div 2 =$ _____	55	$40 \div 5 =$ _____
16	$50 \div 5 =$ _____	36	$10 \div 2 =$ _____	56	$2 \div 2 =$ _____
17	$10 \div 2 =$ _____	37	$30 \div 5 =$ _____	57	$5 \div 5 =$ _____
18	$12 \div 2 =$ _____	38	$2 \div 2 =$ _____	58	$20 \div 10 =$ _____
19	$5 \div 5 =$ _____	39	$40 \div 10 =$ _____	59	$14 \div 2 =$ _____
20	$5 \div 5 =$ _____	40	$50 \div 10 =$ _____	60	$15 \div 5 =$ _____

Time taken

:

3 minute time limit

Score

60

What's your rock status?

WANNABE

< 18 correct in 3 mins

GARAGE ROCKER

18-19 correct in 3 mins

BUSKER

20-21 correct in 3 mins

GIGGER

22-24 correct in 3 mins

UNSIGNED ACT

25-29 correct in 3 mins

BREAKTHROUGH ARTIST

30-35 correct in 3 mins

SUPPORT ACT

36-44 correct in 3 mins

HEADLINER

45-59 correct in 3 mins

ROCK STAR

All correct in \leq 3mins

ROCK LEGEND

All correct in \leq 2min

ROCK HERO

All correct in \leq 1 min

**TIMES TABLES
ROCK STARS**

Name: _____

Week 37 Session 3

2020-21

2s 5s and 10s

3 a week

Times Tables Rock Stars

2,5,10 Times Tables

Licensed to Weston Point Primary School, Runcorn

1	$10 \times 4 =$ _____	21	$5 \times 8 =$ _____	41	$20 \div 5 =$ _____
2	$2 \times 2 =$ _____	22	$5 \times 10 =$ _____	42	$30 \div 10 =$ _____
3	$5 \times 9 =$ _____	23	$2 \times 4 =$ _____	43	$50 \div 5 =$ _____
4	$2 \times 4 =$ _____	24	$5 \times 6 =$ _____	44	$2 \div 2 =$ _____
5	$5 \times 2 =$ _____	25	$10 \times 12 =$ _____	45	$40 \div 10 =$ _____
6	$10 \times 9 =$ _____	26	$10 \times 6 =$ _____	46	$30 \div 10 =$ _____
7	$2 \times 12 =$ _____	27	$5 \times 1 =$ _____	47	$60 \div 10 =$ _____
8	$5 \times 10 =$ _____	28	$2 \times 9 =$ _____	48	$60 \div 5 =$ _____
9	$10 \times 5 =$ _____	29	$10 \times 5 =$ _____	49	$12 \div 2 =$ _____
10	$10 \times 4 =$ _____	30	$10 \times 2 =$ _____	50	$90 \div 10 =$ _____
11	$5 \times 12 =$ _____	31	$10 \div 10 =$ _____	51	$30 \div 10 =$ _____
12	$5 \times 11 =$ _____	32	$24 \div 2 =$ _____	52	$4 \div 2 =$ _____
13	$10 \times 11 =$ _____	33	$4 \div 2 =$ _____	53	$90 \div 10 =$ _____
14	$2 \times 3 =$ _____	34	$12 \div 2 =$ _____	54	$45 \div 5 =$ _____
15	$2 \times 10 =$ _____	35	$20 \div 10 =$ _____	55	$70 \div 10 =$ _____
16	$10 \times 4 =$ _____	36	$12 \div 2 =$ _____	56	$15 \div 5 =$ _____
17	$2 \times 4 =$ _____	37	$100 \div 10 =$ _____	57	$120 \div 10 =$ _____
18	$5 \times 8 =$ _____	38	$4 \div 2 =$ _____	58	$40 \div 10 =$ _____
19	$2 \times 1 =$ _____	39	$100 \div 10 =$ _____	59	$60 \div 10 =$ _____
20	$2 \times 12 =$ _____	40	$10 \div 2 =$ _____	60	$4 \div 2 =$ _____

Time taken

:

🕒 3 minute time limit 🕒

Score

60

Add up your time

Mins	
S1	_____
S2	_____
S3	_____
Total	_____

Secs	
S1	_____
S2	_____
S3	_____
Total	_____

Add up your score	
S1	_____
S2	_____
S3	_____
Total	_____